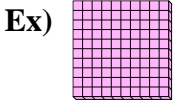
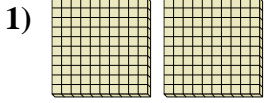




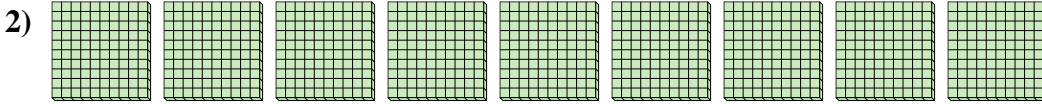
Use the blocks to determine the total quantities.



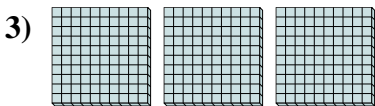
 1 Hundreds = 10 Tens = 100 Ones



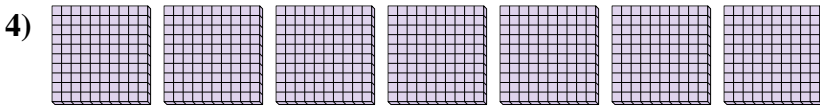
 Hundreds = Tens = Ones



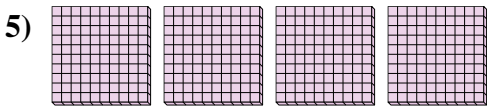
 Hundreds = Tens = Ones



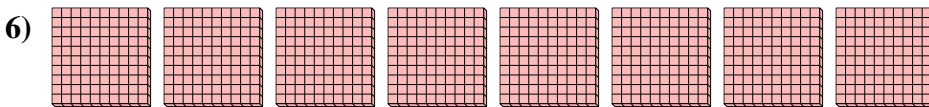
 Hundreds = Tens = Ones



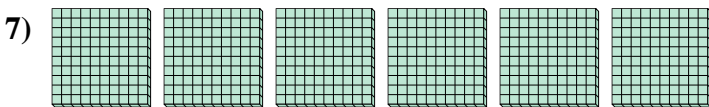
 Hundreds = Tens = Ones



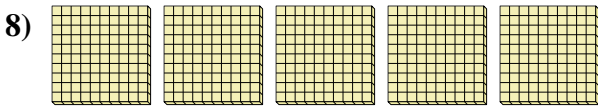
 Hundreds = Tens = Ones



 Hundreds = Tens = Ones



 Hundreds = Tens = Ones



 Hundreds = Tens = Ones

Answers

Ex. 1 10 100

1. _____

2. _____

3. _____

4. _____

5. _____

6. _____


7. _____

8. _____



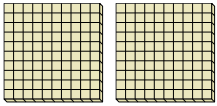
Use the blocks to determine the total quantities.

Ex)




1 Hundreds = 10 Tens = 100 Ones

1)




2 Hundreds = 20 Tens = 200 Ones

2)




9 Hundreds = 90 Tens = 900 Ones

3)



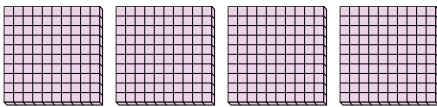
3 Hundreds = 30 Tens = 300 Ones

4)



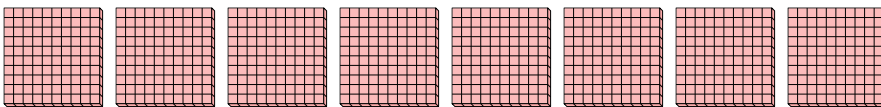
7 Hundreds = 70 Tens = 700 Ones

5)



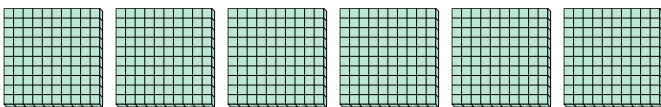
4 Hundreds = 40 Tens = 400 Ones

6)




8 Hundreds = 80 Tens = 800 Ones

7)



6 Hundreds = 60 Tens = 600 Ones

8)



5 Hundreds = 50 Tens = 500 Ones

Answers

Ex. 1 10 100

1. 2 20 200

2. 9 90 900

3. 3 30 300

4. 7 70 700

5. 4 40 400

6. 8 80 800

7. 6 60 600

8. 5 50 500