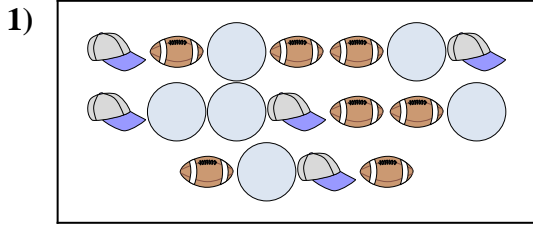




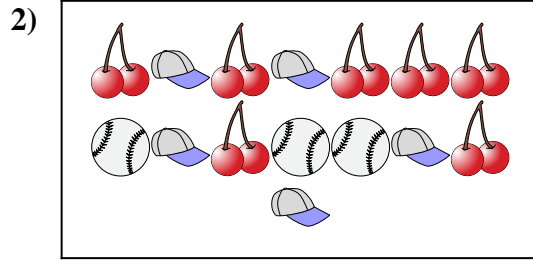
Compare the number of shapes.



Are there more or more ?

A.


B.



Are there more or more ?

A.

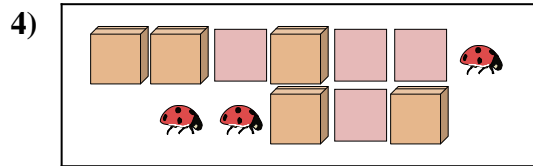
B.



Are there more or more ?

A.


B.



Are there more or more ?

A.

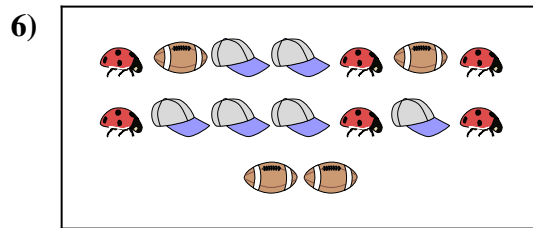
B.



Are there less or less ?

A.

B.



Are there less or less ?

A.

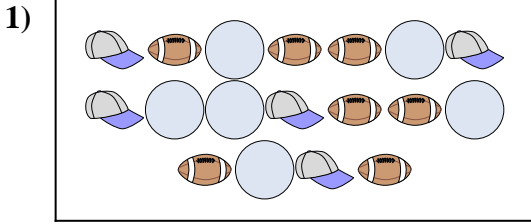
B.

Answers

1. \_\_\_\_\_
2. \_\_\_\_\_
3. \_\_\_\_\_
4. \_\_\_\_\_
5. \_\_\_\_\_
6. \_\_\_\_\_



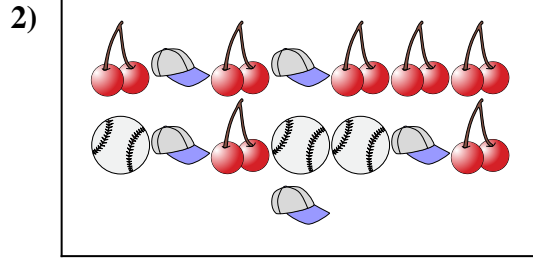
Compare the number of shapes.



Are there more or more ?

A.


B.



Are there more or more ?

A.


B.



Are there more or more ?

A.


B.



Are there more or more ?

A.

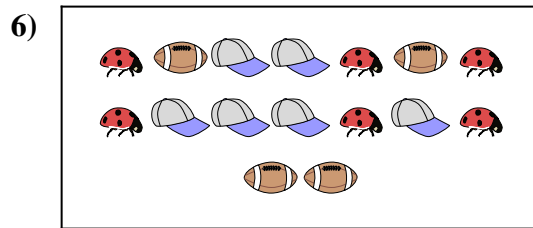
B.



Are there less or less ?

A.

B.



Are there less or less ?

A.

B.

Answers

1.   **A**  

2.   **A**  

3.   **A**  

4.   **B**  

5.   **B**  

6.   **A**