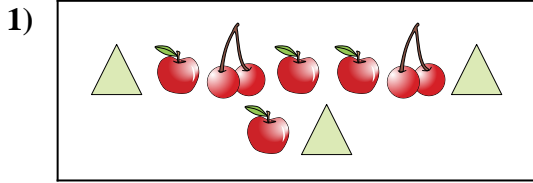





Compare the number of shapes.



Are there less or less ?

A.

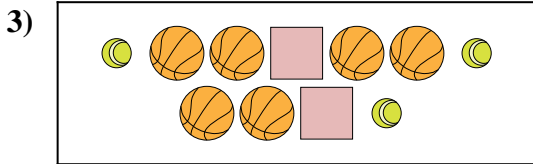
B.



Are there less or less ?

A.


B.



Are there more or more ?

A.


B.



Are there more or more ?

A.


B.



Are there more or more ?

A.

B.



Are there less or less ?

A.

B.

Answers

1. \_\_\_\_\_

2. \_\_\_\_\_

3. \_\_\_\_\_

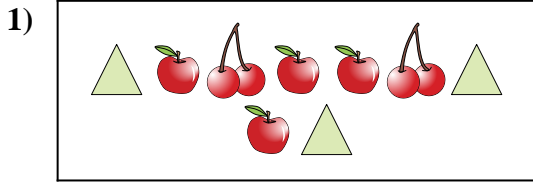
4. \_\_\_\_\_

5. \_\_\_\_\_

6. \_\_\_\_\_




Compare the number of shapes.



Are there less or less ?

A.

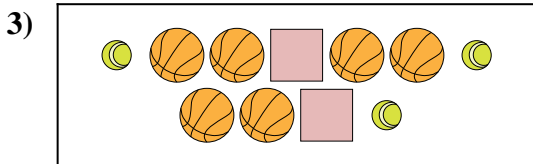
B.



Are there less or less ?

A.


B.



Are there more or more ?

A.


B.



Are there more or more ?

A.


B.



Are there more or more ?

A.

B.



Are there less or less ?

A.

B.

Answers

1.   **A**  

2.   **B**  

3.   **B**  

4.   **B**  

5.   **A**  

6.   **B**