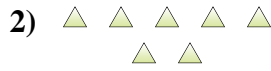
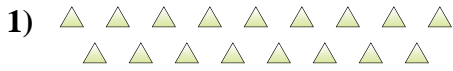




Determine if the number of shapes is even or odd.



Answers

1. \_\_\_\_\_

2. \_\_\_\_\_

3. \_\_\_\_\_

4. \_\_\_\_\_

5. \_\_\_\_\_

6. \_\_\_\_\_

7. \_\_\_\_\_

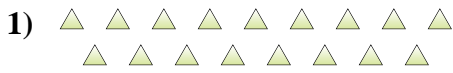
8. \_\_\_\_\_

9. \_\_\_\_\_

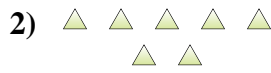
10. \_\_\_\_\_



Determine if the number of shapes is even or odd.



17



7



7



17



12



7



5



15



9



14

Answers

1. Odd

2. Odd

3. Odd

4. Odd

5. Even

6. Odd

7. Odd

8. Odd

9. Odd

10. Even