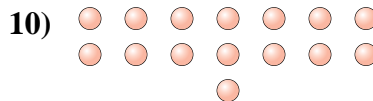
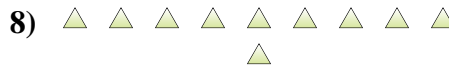
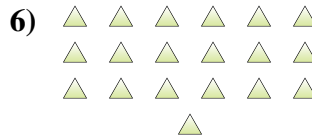
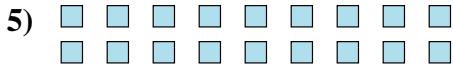
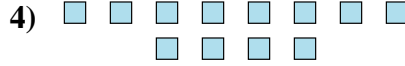




Determine if the number of shapes is even or odd.



Answers

1. _____

2. _____

3. _____

4. _____

5. _____

6. _____

7. _____

8. _____

9. _____

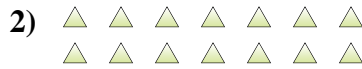
10. _____



Determine if the number of shapes is even or odd.



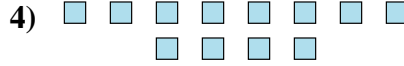
7



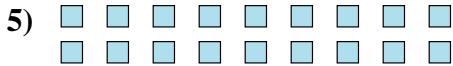
14



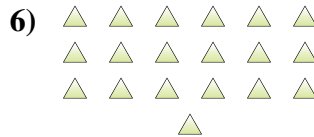
6



12



18



19



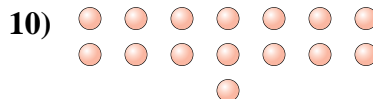
8



10



8



15

Answers

1. Odd

2. Even

3. Even

4. Even

5. Even

6. Odd

7. Even

8. Even

9. Even

10. Odd