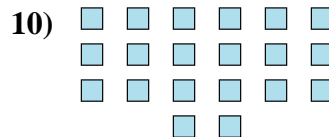
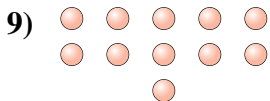
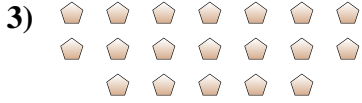




Determine if the number of shapes is even or odd.



Answers

1. _____

2. _____

3. _____

4. _____

5. _____

6. _____

7. _____

8. _____

9. _____

10. _____



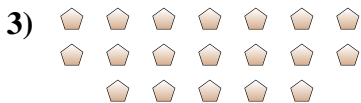
Determine if the number of shapes is even or odd.



18



12



19



9



9



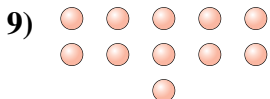
11



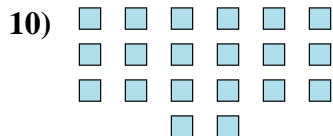
5



5



11



20

Answers

1. Even

2. Even

3. Odd

4. Odd

5. Odd

6. Odd

7. Odd

8. Odd

9. Odd

10. Even