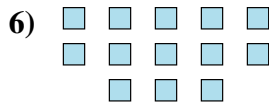
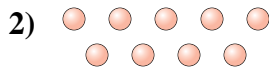
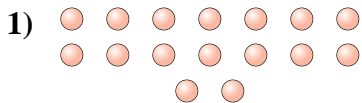




Determine if the number of shapes is even or odd.



Answers

1. \_\_\_\_\_

2. \_\_\_\_\_

3. \_\_\_\_\_

4. \_\_\_\_\_

5. \_\_\_\_\_

6. \_\_\_\_\_

7. \_\_\_\_\_

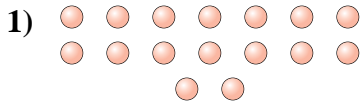
8. \_\_\_\_\_

9. \_\_\_\_\_

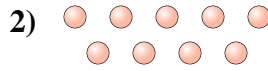
10. \_\_\_\_\_



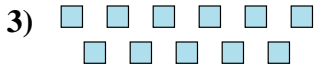
Determine if the number of shapes is even or odd.



16



9



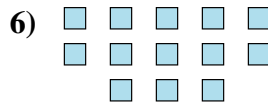
11



5



5



13



19



6



7



10

Answers

1. Even

2. Odd

3. Odd

4. Odd

5. Odd

6. Odd

7. Odd

8. Even

9. Odd

10. Even