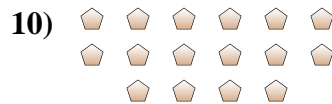

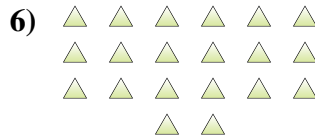
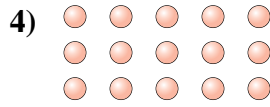
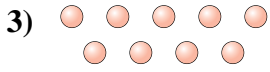





Determine if the number of shapes is even or odd.




Answers

1. _____
2. _____
3. _____
4. _____
5. _____
6. _____
7. _____
8. _____
9. _____
10. _____



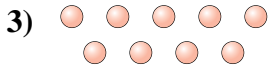
Determine if the number of shapes is even or odd.



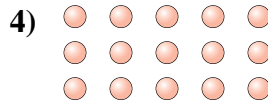
19



10



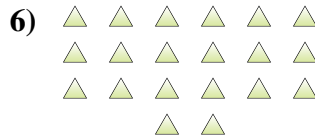
9



15



6




20



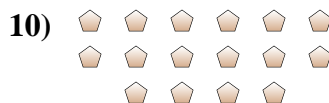
20



11



19



16

Answers

1. Odd

2. Even

3. Odd

4. Odd

5. Even

6. Even

7. Even

8. Odd

9. Odd

10. Even