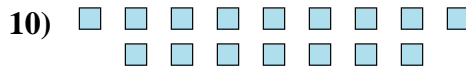
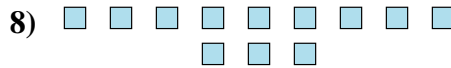
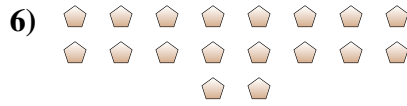
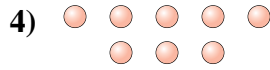
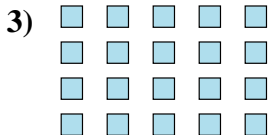
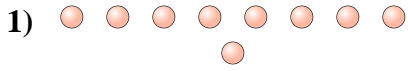




Determine if the number of shapes is even or odd.

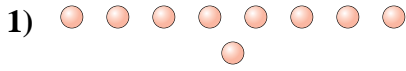


Answers

- 1. _____
- 2. _____
- 3. _____
- 4. _____
- 5. _____
- 6. _____
- 7. _____
- 8. _____
- 9. _____
- 10. _____



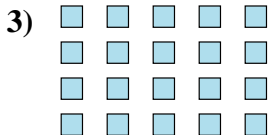
Determine if the number of shapes is even or odd.



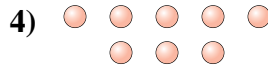
9



10



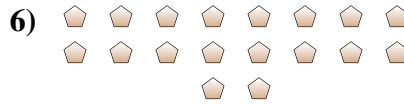
20




8



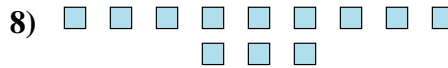
18



18



7



12



12



16

Answers

1. Odd

2. Even

3. Even

4. Even

5. Even

6. Even

7. Odd

8. Even

9. Even

10. Even