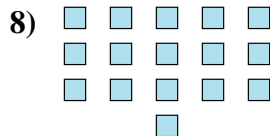
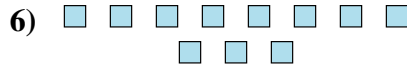
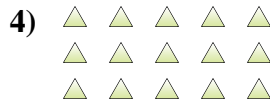
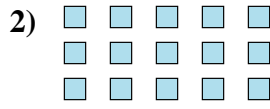




Determine if the number of shapes is even or odd.



Answers

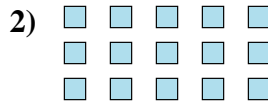
- 1. \_\_\_\_\_
- 2. \_\_\_\_\_
- 3. \_\_\_\_\_
- 4. \_\_\_\_\_
- 5. \_\_\_\_\_
- 6. \_\_\_\_\_
- 7. \_\_\_\_\_
- 8. \_\_\_\_\_
- 9. \_\_\_\_\_
- 10. \_\_\_\_\_



Determine if the number of shapes is even or odd.



5



15



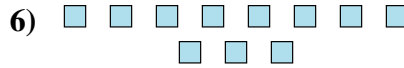
17



15



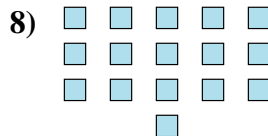
13



11



14



16



5



15

Answers

1. Odd

2. Odd

3. Odd

4. Odd

5. Odd

6. Odd

7. Even

8. Even

9. Odd

10. Odd