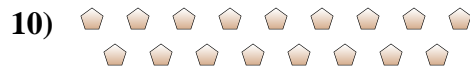
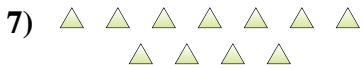
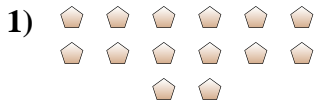




Determine if the number of shapes is even or odd.

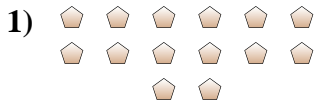


Answers

- 1. _____
- 2. _____
- 3. _____
- 4. _____
- 5. _____
- 6. _____
- 7. _____
- 8. _____
- 9. _____
- 10. _____



Determine if the number of shapes is even or odd.



14



9



14



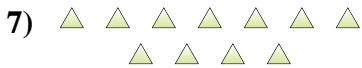
6



6



16



11



12



5



17

Answers

1. Even

2. Odd

3. Even

4. Even

5. Even

6. Even

7. Odd

8. Even

9. Odd

10. Odd