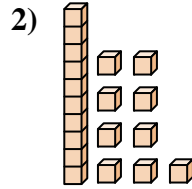
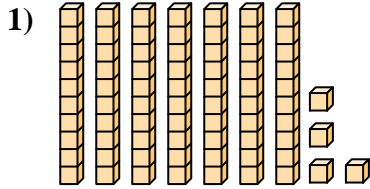




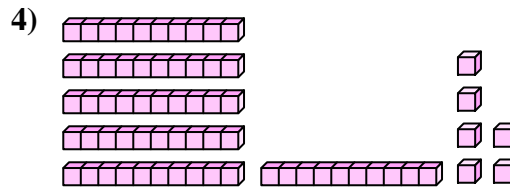
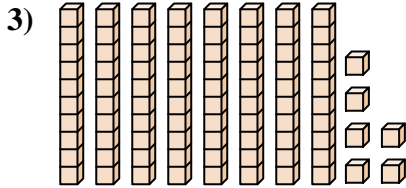
Count the total number of small blocks.

Answers



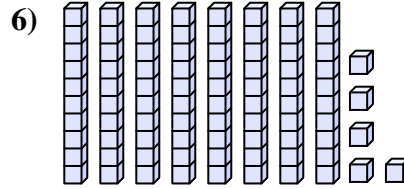
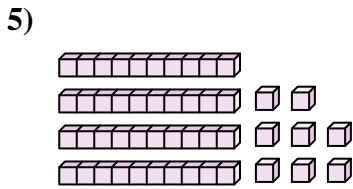
1. _____

2. _____



3. _____

4. _____

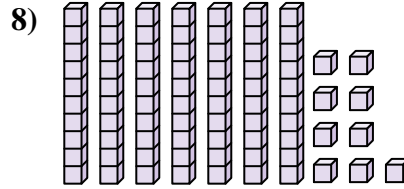
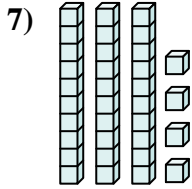


5. _____

6. _____

7. _____

8. _____

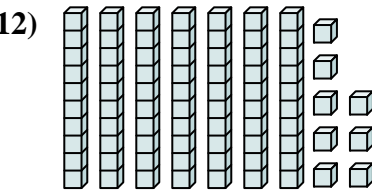
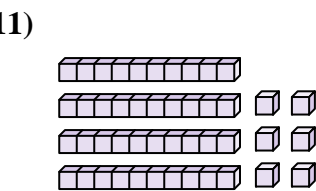
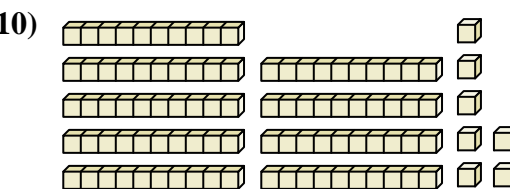
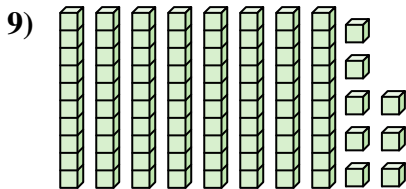


9. _____

10. _____

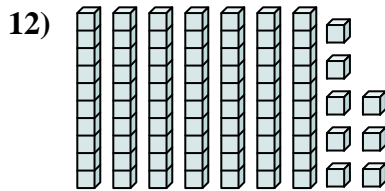
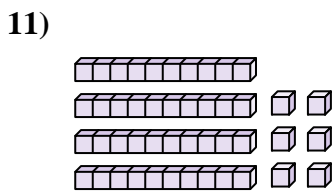
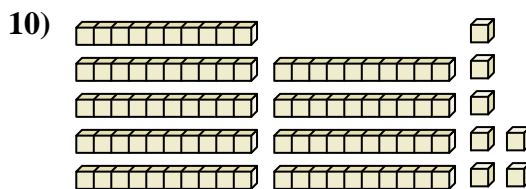
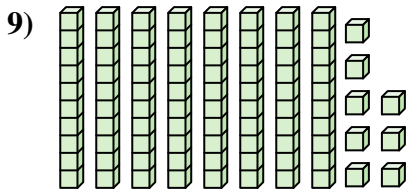
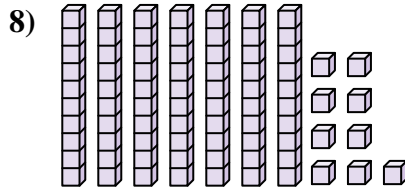
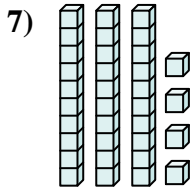
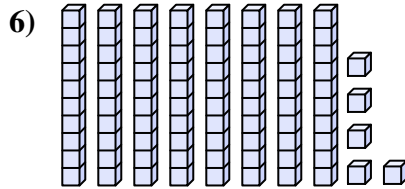
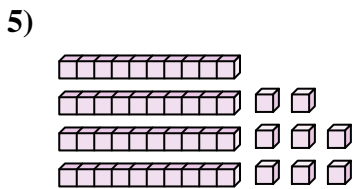
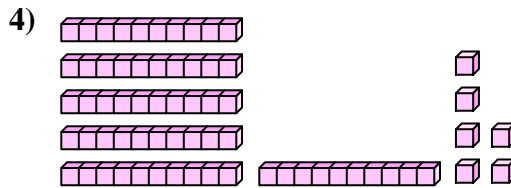
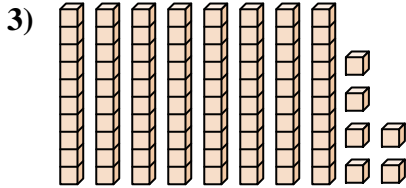
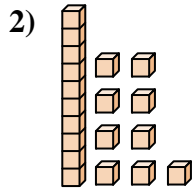
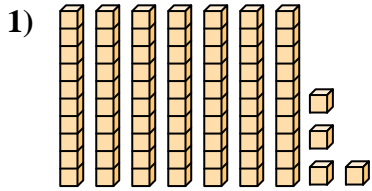
11. _____

12. _____





Count the total number of small blocks.



Answers

1. **74**

2. **19**

3. **86**

4. **66**

5. **48**

6. **85**

7. **34**

8. **79**

9. **88**

10. **97**

11. **46**

12. **78**



Count the total number of small blocks.

74	86	79	66	48
34	88	85	97	19

Answers

1. _____
2. _____
3. _____
4. _____
5. _____
6. _____
7. _____
8. _____
9. _____
10. _____

