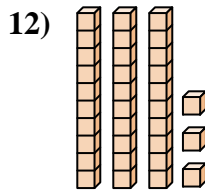
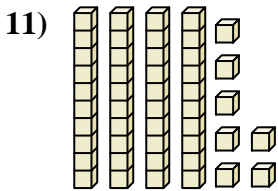
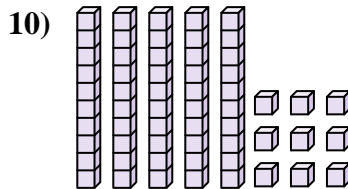
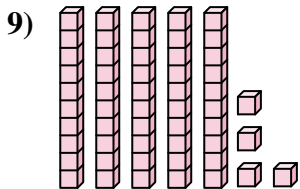
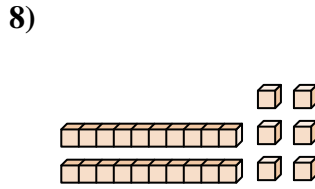
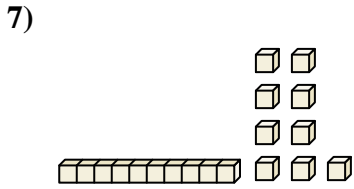
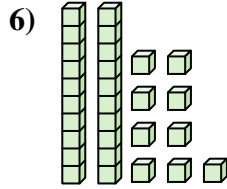
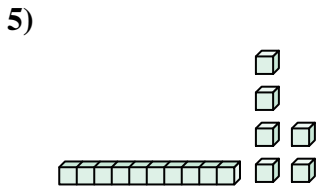
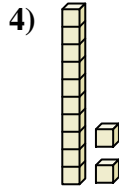
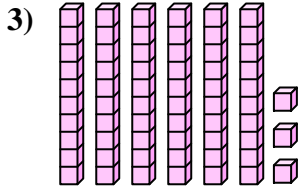
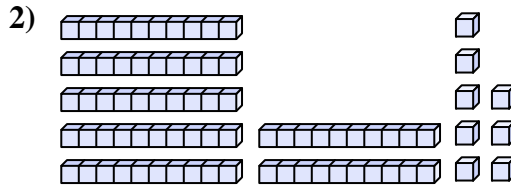
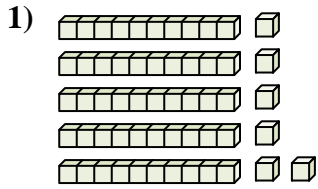




Count the total number of small blocks.

Answers



1. \_\_\_\_\_

2. \_\_\_\_\_

3. \_\_\_\_\_

4. \_\_\_\_\_

5. \_\_\_\_\_

6. \_\_\_\_\_

7. \_\_\_\_\_

8. \_\_\_\_\_

9. \_\_\_\_\_

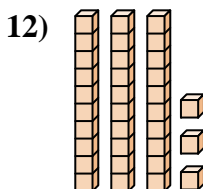
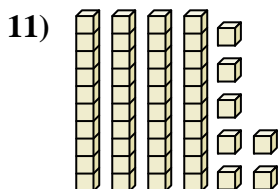
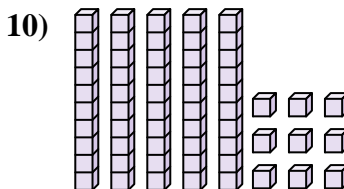

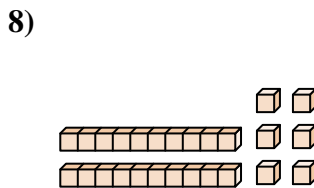
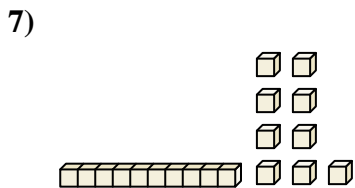
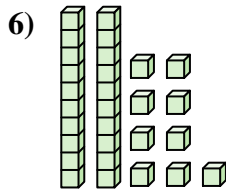
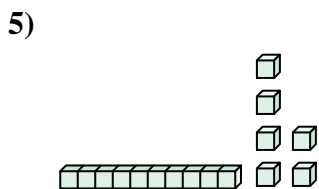
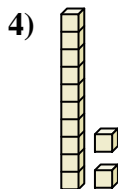
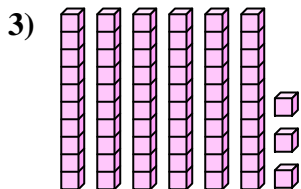
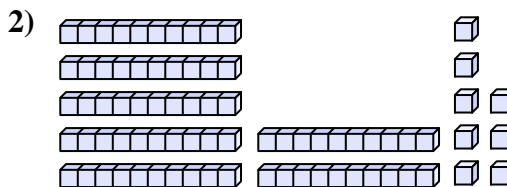
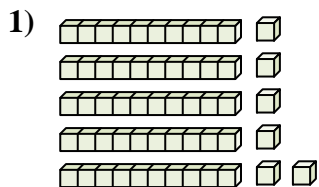
10. \_\_\_\_\_

11. \_\_\_\_\_

12. \_\_\_\_\_



Count the total number of small blocks.



Answers

1. **56**

2. **78**

3. **63**

4. **12**

5. **16**

6. **29**

7. **19**

8. **26**

9. **54**

10. **59**

11. **47**

12. **33**



Count the total number of small blocks.

78	54	56	26	12
29	59	19	16	63

Answers

1. \_\_\_\_\_
2. \_\_\_\_\_
3. \_\_\_\_\_
4. \_\_\_\_\_
5. \_\_\_\_\_
6. \_\_\_\_\_
7. \_\_\_\_\_
8. \_\_\_\_\_
9. \_\_\_\_\_
10. \_\_\_\_\_

