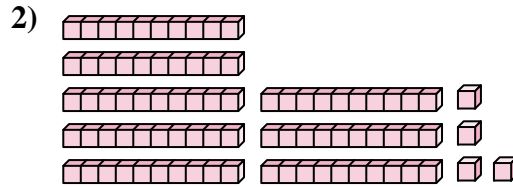
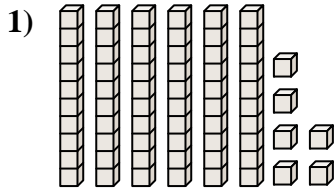




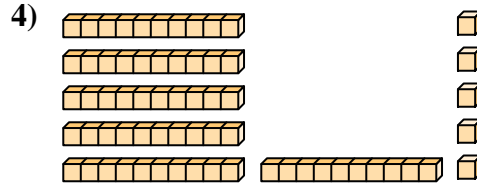
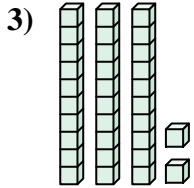
Count the total number of small blocks.

Answers




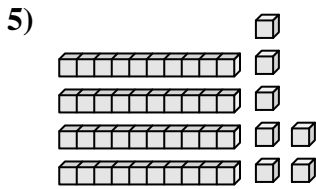
1. _____

2. _____



3. _____

4. _____



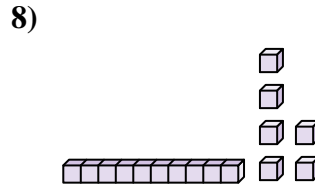
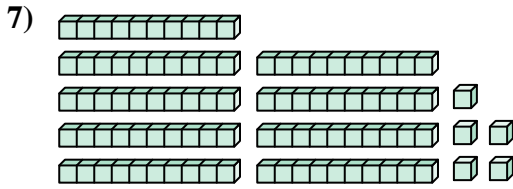
5. _____

6. _____

7. _____

8. _____

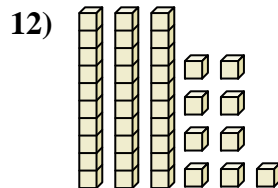
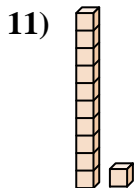
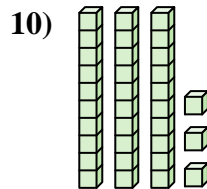
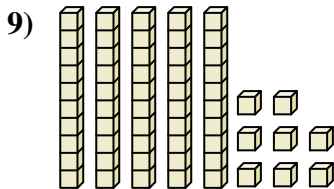
9. _____



10. _____

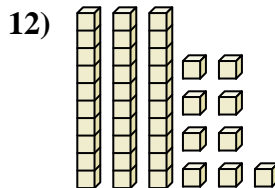
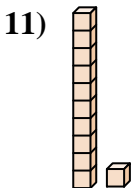
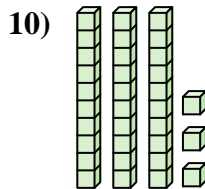
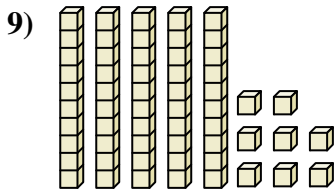
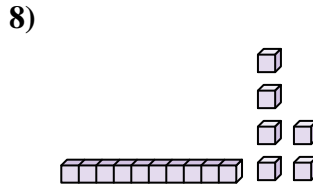
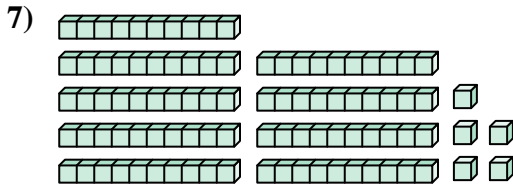

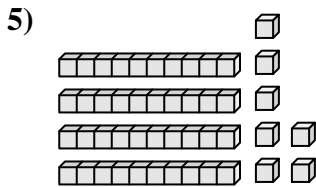
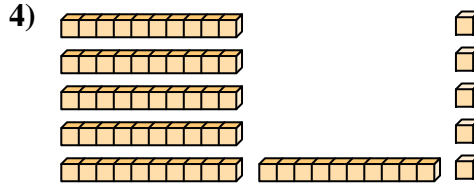
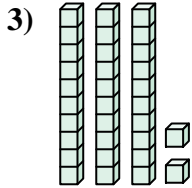
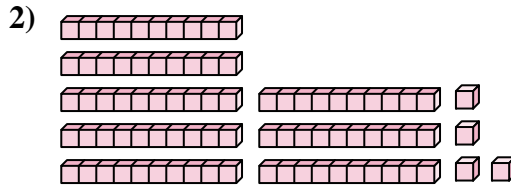
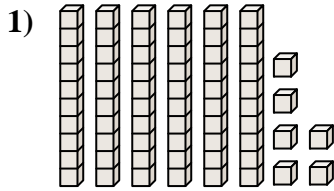
11. _____

12. _____





Count the total number of small blocks.



Answers

1. **66**

2. **84**

3. **32**

4. **65**

5. **47**

6. **53**

7. **95**

8. **16**

9. **58**

10. **33**

11. **11**

12. **39**



Count the total number of small blocks.

Answers

65	47	53	95	58
84	16	33	32	66

1. _____
2. _____
3. _____
4. _____
5. _____
6. _____
7. _____
8. _____
9. _____
10. _____

