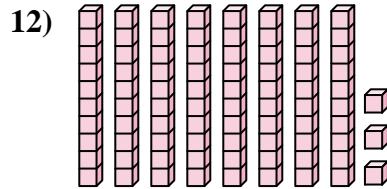
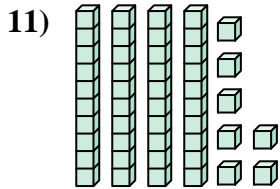
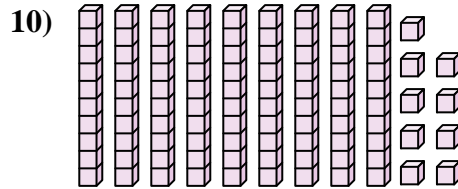
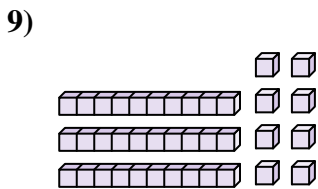
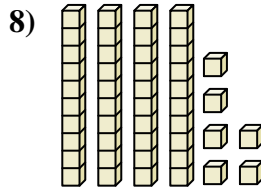
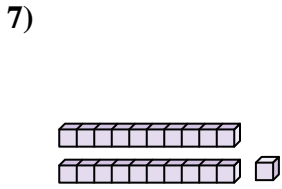
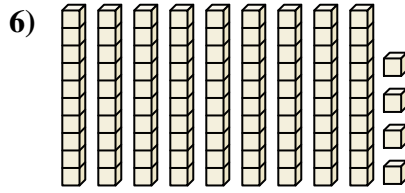
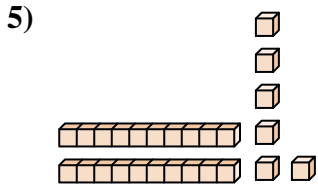
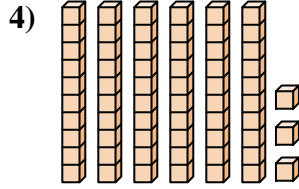
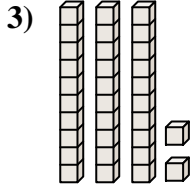
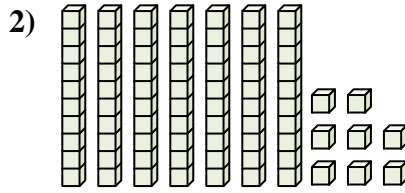
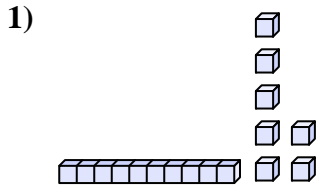


Count the total number of small blocks.

Answers



1. _____

2. _____

3. _____

4. _____

5. _____

6. _____

7. _____

8. _____

9. _____

10. _____

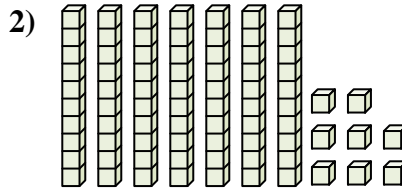
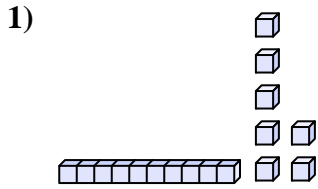
11. _____

12. _____

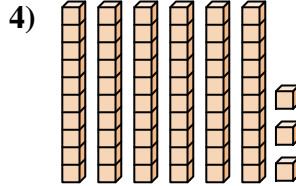
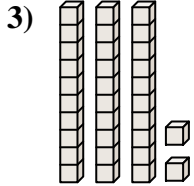


Count the total number of small blocks.

Answers



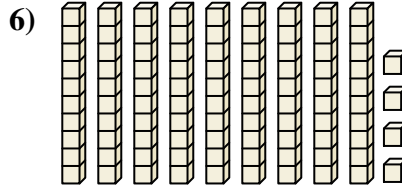
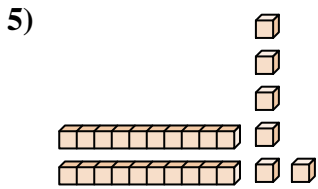
1. 17



2. 78

3. 32

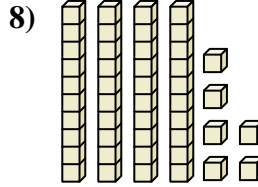
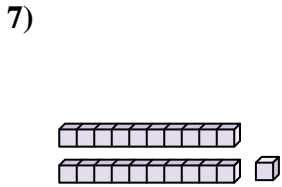
4. 63



5. 26

6. 94

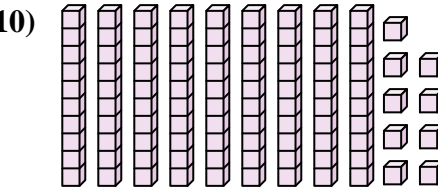
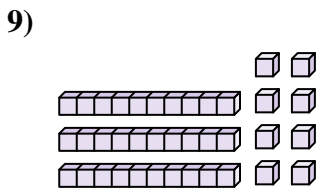
7. 21



8. 46


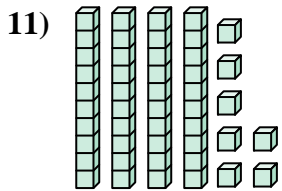
9. 38

10. 99



11. 47

12. 83





Count the total number of small blocks.

99	46	21	78	94
32	17	38	63	26

Answers

1. _____
2. _____
3. _____
4. _____
5. _____
6. _____
7. _____
8. _____
9. _____
10. _____

