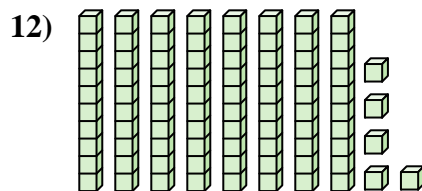
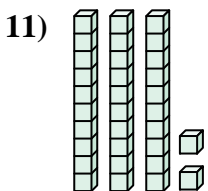
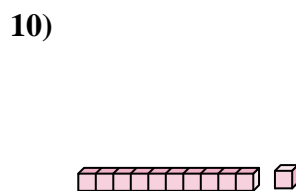
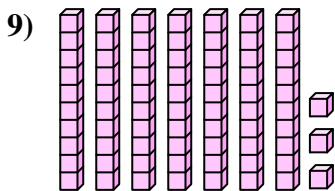
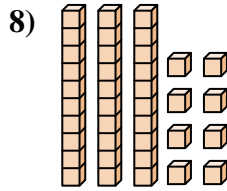
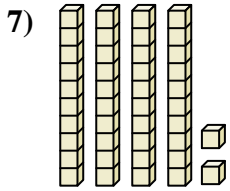
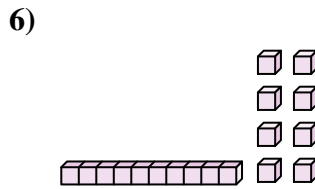
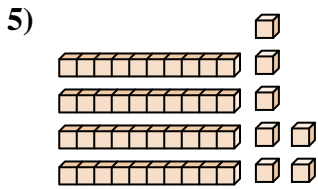
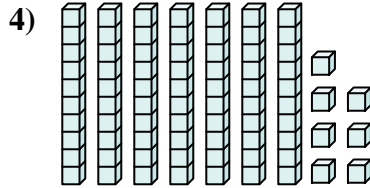
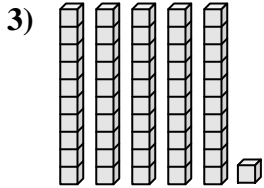
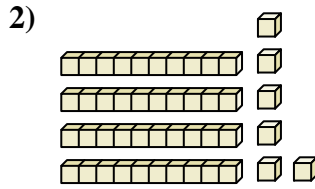
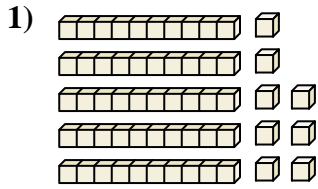




Count the total number of small blocks.

Answers



1. _____

2. _____

3. _____

4. _____

5. _____

6. _____

7. _____

8. _____

9. _____

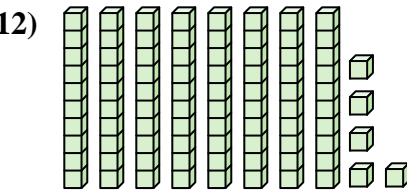
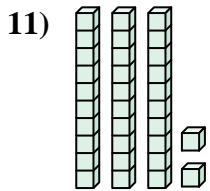
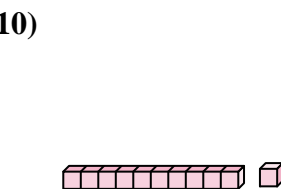
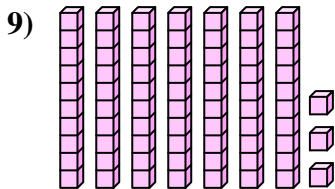
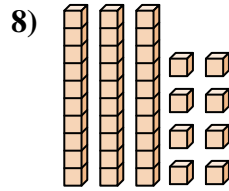
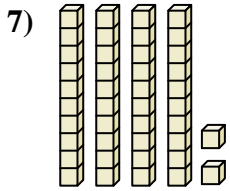
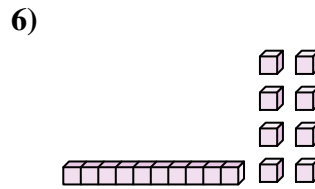
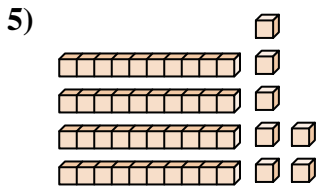
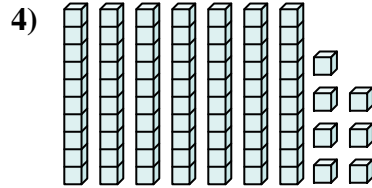
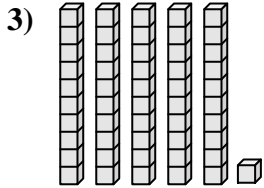
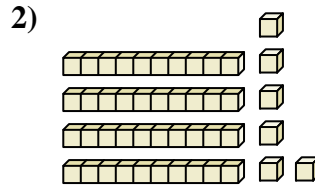
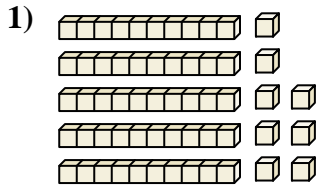
10. _____

11. _____

12. _____



Count the total number of small blocks.



Answers

1. **58**

2. **46**

3. **51**

4. **77**

5. **47**

6. **18**

7. **42**

8. **38**

9. **73**

10. **11**

11. **32**

12. **85**



Count the total number of small blocks.

38	11	58	73	46
51	47	77	42	18

Answers

1. _____
2. _____
3. _____
4. _____
5. _____
6. _____
7. _____
8. _____
9. _____
10. _____

