



Determine how many groups of 100 can be created from the blocks shown.

Ex)

Answers

Ex. 2

1)

1. _____

2)

2. _____

3)

3. _____

4)

4. _____

5)

5. _____

6)

6. _____

7)

7. _____

8)

8. _____

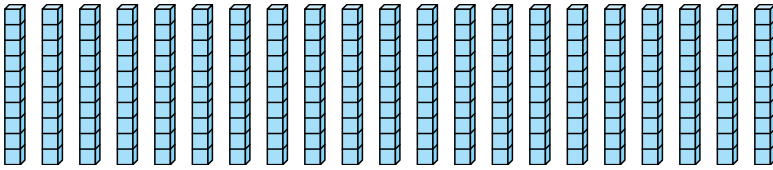
9)

9. _____



Determine how many groups of 100 can be created from the blocks shown.

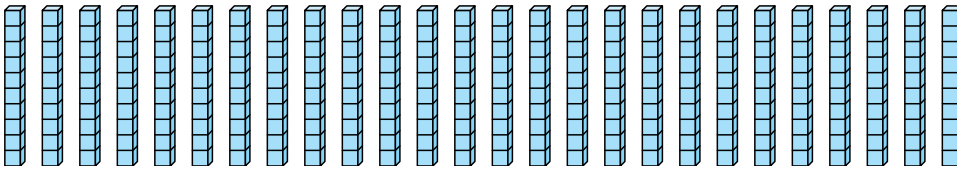
Ex)



Answers

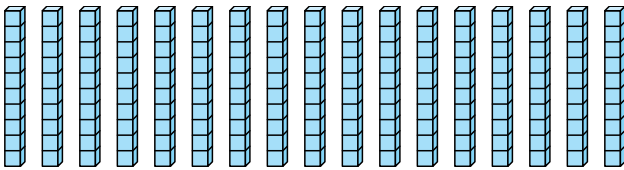
Ex. 2

1)



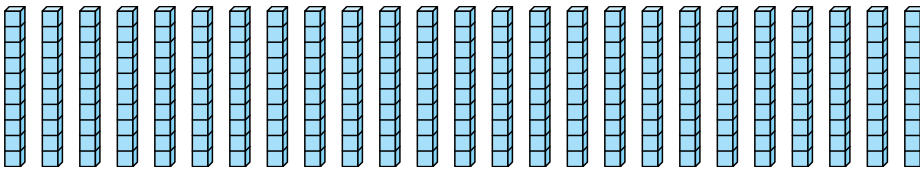
1. 2

2)



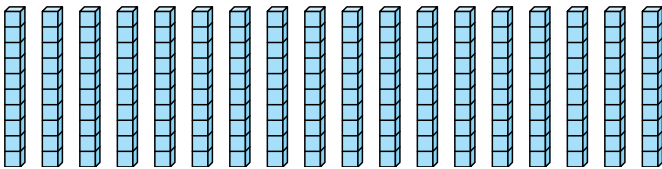
2. 1

3)



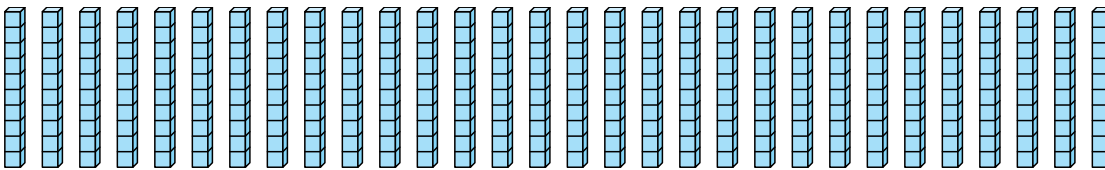
3. 2

4)



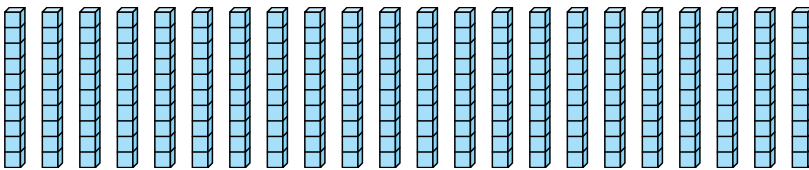
4. 1

5)



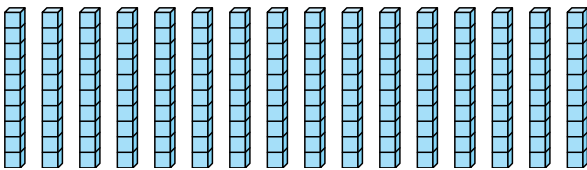
5. 3

6)



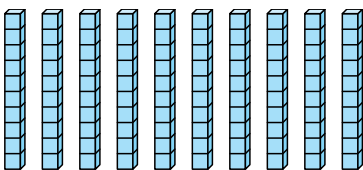
6. 2

7)



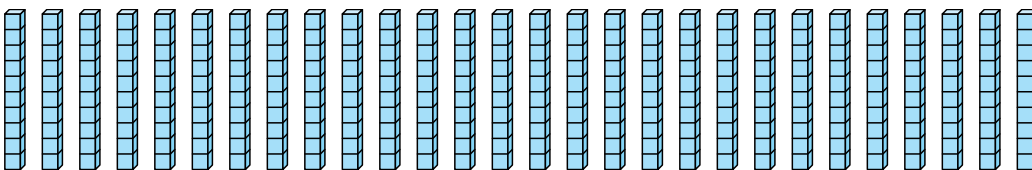
7. 1

8)



8. 1

9)



9. 2