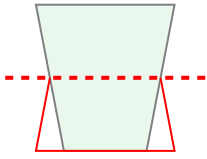


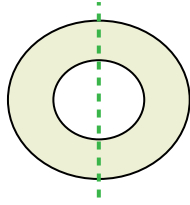


Determine if the line through each figure is a line of symmetry.

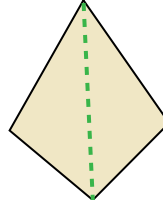
Ex)



1)



2)



Answers

Ex. no

1. yes

2. yes

3. no

4. no

5. no

6. no

7. no

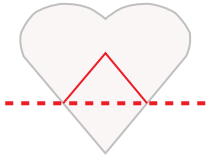
8. no

9. yes


10. no

11. yes

3)



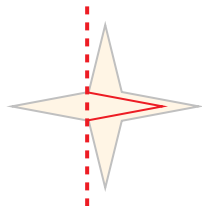
4)



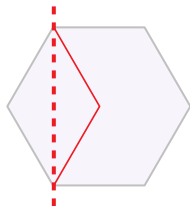
5)



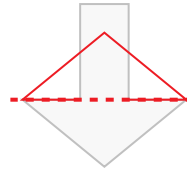
6)



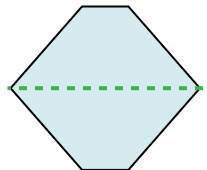
7)



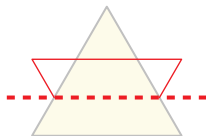
8)



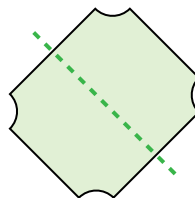
9)



10)



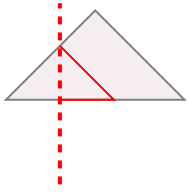
11)



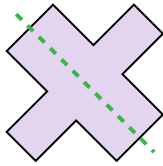


Determine if the line through each figure is a line of symmetry.

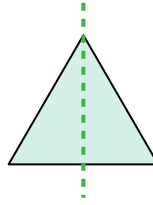
Ex)



1)



2)



Answers

Ex. no

1. yes

2. yes

3. yes

4. no

5. no

6. yes

7. yes

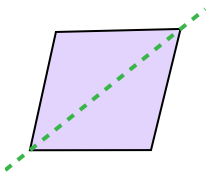
8. yes

9. no

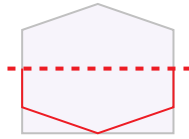
10. yes

11. yes

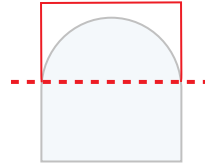
3)



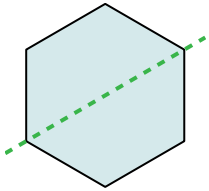
4)



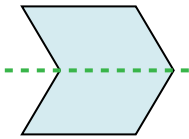
5)



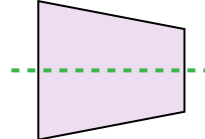
6)



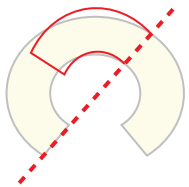
7)



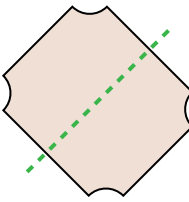
8)



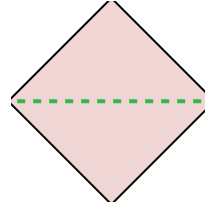
9)



10)



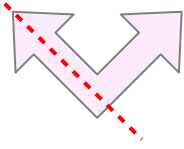
11)



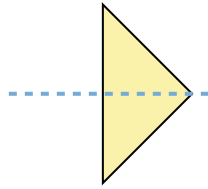


Determine if the line through each figure is a line of symmetry.

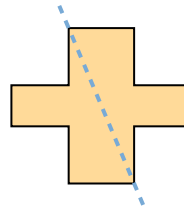
Ex)



1)



2)



Answers

Ex. no

1. _____

2. _____

3. _____

4. _____

5. _____

6. _____

7. _____

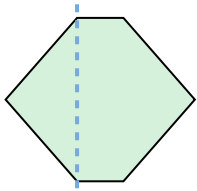
8. _____

9. _____

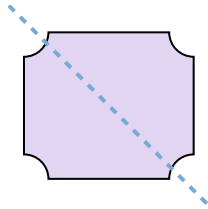
10. _____

11. _____

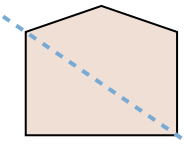
3)



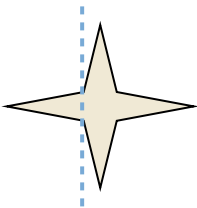
4)



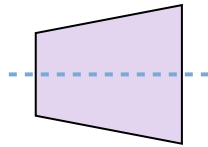
5)



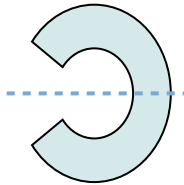
6)



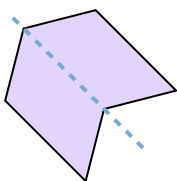
7)



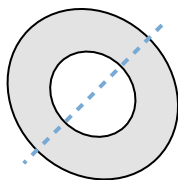
8)



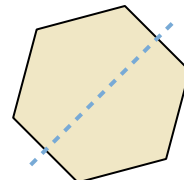
9)



10)



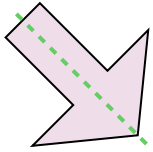
11)



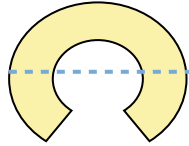


Determine if the line through each figure is a line of symmetry.

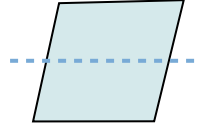
Ex)



1)



2)



Answers

Ex. yes

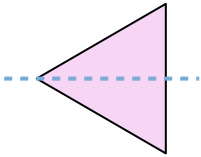
1. _____

2. _____

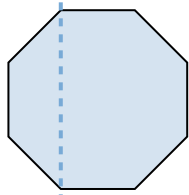
3. _____

4. _____

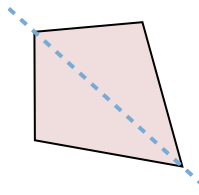
3)



4)



5)



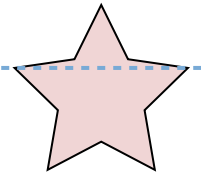
5. _____

6. _____

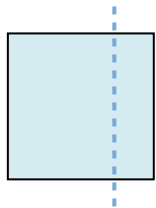
7. _____

8. _____

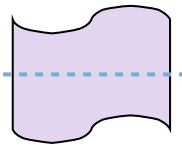
6)



7)



8)

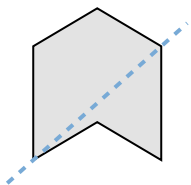


9. _____

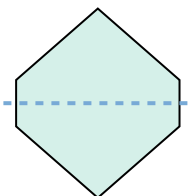
10. _____

11. _____

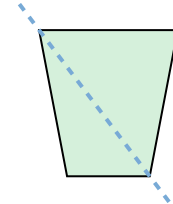
9)



10)



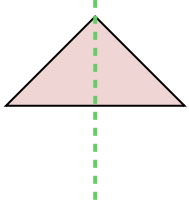
11)



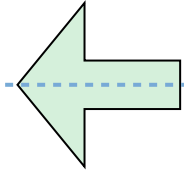


Determine if the line through each figure is a line of symmetry.

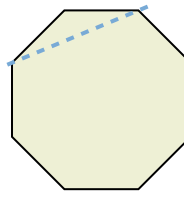
Ex)



1)



2)



Answers

Ex. yes

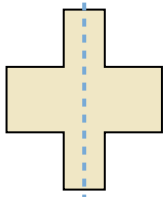
1. _____

2. _____

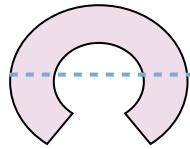
3. _____

4. _____

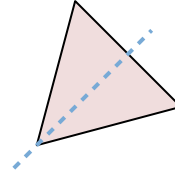
3)



4)



5)



5. _____

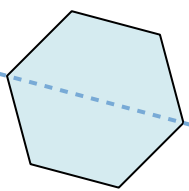
6. _____

7. _____

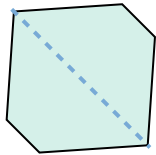
8. _____

9. _____

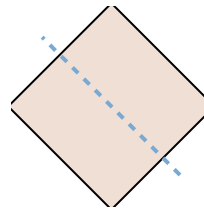
6)



7)



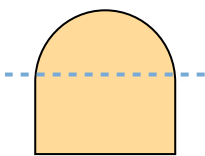
8)



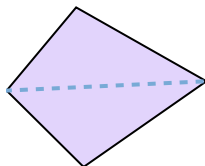
10. _____

11. _____

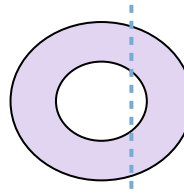
9)



10)



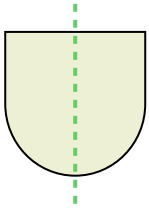
11)



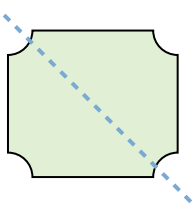


Determine if the line through each figure is a line of symmetry.

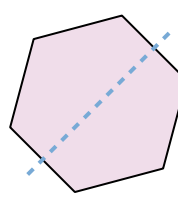
Ex)



1)



2)



Answers

Ex. yes

1. _____

2. _____

3. _____

4. _____

5. _____

6. _____

7. _____

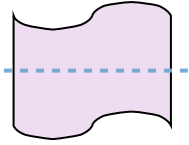
8. _____

9. _____

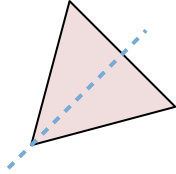
10. _____

11. _____

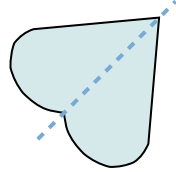
3)



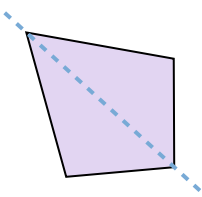
4)



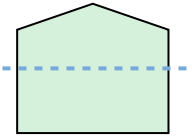
5)



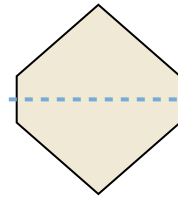
6)



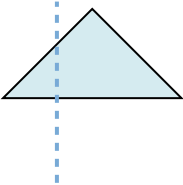
7)



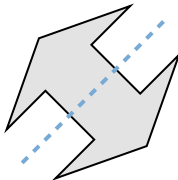
8)



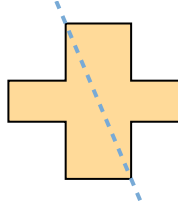
9)



10)



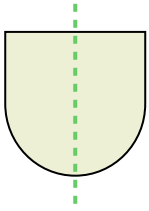
11)



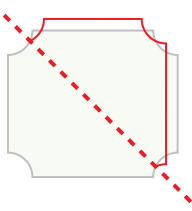


Determine if the line through each figure is a line of symmetry.

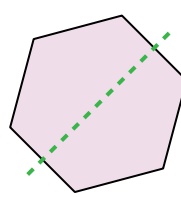
Ex)



1)



2)



Answers

Ex. yes

1. no

2. yes

3. no

4. yes

5. yes

6. yes

7. no

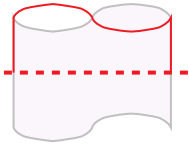
8. yes

9. no

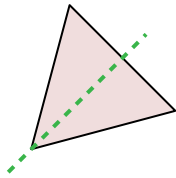
10. yes

11. no

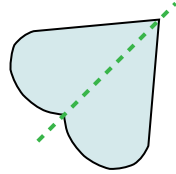
3)



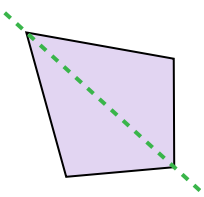
4)



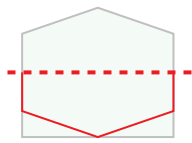
5)



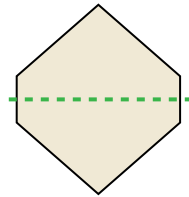
6)



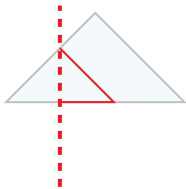
7)



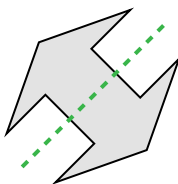
8)



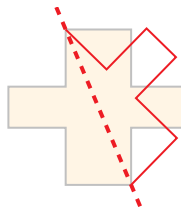
9)



10)



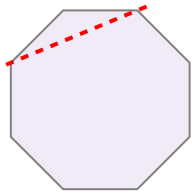
11)



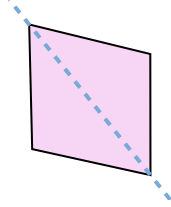


Determine if the line through each figure is a line of symmetry.

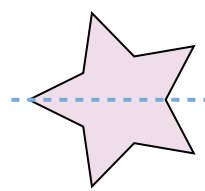
Ex)



1)



2)



Answers

Ex. no

1. _____

2. _____

3. _____

4. _____

5. _____

6. _____

7. _____

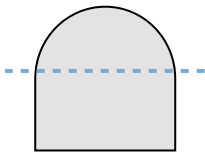
8. _____

9. _____

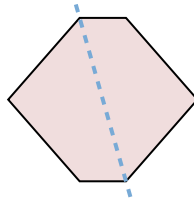
10. _____

11. _____

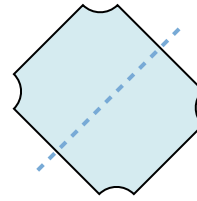
3)



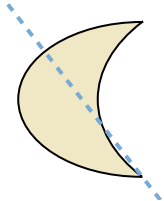
4)



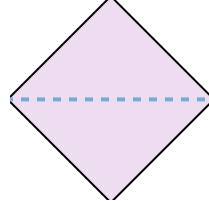
5)



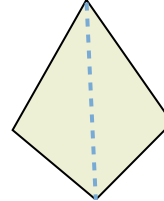
6)



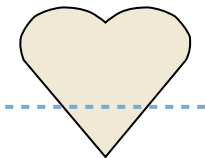
7)



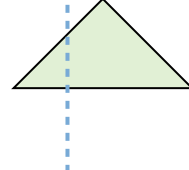
8)



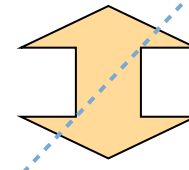
9)



10)



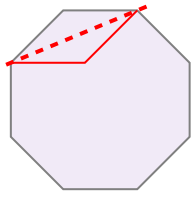
11)



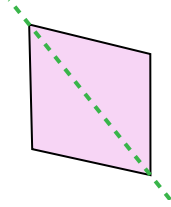


Determine if the line through each figure is a line of symmetry.

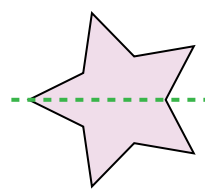
Ex)



1)



2)



Answers

Ex. no

1. yes

2. yes

3. no

4. no

5. yes

6. no

7. yes

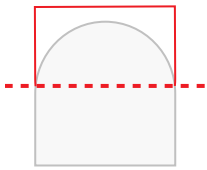
8. yes

9. no

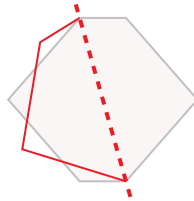
10. no

11. no

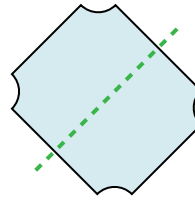
3)



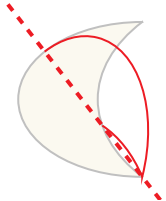
4)



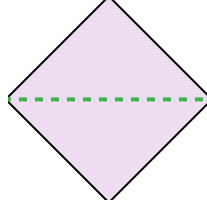
5)



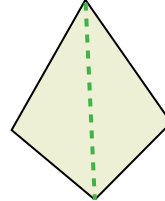
6)



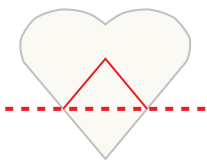
7)



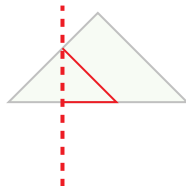
8)



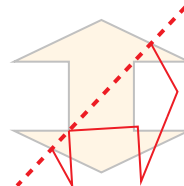
9)



10)



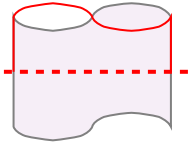
11)



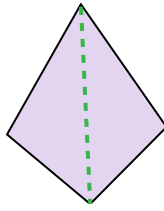


Determine if the line through each figure is a line of symmetry.

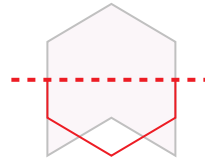
Ex)



1)



2)



Answers

Ex. no

1. yes

2. no

3. yes

4. no

5. no

6. yes

7. yes

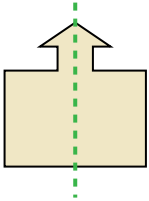
8. no

9. yes

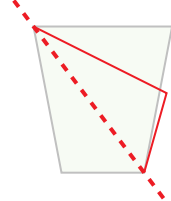
10. yes

11. no

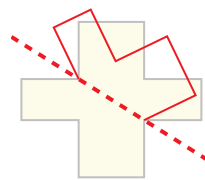
3)



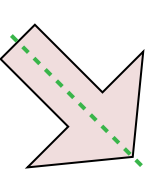
4)




5)



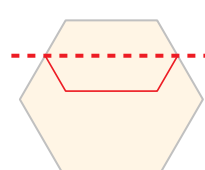
6)



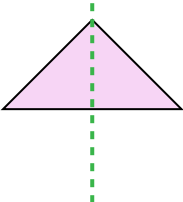
7)



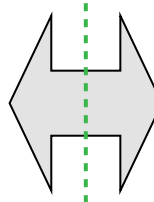
8)



9)



10)



11)

