




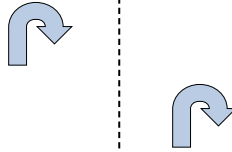
Determine if the shape is translating (slide), rotating (turn) or reflecting (flip).

Answers


1)



2)



3)



1. _____

2. _____

3. _____

4. _____

5. _____

6. _____

7. _____

8. _____

9. _____

10. _____

11. _____

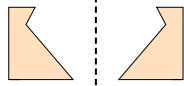
12. _____

13. _____

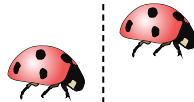
14. _____

15. _____

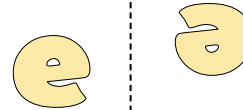
4)



5)



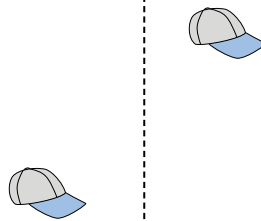
6)



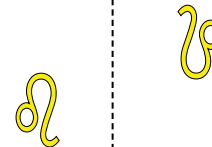
7)



8)



9)



10)



11)



12)



13)



14)




15)



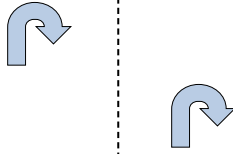


Determine if the shape is translating (slide), rotating (turn) or reflecting (flip).


1)



2)



3)



1. reflecting

2. translating

3. rotating

4. reflecting

5. translating

6. rotating

7. reflecting

8. translating

9. rotating

10. reflecting

11. translating

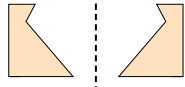
12. rotating

13. reflecting


14. translating

15. rotating

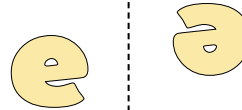
4)



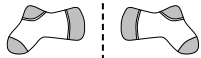
5)



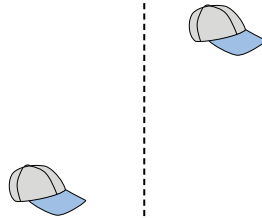
6)



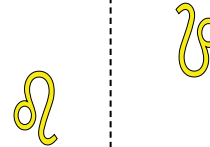
7)



8)



9)



10)



11)



12)



13)



14)



15)

