




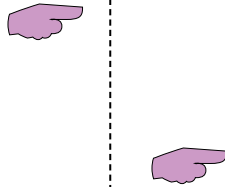
Determine if the shape is translating (slide), rotating (turn) or reflecting (flip).

Answers


1)



2)



3)



1. \_\_\_\_\_

2. \_\_\_\_\_

3. \_\_\_\_\_

4. \_\_\_\_\_

5. \_\_\_\_\_

6. \_\_\_\_\_

7. \_\_\_\_\_

8. \_\_\_\_\_

9. \_\_\_\_\_

10. \_\_\_\_\_

11. \_\_\_\_\_

12. \_\_\_\_\_

13. \_\_\_\_\_

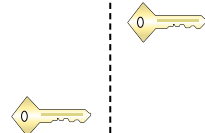
14. \_\_\_\_\_

15. \_\_\_\_\_

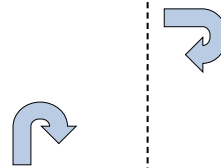
4)



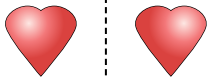
5)



6)




7)



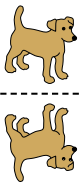
8)



9)




10)




11)




12)




13)



14)

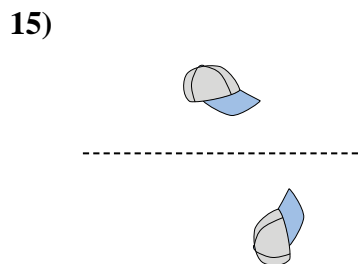
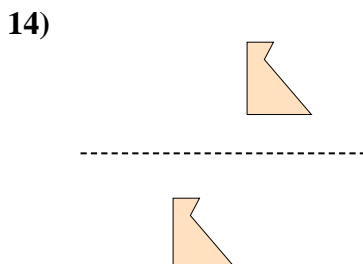
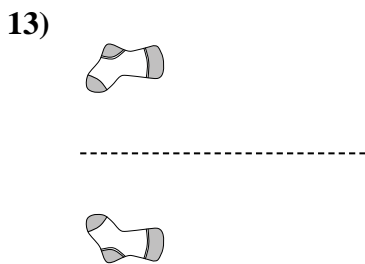

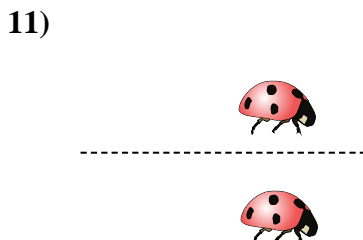
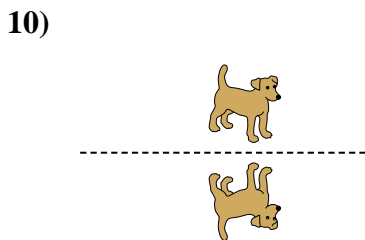
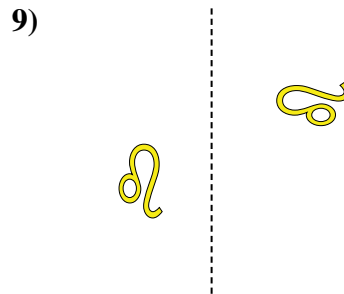
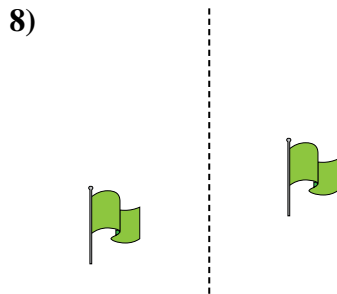
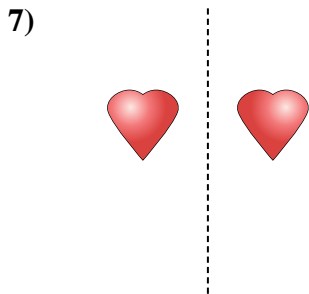
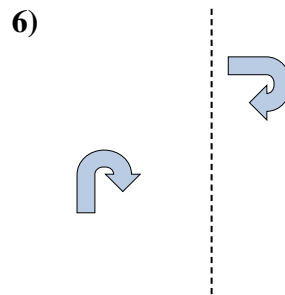
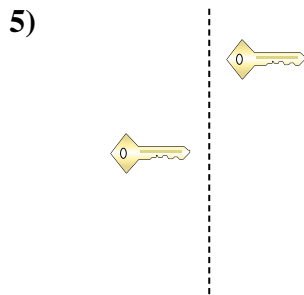
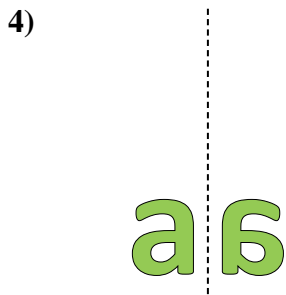
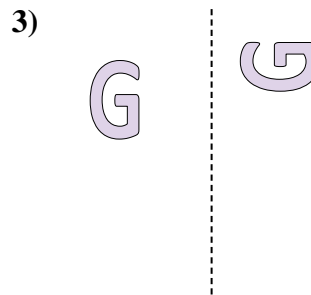
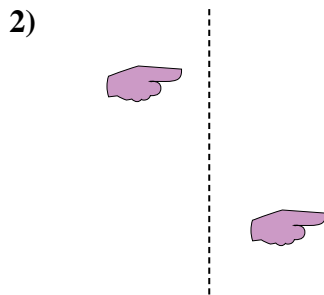
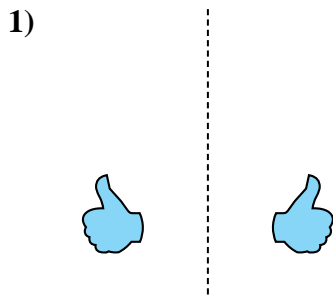


15)





Determine if the shape is translating (slide), rotating (turn) or reflecting (flip).



Answers

1. reflecting
2. translating
3. rotating
4. reflecting
5. translating
6. rotating
7. reflecting
8. translating
9. rotating
10. reflecting
11. translating
12. rotating
13. reflecting
14. translating
15. rotating