



Determine if the shape is translating (slide), rotating (turn) or reflecting (flip).

Answers

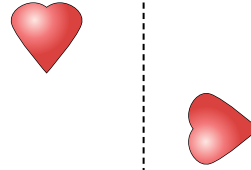
1)



2)



3)



1. \_\_\_\_\_

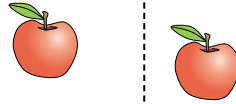
2. \_\_\_\_\_

3. \_\_\_\_\_

4)



5)



6)

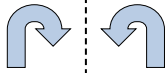


4. \_\_\_\_\_

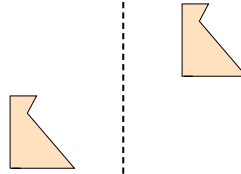
5. \_\_\_\_\_

6. \_\_\_\_\_

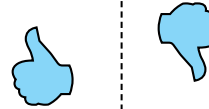
7)



8)



9)



7. \_\_\_\_\_

8. \_\_\_\_\_

9. \_\_\_\_\_

10. \_\_\_\_\_

11. \_\_\_\_\_

10)



11)



12)



12. \_\_\_\_\_

13. \_\_\_\_\_

14. \_\_\_\_\_

15. \_\_\_\_\_



13)



14)



15)





Determine if the shape is translating (slide), rotating (turn) or reflecting (flip).

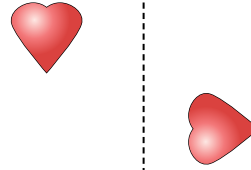
1)



2)



3)



Answers

1. reflecting

2. translating

3. rotating

4. reflecting

5. translating

6. rotating

7. reflecting

8. translating

9. rotating

10. reflecting

11. translating

12. rotating

13. reflecting

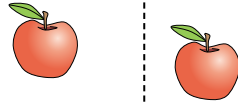
14. translating

15. rotating

4)



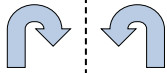
5)



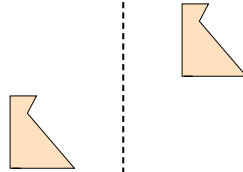
6)



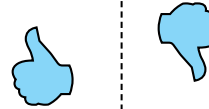
7)



8)



9)



10)



11)



12)



13)



14)



15)

