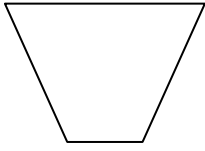




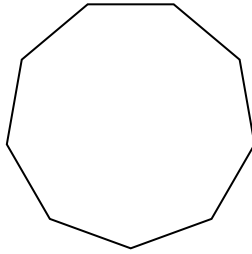
Determine if the shape shown is a regular shape or an irregular shape.

Answers


1)



2)



3)

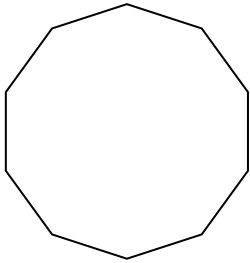


1. \_\_\_\_\_


2. \_\_\_\_\_

3. \_\_\_\_\_

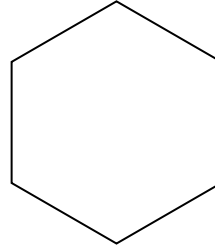
4)



5)



6)

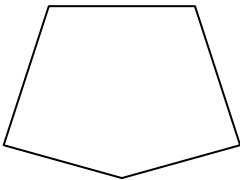


4. \_\_\_\_\_

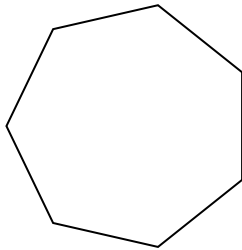
5. \_\_\_\_\_

6. \_\_\_\_\_

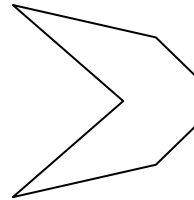
7)



8)



9)



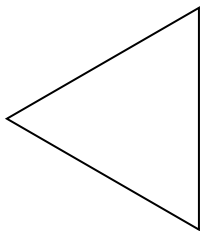
7. \_\_\_\_\_

8. \_\_\_\_\_

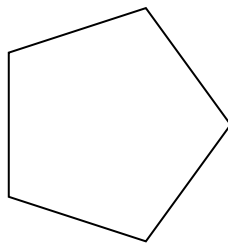
9. \_\_\_\_\_

10. \_\_\_\_\_


10)



11)



12)



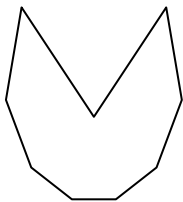
11. \_\_\_\_\_

12. \_\_\_\_\_

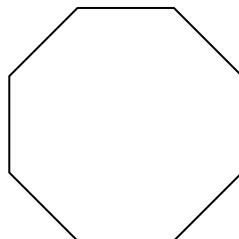
13. \_\_\_\_\_

14. \_\_\_\_\_


13)



14)



15)

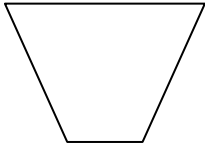


15. \_\_\_\_\_

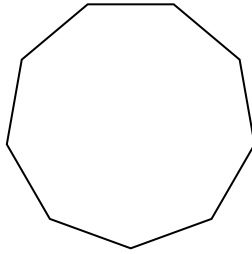


Determine if the shape shown is a regular shape or an irregular shape.


1)



2)



3)



Answers

1. irregular

2. regular

3. regular

4. regular

5. irregular

6. regular

7. irregular

8. regular

9. irregular

10. regular

11. regular

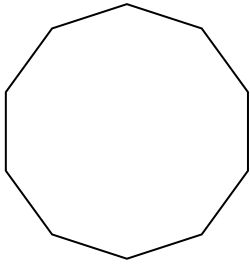
12. irregular

13. irregular


14. regular

15. irregular

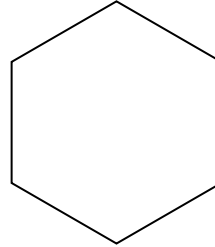
4)



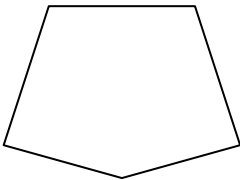
5)



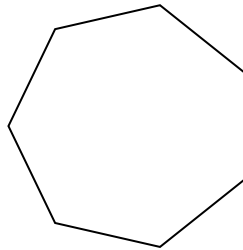
6)



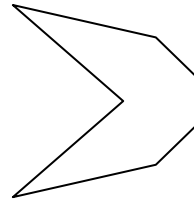
7)



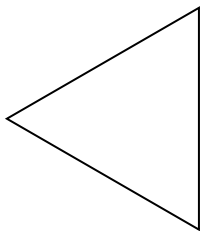
8)



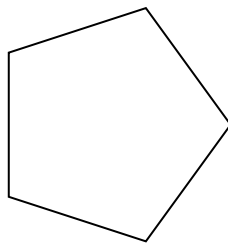
9)




10)




11)



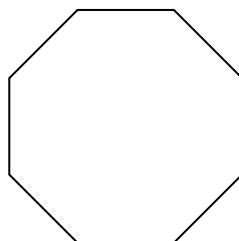
12)



13)



14)



15)

