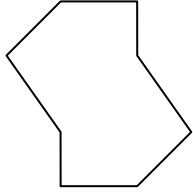




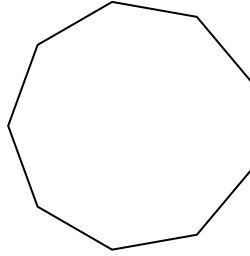
Determine if the shape shown is a regular shape or an irregular shape.

Answers

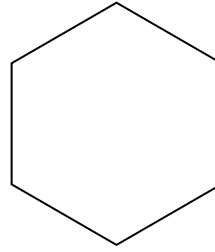
1)



2)



3)




1. \_\_\_\_\_

2. \_\_\_\_\_

3. \_\_\_\_\_

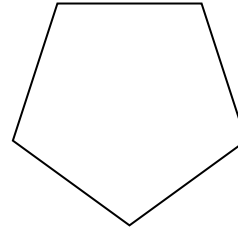
4)



5)



6)

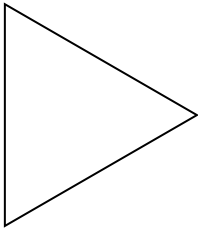


4. \_\_\_\_\_

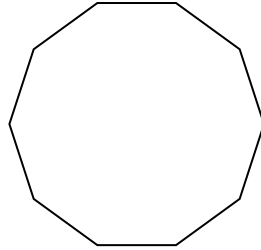
5. \_\_\_\_\_

6. \_\_\_\_\_


7)



8)



9)



7. \_\_\_\_\_

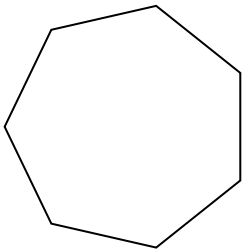
8. \_\_\_\_\_

9. \_\_\_\_\_

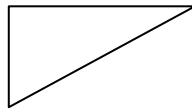
10. \_\_\_\_\_

11. \_\_\_\_\_


10)



11)



12)



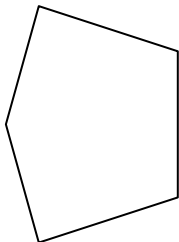
12. \_\_\_\_\_

13. \_\_\_\_\_

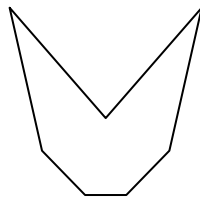
14. \_\_\_\_\_

15. \_\_\_\_\_

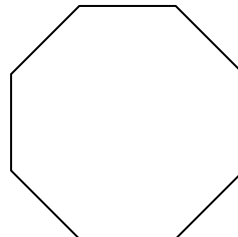
13)



14)



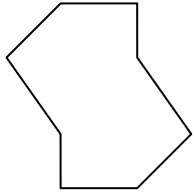
15)



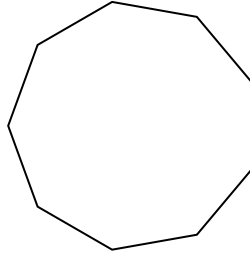


Determine if the shape shown is a regular shape or an irregular shape.

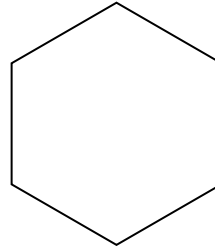
1)



2)



3)



Answers

1. irregular

2. regular

3. regular

4. irregular

5. irregular

6. regular

7. regular

8. regular

9. irregular

10. regular

11. irregular


12. regular

13. irregular

14. irregular

15. regular

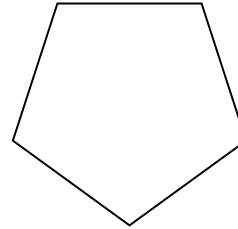
4)



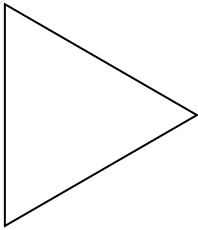
5)



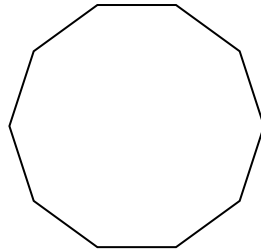
6)




7)



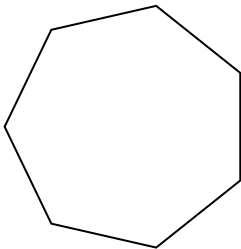
8)



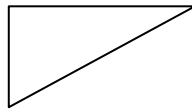
9)




10)



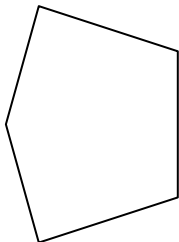
11)




12)



13)



14)



15)

