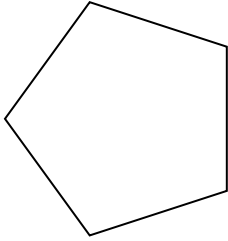




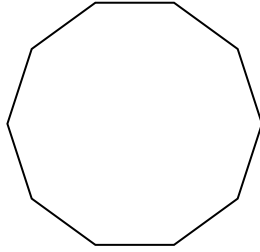
Determine if the shape shown is a regular shape or an irregular shape.

Answers

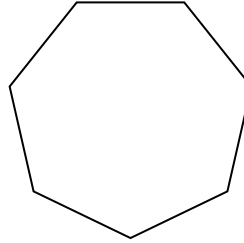
1)



2)



3)




1. \_\_\_\_\_

2. \_\_\_\_\_

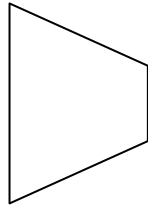
3. \_\_\_\_\_

4. \_\_\_\_\_


4)



5)



6)

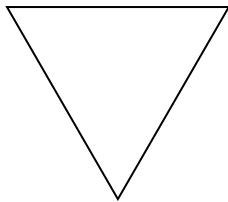


5. \_\_\_\_\_


6. \_\_\_\_\_

7. \_\_\_\_\_

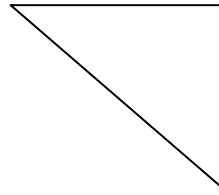
7)



8)



9)



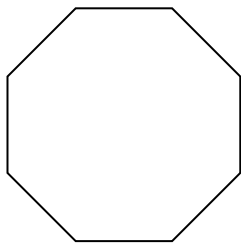
8. \_\_\_\_\_

9. \_\_\_\_\_


10. \_\_\_\_\_

11. \_\_\_\_\_


10)



11)



12)




12. \_\_\_\_\_

13. \_\_\_\_\_

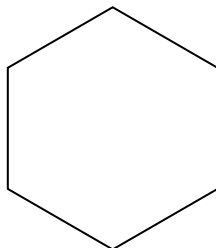
14. \_\_\_\_\_

15. \_\_\_\_\_

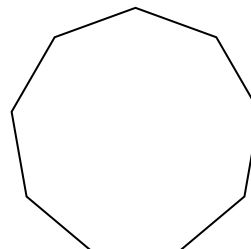
13)



14)



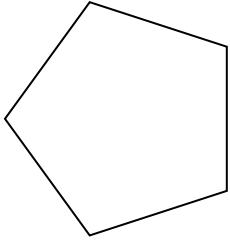
15)



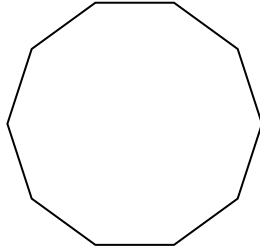


Determine if the shape shown is a regular shape or an irregular shape.

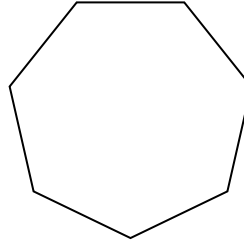
1)



2)



3)



Answers


1. regular

2. regular

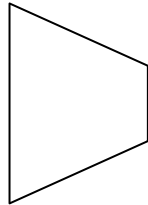
3. regular

4. irregular


4)



5)



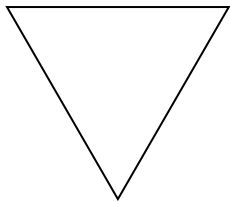
6)




5. irregular

6. irregular

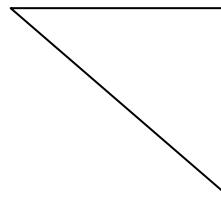
7)



8)



9)

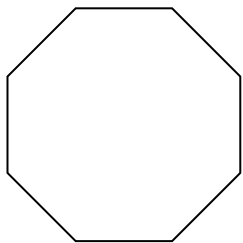


7. regular


8. irregular

9. irregular


10)



11)



12)



10. regular

11. irregular


12. irregular

13. regular

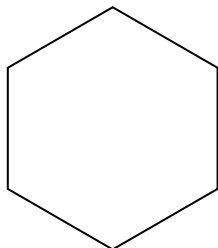
14. regular

15. regular

13)



14)



15)

