



Determine if each triangle is acute(A), obtuse(O) or right(R) and if it is an equilateral(E), isosceles(I) or scalene(S).

Answers

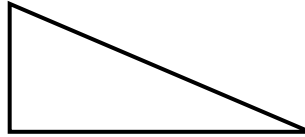
<p>Acute Triangle: All angles are less than 90°.</p> <p>Obtuse Triangle: One angle is greater than 90°.</p> <p>Right Triangle: One angle is 90°.</p>	<p>Equilateral Triangle: 3 equal sides. 3 equal angles.</p> <p>Isosceles Triangle: 2 equal sides. 2 equal angles.</p> <p>Scalene Triangle: No equal sides. No equal angles.</p>
---------------------------------------------------------------------------------------------------------------------------------------------------------------------------------------------------------------------------------------------	------------------------------------------------------------------------------------------------------------------------------------------------------------------------------------------------------------------

1. _____
2. _____
3. _____
4. _____
5. _____
6. _____
7. _____
8. _____

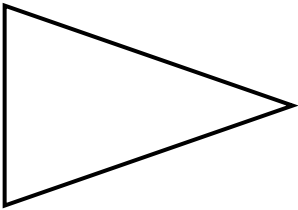
1)



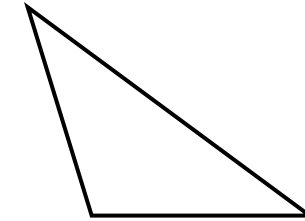
2)



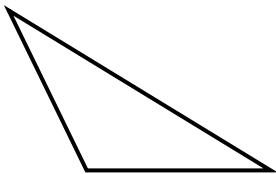
3)



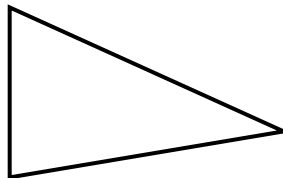
4)



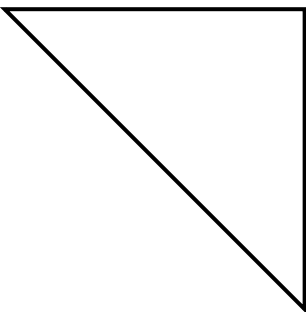
5)



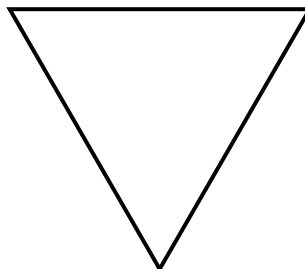
6)



7)



8)





Determine if each triangle is acute(A), obtuse(O) or right(R) and if it is an equilateral(E), isosceles(I) or scalene(S).

<p>Acute Triangle: All angles are less than 90°.</p> <p>Obtuse Triangle: One angle is greater than 90°.</p> <p>Right Triangle: One angle is 90°.</p>	<p>Equilateral Triangle: 3 equal sides. 3 equal angles.</p> <p>Isosceles Triangle: 2 equal sides. 2 equal angles.</p> <p>Scalene Triangle: No equal sides. No equal angles.</p>
---------------------------------------------------------------------------------------------------------------------------------------------------------------------------------------------------------------------------------------------	------------------------------------------------------------------------------------------------------------------------------------------------------------------------------------------------------------------

Answers

- | | |
|-----------------------------------------------------------------------------------------|-------------------------------------------------------------------------------------------------------------------------------------------------------------------------------------------------------------------------------------------------------------------------------------------------|
| <p>1) </p> <p>2) </p> <p>3) </p> <p>4) </p> <p>5) </p> <p>6) </p> <p>7) </p> <p>8) </p> | <p>1. <u> O I </u></p> <p>2. <u> R S </u></p> <p>3. <u> A I </u></p> <p>4. <u> O I </u></p> <p>5. <u> O S </u></p> <p>6. <u> A S </u></p> <p>7. <u> R I </u></p> <p>8. <u> A E </u></p> |
|-----------------------------------------------------------------------------------------|-------------------------------------------------------------------------------------------------------------------------------------------------------------------------------------------------------------------------------------------------------------------------------------------------|