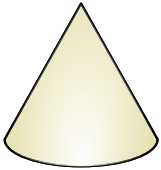




Determine which choice BEST describes the shape shown.

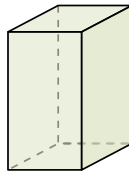
Answers

1)



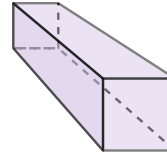
- A. Triangular Prism
- B. Rectangular Pyramid
- C. Cone
- D. Cylinder

2)



- A. Cone
- B. Cylinder
- C. Triangular Prism
- D. Rectangular Prism

3)



- A. Cone
- B. Triangular Prism
- C. Rectangular Prism
- D. Triangular Pyramid

1. _____

2. _____

3. _____

4. _____

5. _____

6. _____

7. _____

8. _____

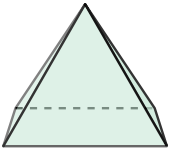
9. _____

10. _____

11. _____


12. _____

4)



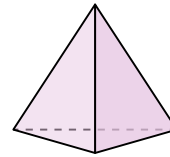
- A. Rectangular Pyramid
- B. Cone
- C. Sphere
- D. Cylinder

5)



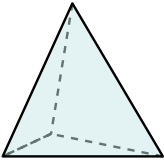
- A. Sphere
- B. Triangular Pyramid
- C. Cone
- D. Cube

6)



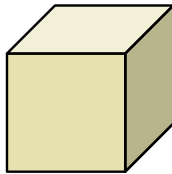
- A. Cone
- B. Triangular Pyramid
- C. Cube
- D. Cylinder

7)



- A. Rectangular Pyramid
- B. Triangular Pyramid
- C. Cone
- D. Cylinder

8)



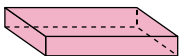
- A. Triangular Pyramid
- B. Sphere
- C. Cube
- D. Triangular Prism

9)



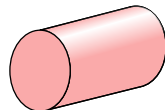
- A. Rectangular Prism
- B. Sphere
- C. Cylinder
- D. Rectangular Pyramid

10)



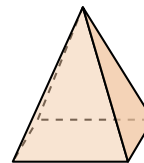
- A. Cylinder
- B. Sphere
- C. Rectangular Pyramid
- D. Rectangular Prism

11)



- A. Rectangular Pyramid
- B. Cylinder
- C. Triangular Pyramid
- D. Triangular Prism

12)

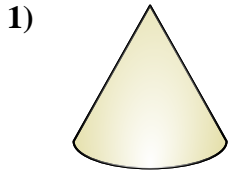


- A. Rectangular Prism
- B. Cylinder
- C. Triangular Pyramid
- D. Rectangular Pyramid

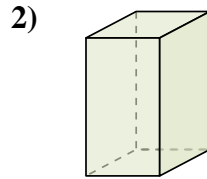


Determine which choice BEST describes the shape shown.

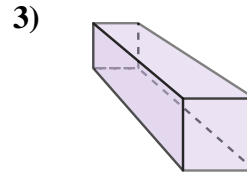
Answers



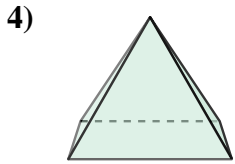
- A. Triangular Prism
- B. Rectangular Pyramid
- C. Cone
- D. Cylinder



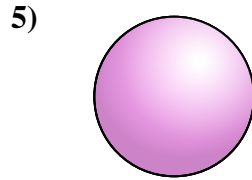
- A. Cone
- B. Cylinder
- C. Triangular Prism
- D. Rectangular Prism



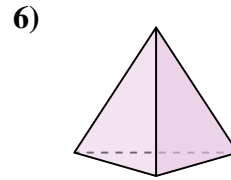
- A. Cone
- B. Triangular Prism
- C. Rectangular Prism
- D. Triangular Pyramid



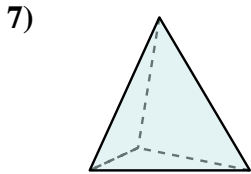
- A. Rectangular Pyramid
- B. Cone
- C. Sphere
- D. Cylinder



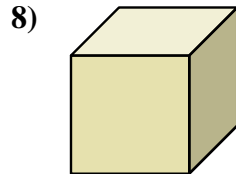
- A. Sphere
- B. Triangular Pyramid
- C. Cone
- D. Cube



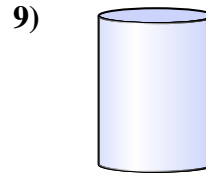
- A. Cone
- B. Triangular Pyramid
- C. Cube
- D. Cylinder



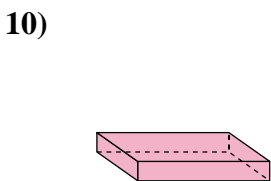
- A. Rectangular Pyramid
- B. Triangular Pyramid
- C. Cone
- D. Cylinder



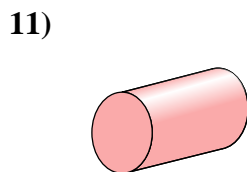
- A. Triangular Pyramid
- B. Sphere
- C. Cube
- D. Triangular Prism



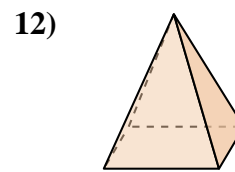
- A. Rectangular Prism
- B. Sphere
- C. Cylinder
- D. Rectangular Pyramid



- A. Cylinder
- B. Sphere
- C. Rectangular Pyramid
- D. Rectangular Prism



- A. Rectangular Pyramid
- B. Cylinder
- C. Triangular Pyramid
- D. Triangular Prism



- A. Rectangular Prism
- B. Cylinder
- C. Triangular Pyramid
- D. Rectangular Pyramid

- 1. **C**
- 2. **D**
- 3. **C**
- 4. **A**
- 5. **A**
- 6. **B**
- 7. **B**
- 8. **C**
- 9. **C**
- 10. **D**
- 11. **B**
- 12. **D**