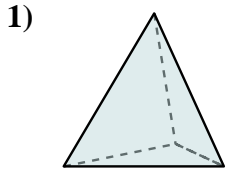


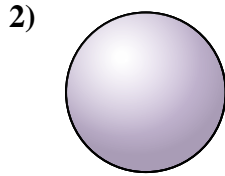


Determine which choice BEST describes the shape shown.

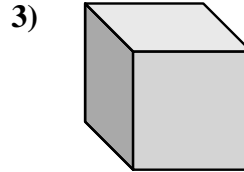
Answers



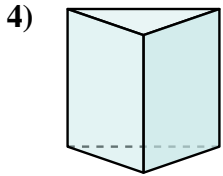
- 1) A. Rectangular Prism
- B. Triangular Pyramid
- C. Sphere
- D. Triangular Prism



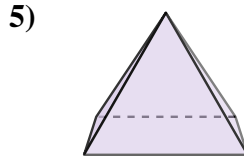
- 2) A. Triangular Pyramid
- B. Triangular Prism
- C. Rectangular Pyramid
- D. Sphere



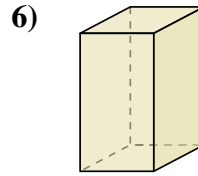
- 3) A. Triangular Pyramid
- B. Triangular Prism
- C. Rectangular Pyramid
- D. Cube



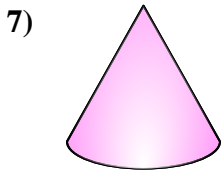
- 4) A. Rectangular Prism
- B. Cube
- C. Triangular Prism
- D. Triangular Pyramid



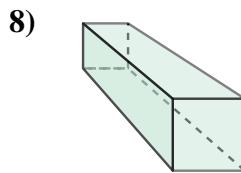
- 5) A. Rectangular Prism
- B. Cube
- C. Cylinder
- D. Rectangular Pyramid



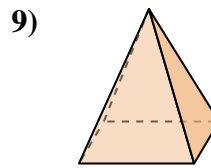
- 6) A. Cylinder
- B. Cone
- C. Triangular Pyramid
- D. Rectangular Prism



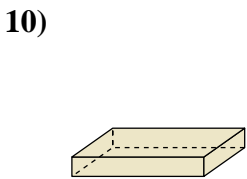
- 7) A. Rectangular Pyramid
- B. Cylinder
- C. Cone
- D. Triangular Prism



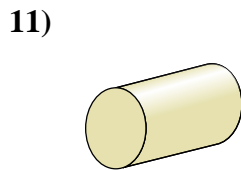
- 8) A. Rectangular Prism
- B. Triangular Pyramid
- C. Cylinder
- D. Cube



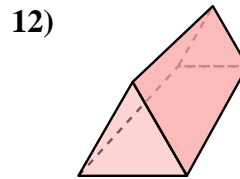
- 9) A. Cube
- B. Rectangular Pyramid
- C. Triangular Prism
- D. Sphere



- 10) A. Rectangular Pyramid
- B. Rectangular Prism
- C. Triangular Pyramid
- D. Cone



- 11) A. Cylinder
- B. Rectangular Prism
- C. Triangular Prism
- D. Triangular Pyramid



- 12) A. Triangular Pyramid
- B. Triangular Prism
- C. Cylinder
- D. Sphere

1. \_\_\_\_\_

2. \_\_\_\_\_

3. \_\_\_\_\_

4. \_\_\_\_\_

5. \_\_\_\_\_

6. \_\_\_\_\_

7. \_\_\_\_\_

8. \_\_\_\_\_

9. \_\_\_\_\_

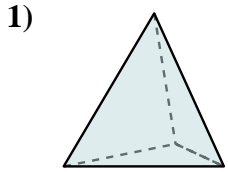
10. \_\_\_\_\_

11. \_\_\_\_\_

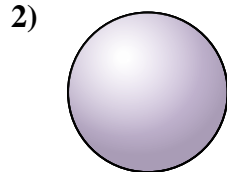
12. \_\_\_\_\_



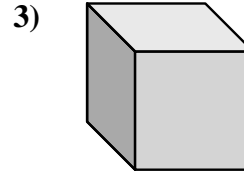
Determine which choice BEST describes the shape shown.



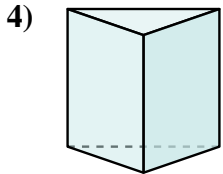
- A. Rectangular Prism
- B. Triangular Pyramid
- C. Sphere
- D. Triangular Prism



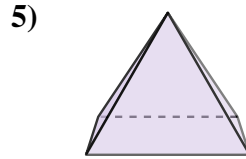
- A. Triangular Pyramid
- B. Triangular Prism
- C. Rectangular Pyramid
- D. Sphere



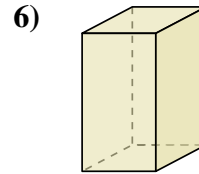
- A. Triangular Pyramid
- B. Triangular Prism
- C. Rectangular Pyramid
- D. Cube



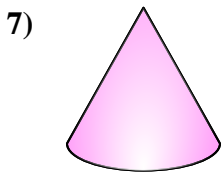
- A. Rectangular Prism
- B. Cube
- C. Triangular Prism
- D. Triangular Pyramid



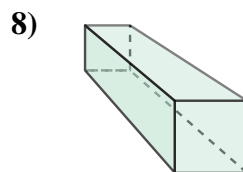
- A. Rectangular Prism
- B. Cube
- C. Cylinder
- D. Rectangular Pyramid



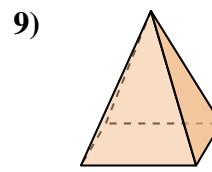
- A. Cylinder
- B. Cone
- C. Triangular Pyramid
- D. Rectangular Prism



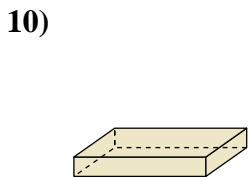
- A. Rectangular Pyramid
- B. Cylinder
- C. Cone
- D. Triangular Prism



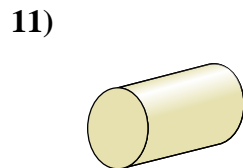
- A. Rectangular Prism
- B. Triangular Pyramid
- C. Cylinder
- D. Cube



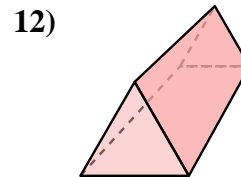
- A. Cube
- B. Rectangular Pyramid
- C. Triangular Prism
- D. Sphere



- A. Rectangular Pyramid
- B. Rectangular Prism
- C. Triangular Pyramid
- D. Cone



- A. Cylinder
- B. Rectangular Prism
- C. Triangular Prism
- D. Triangular Pyramid



- A. Triangular Pyramid
- B. Triangular Prism
- C. Cylinder
- D. Sphere

Answers

1.     **B**    

2.     **D**    

3.     **D**    

4.     **C**    

5.     **D**    

6.     **D**    

7.     **C**    

8.     **A**    

9.     **B**    

10.     **B**    

11.     **A**    

12.     **B**