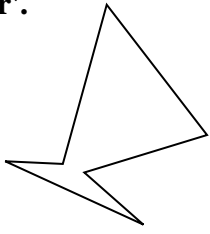


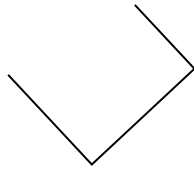


Determine if the figure shown is a 'Triangle', 'Square', 'Rectangle', 'Hexagon' or 'Other'.

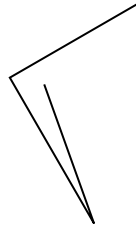
Answers



1)



2)



1. _____

2. _____

3. _____

4. _____

5. _____

6. _____

7. _____

8. _____

9. _____

10. _____

11. _____


12. _____

13. _____

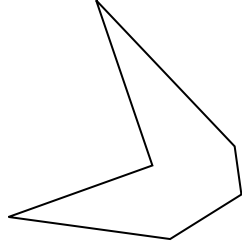
14. _____

15. _____

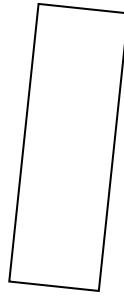
4)



5)



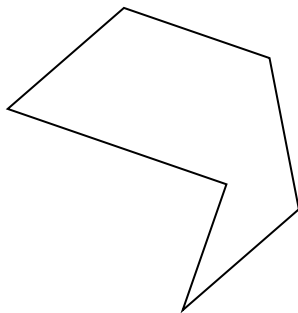
6)



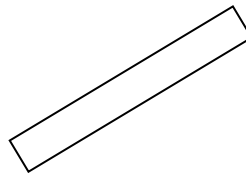
7)



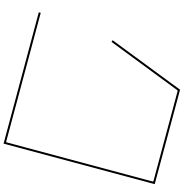
8)



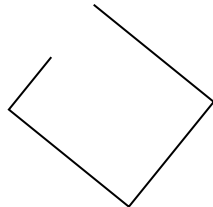
9)



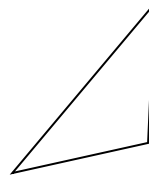
10)



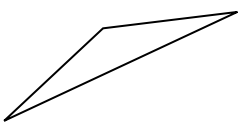
11)



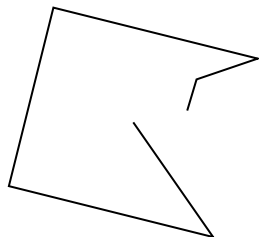
12)



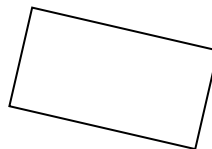
13)



14)

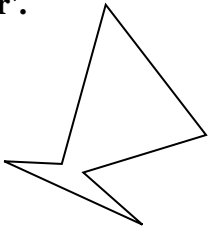


15)

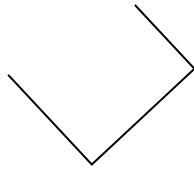




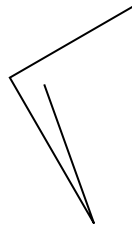
Determine if the figure shown is a 'Triangle', 'Square', 'Rectangle', 'Hexagon' or 'Other'.



2)



3)



Answers

1. Hexagon

2. Other

3. Other

4. Other

5. Hexagon

6. Rectangle

7. Triangle

8. Hexagon

9. Rectangle

10. Other

11. Other


12. Triangle

13. Triangle

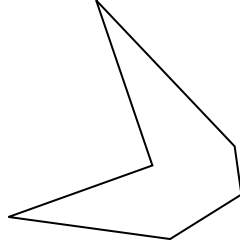
14. Other

15. Rectangle

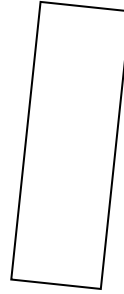
4)



5)



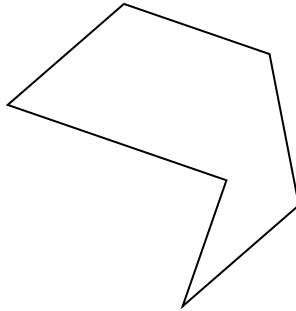
6)



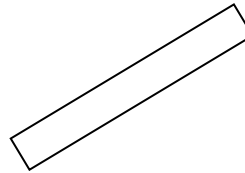
7)



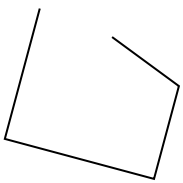
8)



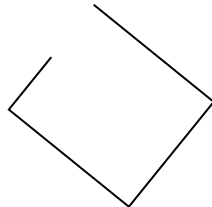
9)



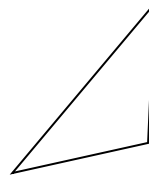
10)



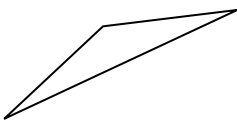
11)



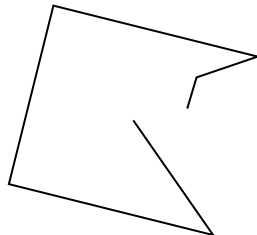
12)



13)



14)



15)

