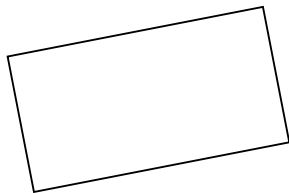




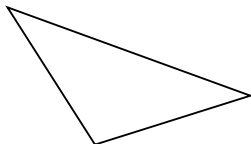
Determine if the figure shown is a 'Triangle', 'Square', 'Rectangle', 'Hexagon' or 'Other'.

Answers

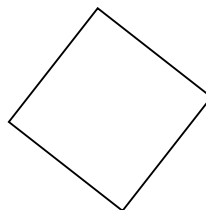
1)



2)



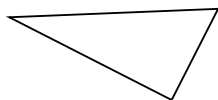
3)



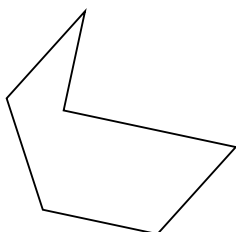
1. _____

2. _____


4)



5)



6)

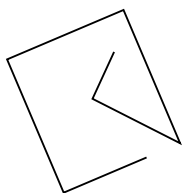


3. _____

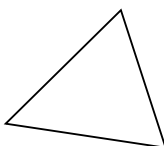
4. _____

5. _____

7)



8)



9)



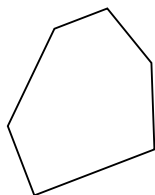
6. _____

7. _____

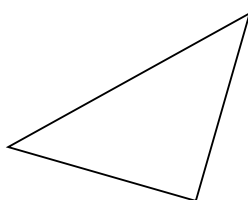
8. _____

9. _____

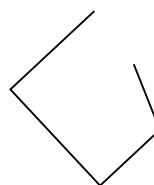
10)



11)



12)



10. _____

11. _____

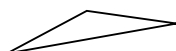
12. _____

13. _____


14. _____

15. _____

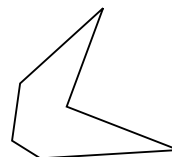
13)



14)



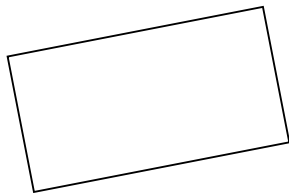
15)



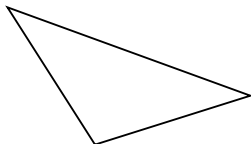


Determine if the figure shown is a 'Triangle', 'Square', 'Rectangle', 'Hexagon' or 'Other'.

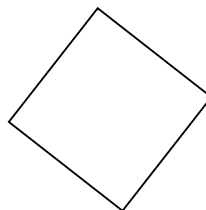
1)



2)



3)



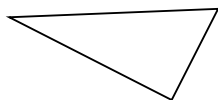
Answers

1. Rectangle

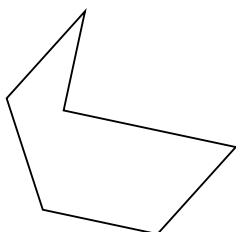
2. Triangle

3. Square


4)



5)



6)

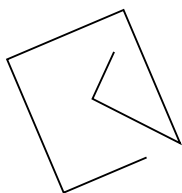


4. Triangle

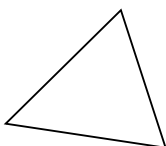
5. Hexagon

6. Hexagon

7)



8)



9)

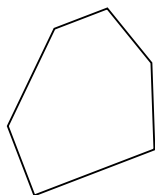


7. Other

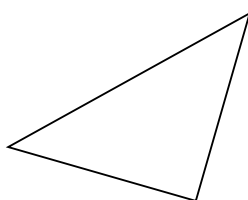
8. Triangle

9. Rectangle

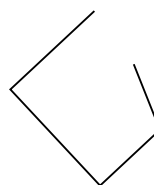
10)



11)



12)



10. Hexagon

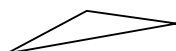
11. Triangle

12. Other


13. Triangle

14. Other

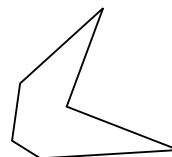
13)



14)



15)



15. Hexagon