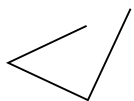




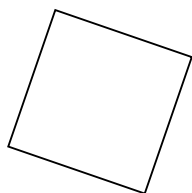
Determine if the figure shown is a 'Triangle', 'Square', 'Rectangle', 'Hexagon' or 'Other'.

Answers

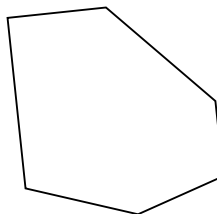
1)



2)



3)

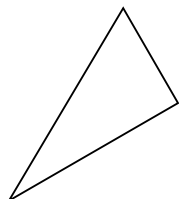


1. _____

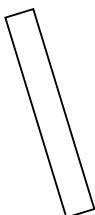
2. _____

3. _____

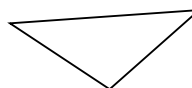
4)



5)



6)

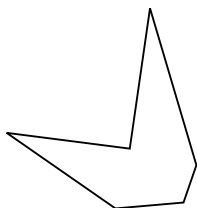


4. _____

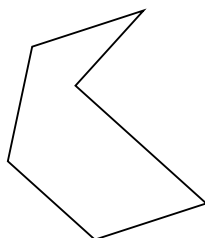
5. _____

6. _____

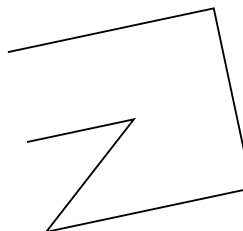
7)



8)



9)



7. _____

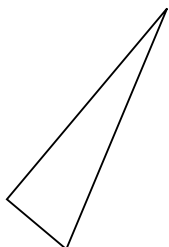
8. _____

9. _____

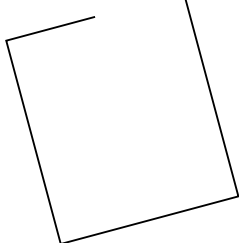
10. _____

11. _____

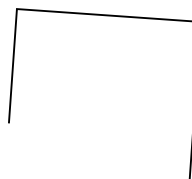
10)



11)



12)




12. _____

13. _____

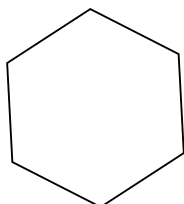
14. _____

15. _____

13)



14)



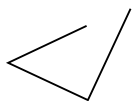
15)



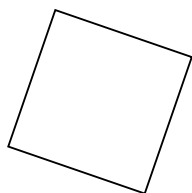


Determine if the figure shown is a 'Triangle', 'Square', 'Rectangle', 'Hexagon' or 'Other'.

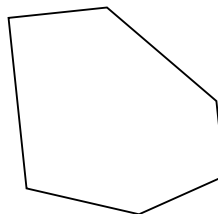
1)



2)



3)



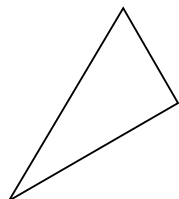
Answers

1. Other

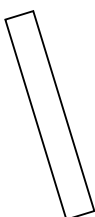
2. Square

3. Hexagon

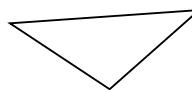
4)



5)



6)

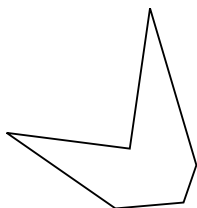


4. Triangle

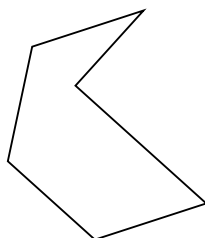
5. Rectangle

6. Triangle

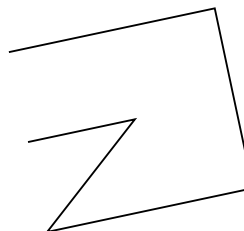
7)



8)



9)

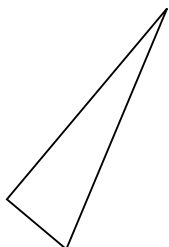


7. Hexagon

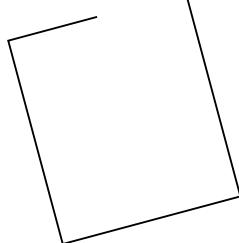
8. Hexagon

9. Other

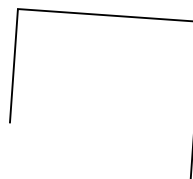
10)



11)



12)



10. Triangle


11. Other

12. Other

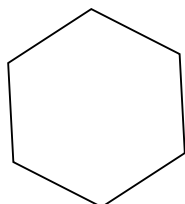
13. Hexagon

14. Hexagon

13)



14)



15)



15. Rectangle