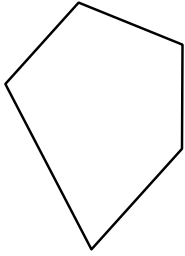




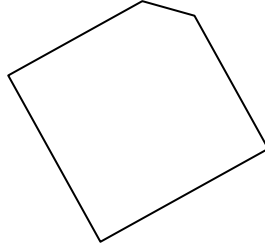
Identify the type of shape shown.

Answers

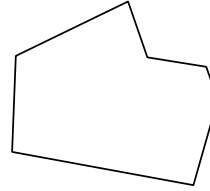
1)



2)



3)



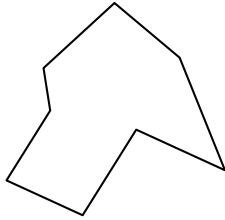
1. _____

2. _____


3. _____

4. _____

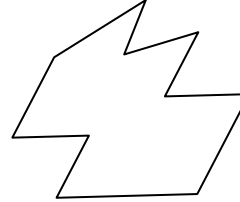
4)



5)



6)



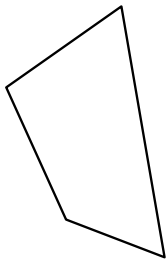
5. _____

6. _____


7. _____

8. _____

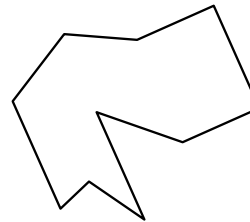
7)



8)



9)



9. _____

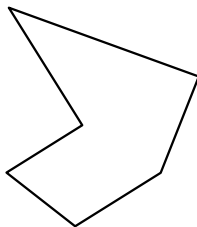
10. _____

11. _____

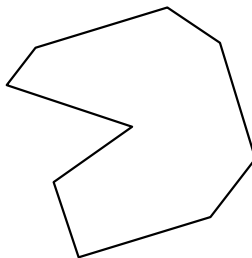
12. _____

13. _____

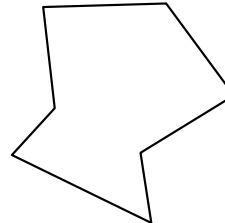
10)



11)



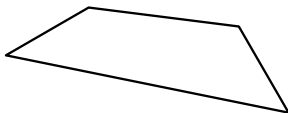
12)



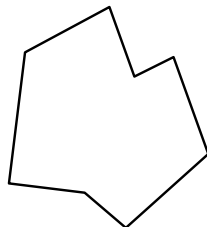
14. _____

15. _____

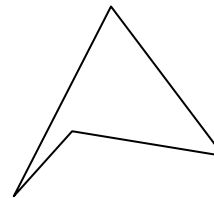
13)



14)



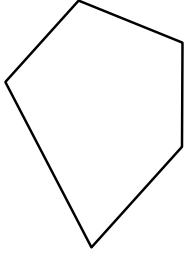
15)



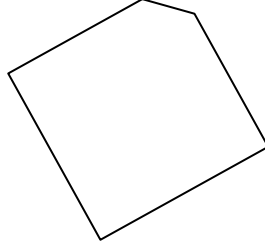


Identify the type of shape shown.

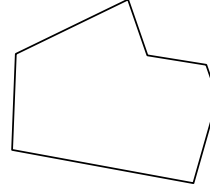
1)



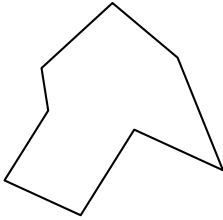
2)




3)



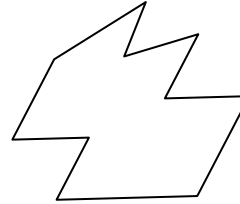
4)



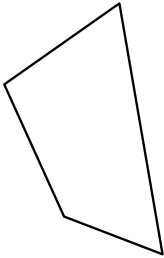
5)



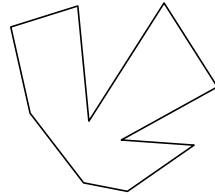
6)



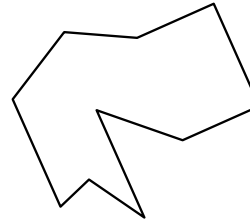
7)



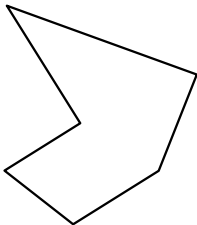
8)



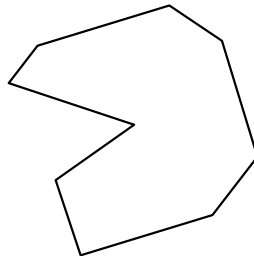
9)



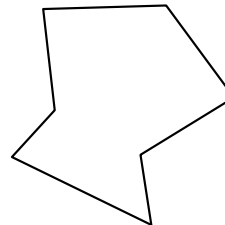
10)



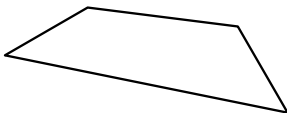
11)



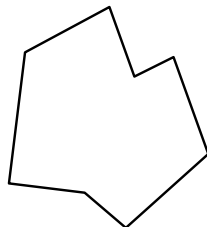
12)



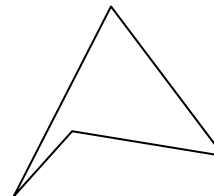
13)



14)



15)



Answers

1. pentagon

2. pentagon

3. heptagon

4. octagon

5. octagon

6. decagon

7. quadrilateral

8. decagon

9. decagon

10. hexagon

11. nonagon

12. heptagon

13. quadrilateral

14. octagon

15. quadrilateral