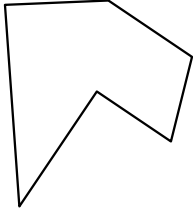




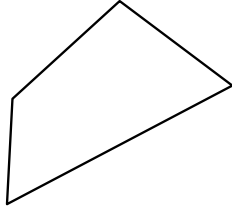
Identify the type of shape shown.

Answers

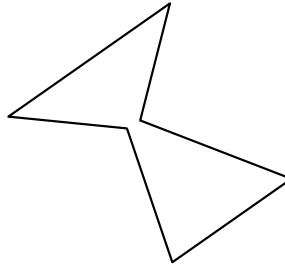
1)



2)



3)



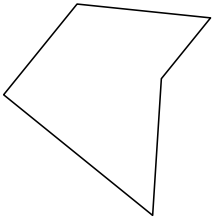
1. _____

2. _____


3. _____

4. _____

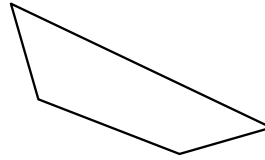
4)



5)



6)



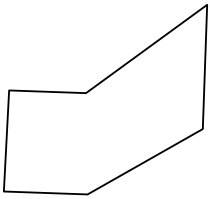
5. _____

6. _____

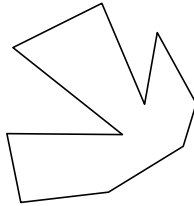
7. _____

8. _____

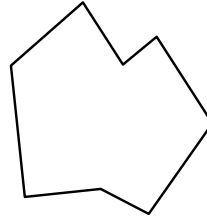
7)



8)



9)



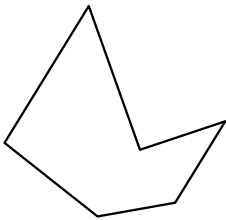
9. _____

10. _____

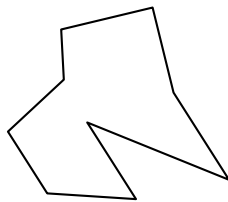
11. _____

12. _____

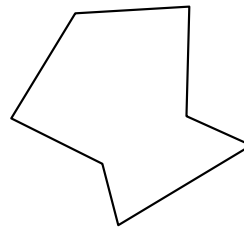
10)



11)



12)

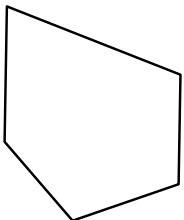


13. _____

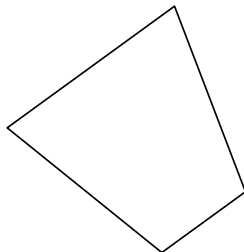
14. _____

15. _____

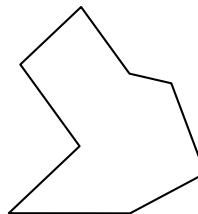
13)



14)



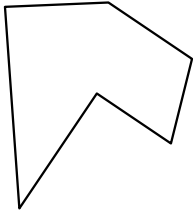
15)



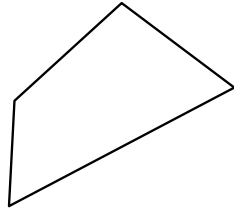


Identify the type of shape shown.

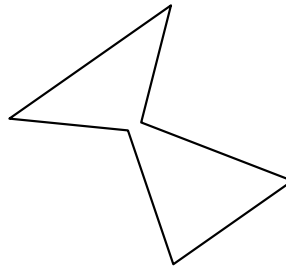
1)



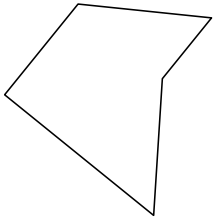
2)



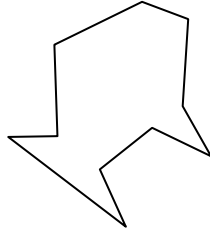
3)



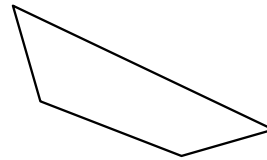
4)



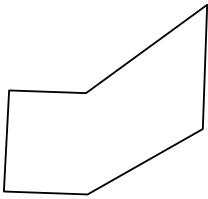
5)



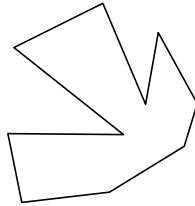
6)



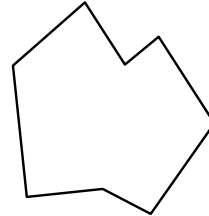
7)



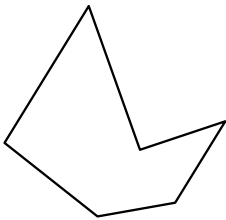
8)



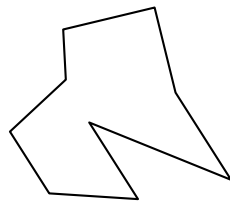
9)



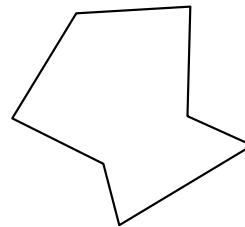
10)



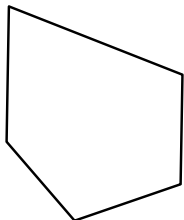
11)



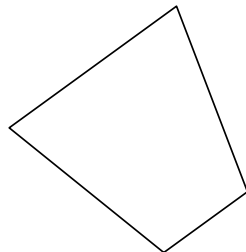
12)



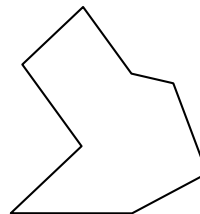
13)



14)



15)



Answers

1. hexagon

2. quadrilateral

3. hexagon

4. pentagon

5. decagon

6. quadrilateral

7. hexagon

8. decagon

9. octagon

10. hexagon

11. nonagon

12. heptagon

13. pentagon

14. quadrilateral

15. octagon