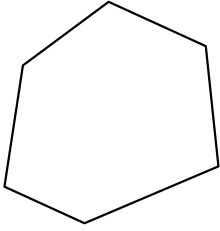




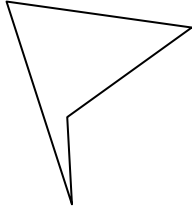
Identify the type of shape shown.

Answers

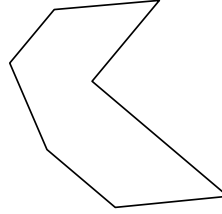
1)



2)



3)



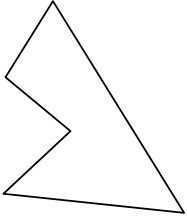
1. \_\_\_\_\_

2. \_\_\_\_\_

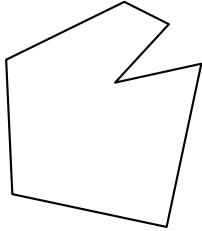
3. \_\_\_\_\_

4. \_\_\_\_\_

4)



5)



6)



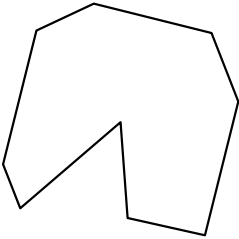
5. \_\_\_\_\_

6. \_\_\_\_\_

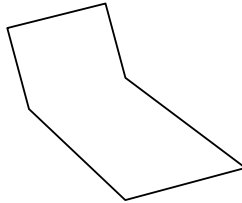
7. \_\_\_\_\_

8. \_\_\_\_\_

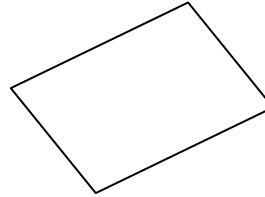
7)



8)



9)



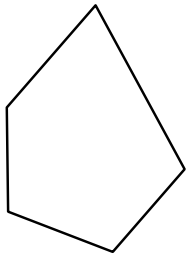
9. \_\_\_\_\_

10. \_\_\_\_\_

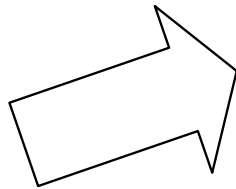
11. \_\_\_\_\_

12. \_\_\_\_\_


10)



11)



12)

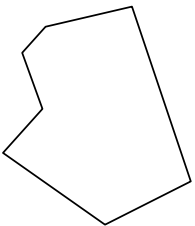


13. \_\_\_\_\_

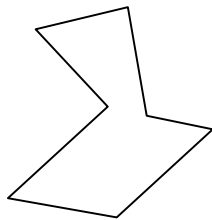
14. \_\_\_\_\_

15. \_\_\_\_\_

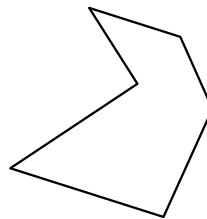
13)



14)



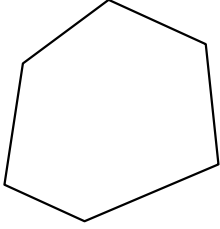
15)



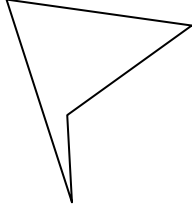


Identify the type of shape shown.

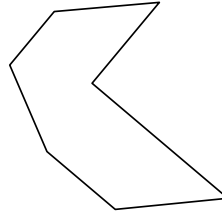
1)



2)



3)



Answers

1. hexagon

2. quadrilateral

3. heptagon

4. pentagon

5. heptagon

6. quadrilateral

7. nonagon

8. hexagon

9. quadrilateral

10. pentagon

11. heptagon

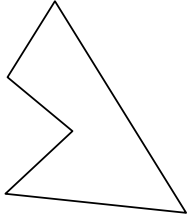
12. decagon

13. heptagon

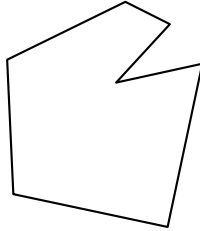
14. heptagon

15. hexagon

4)



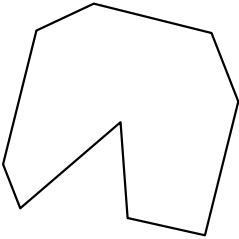
5)



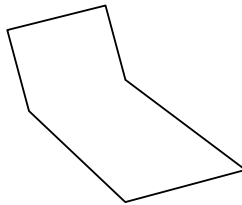
6)



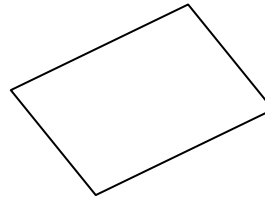
7)



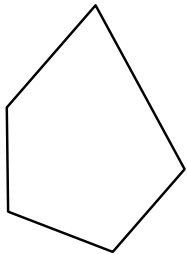
8)



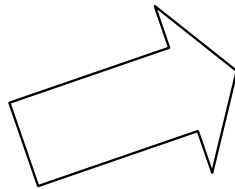
9)




10)



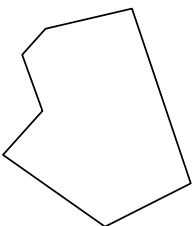
11)



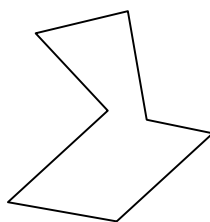
12)



13)



14)



15)

