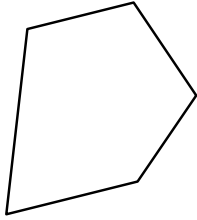


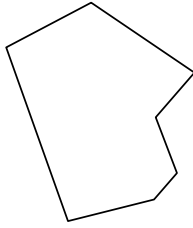


Identify the type of shape shown.


1)



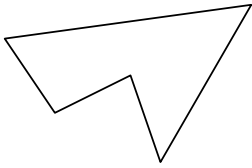
2)



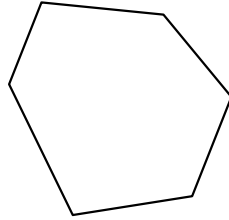
3)



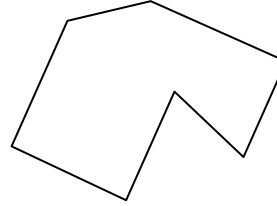
4)



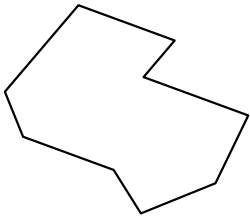
5)




6)



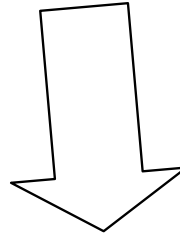
7)




8)



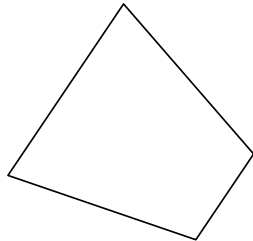
9)



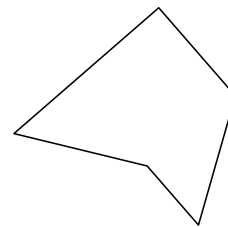
10)



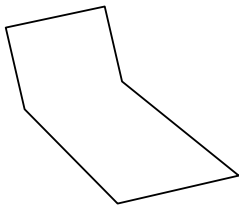
11)



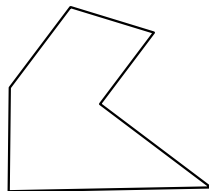
12)




13)



14)



15)



Answers

1. _____

2. _____

3. _____

4. _____

5. _____

6. _____

7. _____

8. _____

9. _____

10. _____

11. _____

12. _____

13. _____

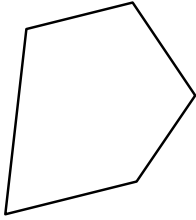
14. _____

15. _____

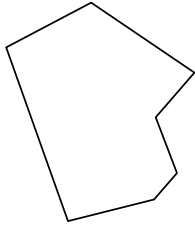


Identify the type of shape shown.


1)



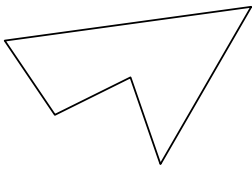
2)



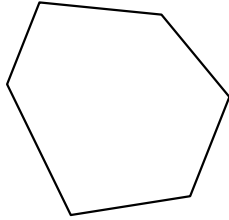
3)



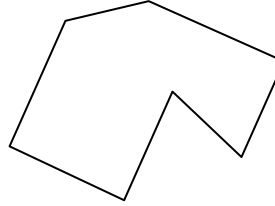
4)



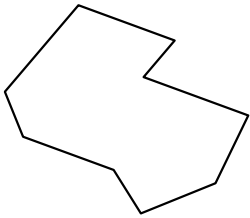
5)




6)



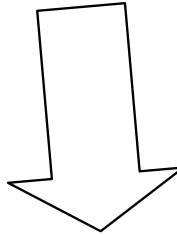
7)




8)



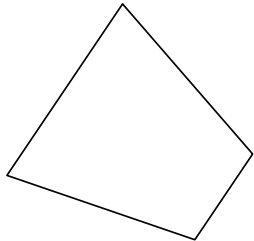
9)



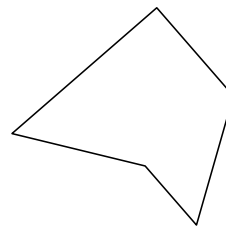
10)



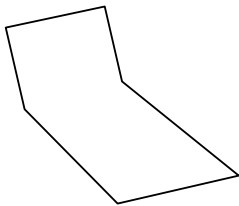
11)



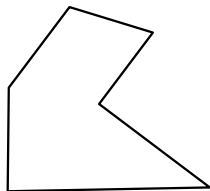
12)




13)



14)



15)



Answers

1. pentagon

2. heptagon

3. hexagon

4. pentagon

5. hexagon

6. heptagon

7. nonagon

8. decagon

9. heptagon

10. decagon

11. quadrilateral

12. pentagon

13. hexagon

14. hexagon

15. pentagon