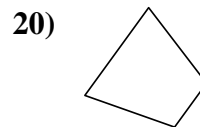
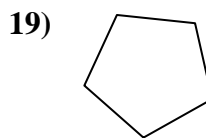
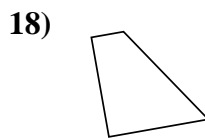
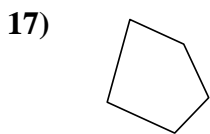
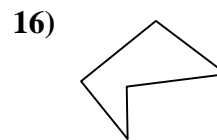
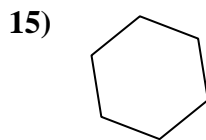
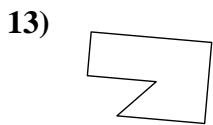
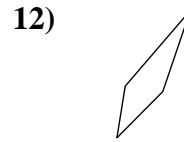
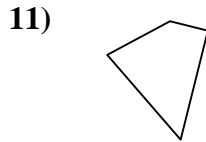
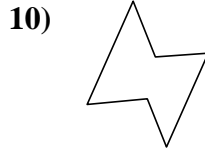
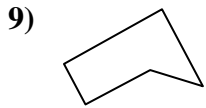
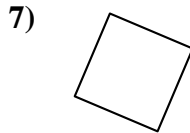
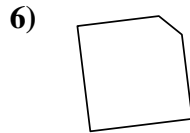
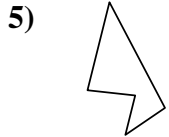
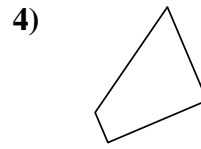
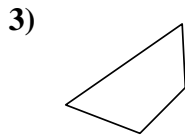
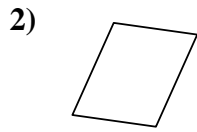
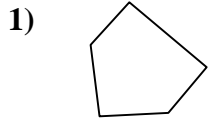




Determine if the shape shown is a quadrilateral (yes) or not (no).

Answers

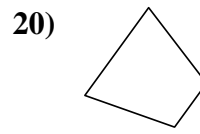
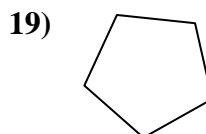
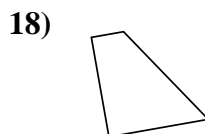
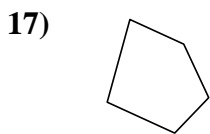
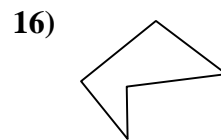
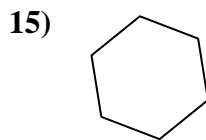
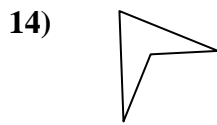
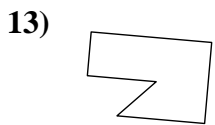
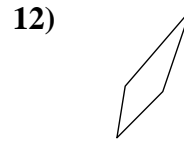
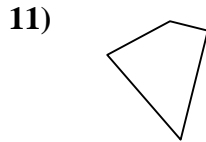
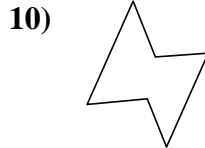
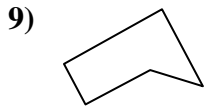
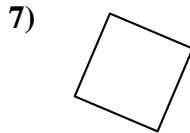
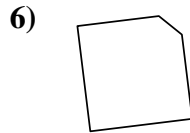
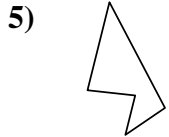
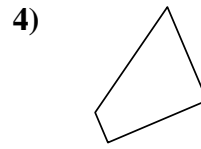
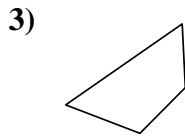
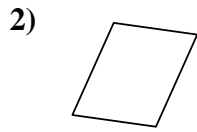
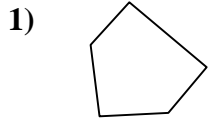


- 1. _____
- 2. _____
- 3. _____
- 4. _____
- 5. _____
- 6. _____
- 7. _____
- 8. _____
- 9. _____
- 10. _____
- 11. _____
- 12. _____
- 13. _____
- 14. _____
- 15. _____
- 16. _____
- 17. _____
- 18. _____
- 19. _____
- 20. _____



Determine if the shape shown is a quadrilateral (yes) or not (no).

Answers



1. no

2. yes

3. yes

4. yes

5. no

6. no

7. yes

8. yes

9. no

10. no

11. yes

12. yes

13. no

14. yes

15. no

16. no

17. no

18. yes

19. no

20. yes