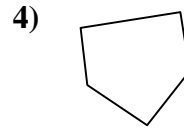
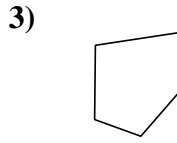
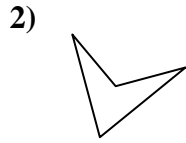
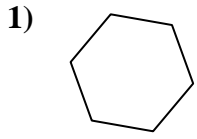




Determine if the shape shown is a quadrilateral (yes) or not (no).

Answers

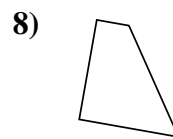
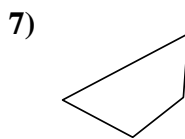
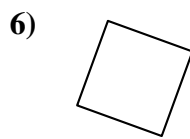
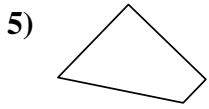


1. _____

2. _____

3. _____

4. _____

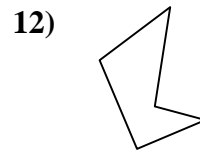
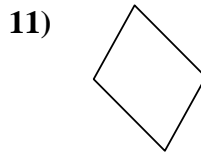
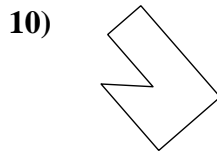
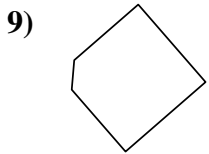


5. _____

6. _____

7. _____

8. _____

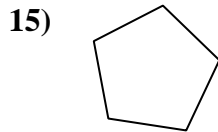

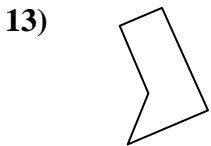


9. _____

10. _____

11. _____

12. _____

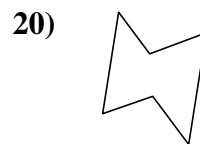
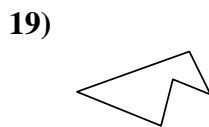
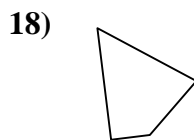
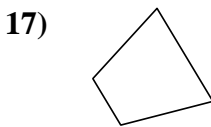


13. _____

14. _____

15. _____

16. _____



17. _____

18. _____

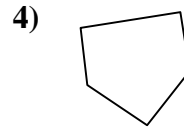
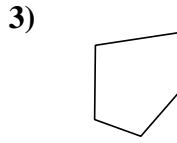
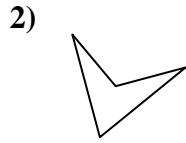
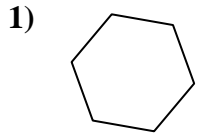
19. _____

20. _____



Determine if the shape shown is a quadrilateral (yes) or not (no).

Answers

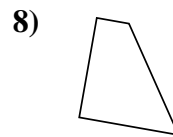
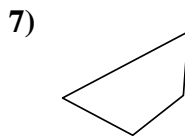
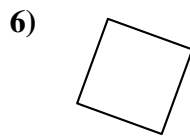
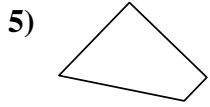


1. no

2. yes

3. no

4. no

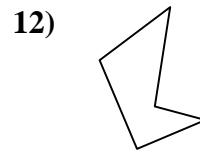
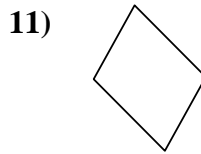
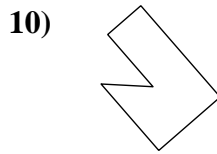
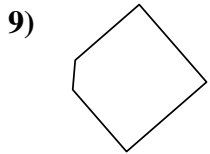


5. yes

6. yes

7. yes

8. yes

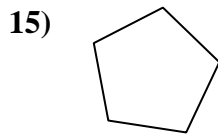

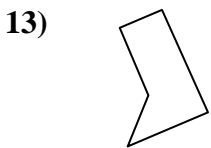


9. no

10. no

11. yes

12. no

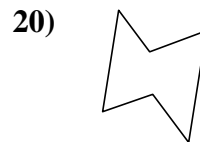
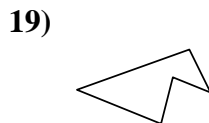
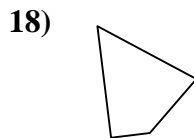
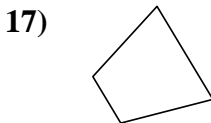


13. no

14. yes

15. no

16. yes



17. yes

18. yes

19. no

20. no