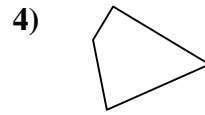
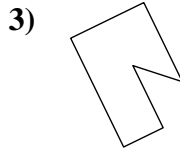
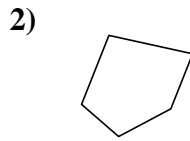
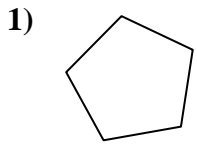




Determine if the shape shown is a quadrilateral (yes) or not (no).

Answers

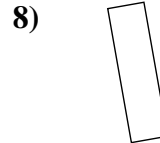
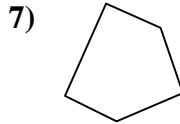
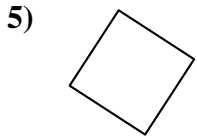


1. _____

2. _____

3. _____

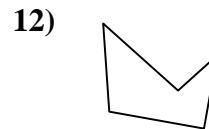
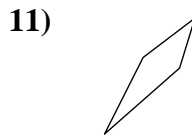
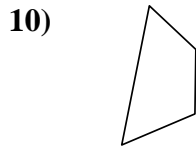
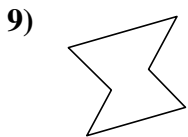
4. _____



5. _____

6. _____

7. _____

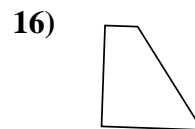
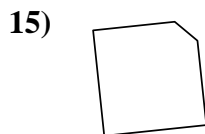
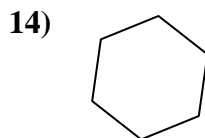
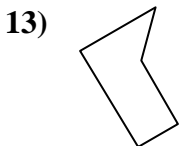


8. _____

9. _____

10. _____

11. _____


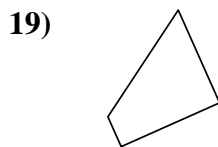
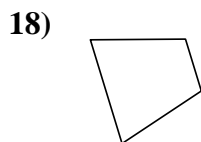


12. _____

13. _____

14. _____

15. _____



16. _____

17. _____

18. _____

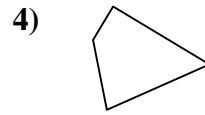
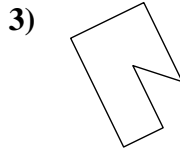
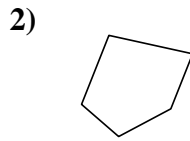
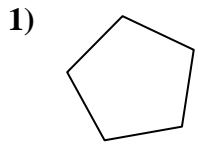
19. _____

20. _____



Determine if the shape shown is a quadrilateral (yes) or not (no).

Answers

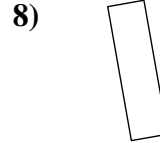
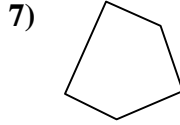
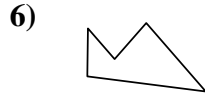
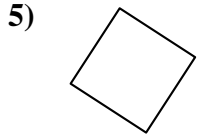


1. no

2. no

3. no

4. yes

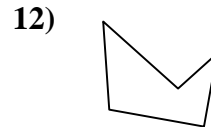
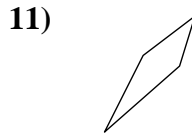
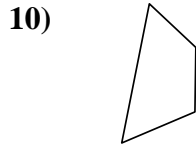
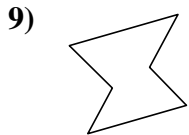


5. yes

6. no

7. no

8. yes

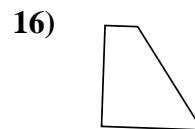
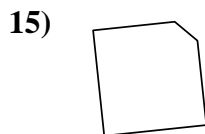
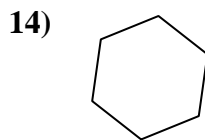
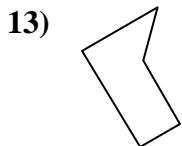


9. no

10. yes

11. yes

12. no


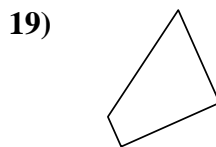
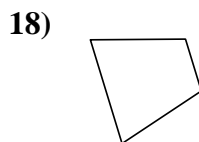


13. no

14. no

15. no

16. yes



17. yes

18. yes

19. yes

20. yes