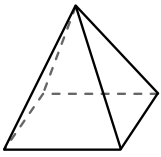


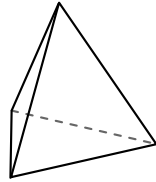


Use the diagram to determine the faces, vertices and edges of the shapes.



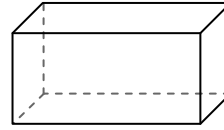
rectangular pyramid

- 1) Faces: \_\_\_\_\_
- 2) Vertices: \_\_\_\_\_
- 3) Edges: \_\_\_\_\_



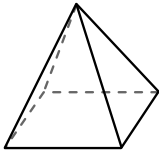
triangular pyramid

- 4) Faces: \_\_\_\_\_
- 5) Vertices: \_\_\_\_\_
- 6) Edges: \_\_\_\_\_

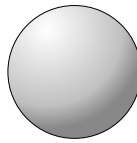


rectangular prism

- 7) Faces: \_\_\_\_\_
- 8) Vertices: \_\_\_\_\_
- 9) Edges: \_\_\_\_\_

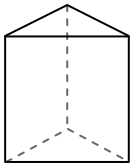


rectangular pyramid

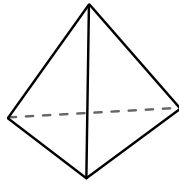


sphere

- 10) Which shape has more faces?
- A. rectangular pyramid
  - B. sphere
  - C. They both have the same number of faces.

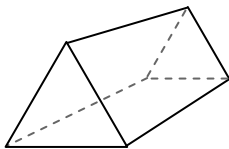


triangular prism

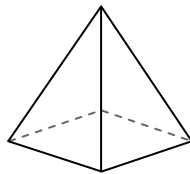


triangular pyramid

- 11) Which shape has more vertices?
- A. triangular prism
  - B. triangular pyramid
  - C. They both have the same number of vertices.



triangular prism



rectangular pyramid

- 12) Which shape has more edges?
- A. triangular prism
  - B. rectangular pyramid
  - C. They both have the same number of edges.

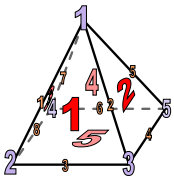
Answers

- 1. \_\_\_\_\_
- 2. \_\_\_\_\_
- 3. \_\_\_\_\_
- 4. \_\_\_\_\_
- 5. \_\_\_\_\_
- 6. \_\_\_\_\_
- 7. \_\_\_\_\_
- 8. \_\_\_\_\_
- 9. \_\_\_\_\_
- 10. \_\_\_\_\_
- 11. \_\_\_\_\_
- 12. \_\_\_\_\_



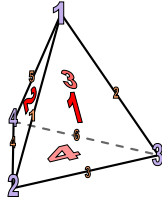
Use the diagram to determine the faces, vertices and edges of the shapes.

Answers



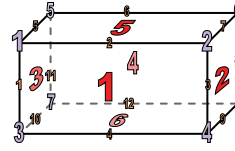
rectangular pyramid

- 1) Faces: 5
- 2) Vertices: 5
- 3) Edges: 8



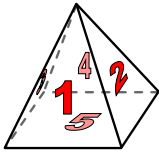
triangular pyramid

- 4) Faces: 4
- 5) Vertices: 4
- 6) Edges: 6

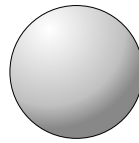


rectangular prism

- 7) Faces: 6
- 8) Vertices: 8
- 9) Edges: 12



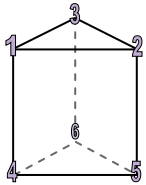
rectangular pyramid



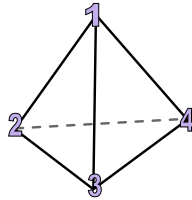
sphere

- 10) Which shape has more faces?
- A. rectangular pyramid
  - B. sphere
  - C. They both have the same number of faces.

- 1. 5
- 2. 5
- 3. 8
- 4. 4
- 5. 4
- 6. 6
- 7. 6
- 8. 8
- 9. 12
- 10. A
- 11. A
- 12. A

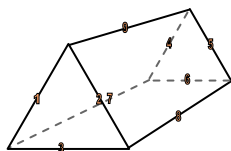


triangular prism

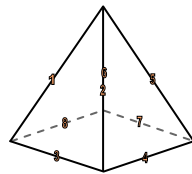


triangular pyramid

- 11) Which shape has more vertices?
- A. triangular prism
  - B. triangular pyramid
  - C. They both have the same number of vertices.



triangular prism



rectangular pyramid

- 12) Which shape has more edges?
- A. triangular prism
  - B. rectangular pyramid
  - C. They both have the same number of edges.