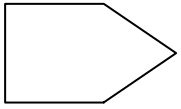




Determine which letter BEST represents the shapes that were used to create the figure shown.

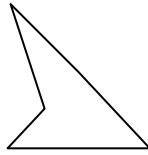
Answers

1)



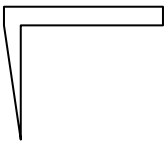
- A. A Triangle and a Quadrilateral
- B. A Quadrilateral and a Pentagon
- C. A Hexagon and an Octagon
- D. A Quadrilateral and a Hexagon

2)



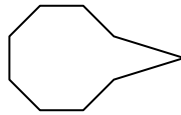
- A. A Rectangle and a Pentagon
- B. A Triangle and a Triangle
- C. A Pentagon and an Octagon
- D. A Rectangle and a Heptagon

3)



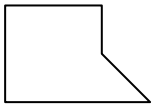
- A. A Quadrilateral and a Hexagon
- B. A Triangle and a Quadrilateral
- C. A Pentagon and a Heptagon
- D. A Square and an Octagon

4)



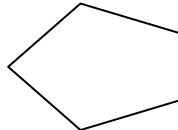
- A. A Square and a Rectangle
- B. A Square and a Pentagon
- C. A Rectangle and a Heptagon
- D. An Octagon and a Triangle

5)



- A. A Triangle and a Square
- B. A Triangle and a Hexagon
- C. A Triangle and an Octagon
- D. A Quadrilateral and a Pentagon

6)



- A. A Square and a Heptagon
- B. A Pentagon and an Octagon
- C. A Quadrilateral and a Triangle
- D. A Triangle and a Heptagon

7)



- A. A Quadrilateral and a Hexagon
- B. A Triangle and a Quadrilateral
- C. A Quadrilateral and an Octagon
- D. A Pentagon and a Hexagon

8)



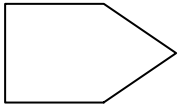
- A. A Triangle and a Hexagon
- B. A Triangle and a Pentagon
- C. A Triangle and a Quadrilateral
- D. A Pentagon and a Hexagon

- 1. _____
- 2. _____
- 3. _____
- 4. _____
- 5. _____
- 6. _____
- 7. _____
- 8. _____



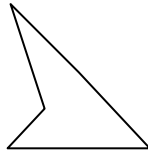
Determine which letter **BEST** represents the shapes that were used to create the figure shown.

1)



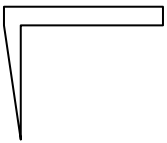
- A. A Triangle and a Quadrilateral
- B. A Quadrilateral and a Pentagon
- C. A Hexagon and an Octagon
- D. A Quadrilateral and a Hexagon

2)



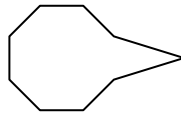
- A. A Rectangle and a Pentagon
- B. A Triangle and a Triangle
- C. A Pentagon and an Octagon
- D. A Rectangle and a Heptagon

3)



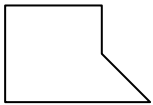
- A. A Quadrilateral and a Hexagon
- B. A Triangle and a Quadrilateral
- C. A Pentagon and a Heptagon
- D. A Square and an Octagon

4)



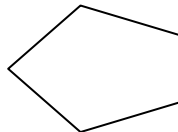
- A. A Square and a Rectangle
- B. A Square and a Pentagon
- C. A Rectangle and a Heptagon
- D. An Octagon and a Triangle

5)



- A. A Triangle and a Square
- B. A Triangle and a Hexagon
- C. A Triangle and an Octagon
- D. A Quadrilateral and a Pentagon

6)



- A. A Square and a Heptagon
- B. A Pentagon and an Octagon
- C. A Quadrilateral and a Triangle
- D. A Triangle and a Heptagon

7)



- A. A Quadrilateral and a Hexagon
- B. A Triangle and a Quadrilateral
- C. A Quadrilateral and an Octagon
- D. A Pentagon and a Hexagon

8)



- A. A Triangle and a Hexagon
- B. A Triangle and a Pentagon
- C. A Triangle and a Quadrilateral
- D. A Pentagon and a Hexagon

Answers

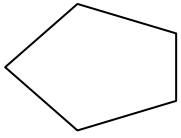
- 1. **A**
- 2. **B**
- 3. **B**
- 4. **D**
- 5. **A**
- 6. **C**
- 7. **B**
- 8. **C**



Determine which letter BEST represents the shapes that were used to create the figure shown.

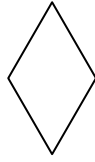
Answers

1)



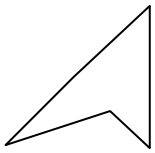
- A. A Quadrilateral and a Heptagon
- B. A Pentagon and a Hexagon
- C. A Quadrilateral and a Triangle
- D. A Square and a Rectangle

2)



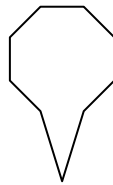
- A. A Triangle and an Octagon
- B. A Triangle and a Triangle
- C. A Pentagon and a Hexagon
- D. A Square and a Pentagon

3)



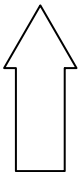
- A. A Triangle and a Triangle
- B. A Quadrilateral and a Hexagon
- C. A Rectangle and a Quadrilateral
- D. A Heptagon and an Octagon

4)



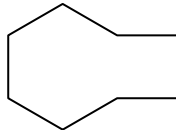
- A. An Octagon and a Triangle
- B. A Quadrilateral and a Hexagon
- C. A Triangle and a Quadrilateral
- D. A Triangle and a Rectangle

5)



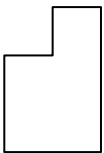
- A. A Quadrilateral and a Hexagon
- B. A Hexagon and an Octagon
- C. A Quadrilateral and a Triangle
- D. A Triangle and a Square

6)



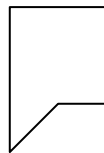
- A. A Pentagon and a Heptagon
- B. A Square and a Heptagon
- C. A Rectangle and a Hexagon
- D. A Square and a Pentagon

7)



- A. A Heptagon and an Octagon
- B. A Square and a Heptagon
- C. A Quadrilateral and a Quadrilateral
- D. A Triangle and a Pentagon

8)



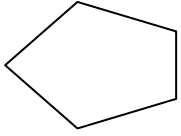
- A. A Square and a Pentagon
- B. A Quadrilateral and a Triangle
- C. A Rectangle and a Quadrilateral
- D. A Square and a Heptagon

- 1. _____
- 2. _____
- 3. _____
- 4. _____
- 5. _____
- 6. _____
- 7. _____
- 8. _____



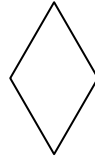
Determine which letter **BEST** represents the shapes that were used to create the figure shown.

1)



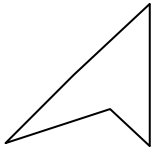
- A. A Quadrilateral and a Heptagon
- B. A Pentagon and a Hexagon
- C. A Quadrilateral and a Triangle
- D. A Square and a Rectangle

2)



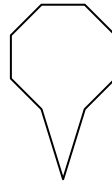
- A. A Triangle and an Octagon
- B. A Triangle and a Triangle
- C. A Pentagon and a Hexagon
- D. A Square and a Pentagon

3)



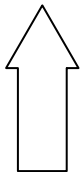
- A. A Triangle and a Triangle
- B. A Quadrilateral and a Hexagon
- C. A Rectangle and a Quadrilateral
- D. A Heptagon and an Octagon

4)



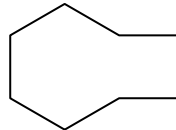
- A. An Octagon and a Triangle
- B. A Quadrilateral and a Hexagon
- C. A Triangle and a Quadrilateral
- D. A Triangle and a Rectangle

5)



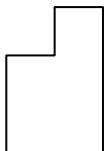
- A. A Quadrilateral and a Hexagon
- B. A Hexagon and an Octagon
- C. A Quadrilateral and a Triangle
- D. A Triangle and a Square

6)



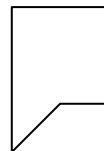
- A. A Pentagon and a Heptagon
- B. A Square and a Heptagon
- C. A Rectangle and a Hexagon
- D. A Square and a Pentagon

7)



- A. A Heptagon and an Octagon
- B. A Square and a Heptagon
- C. A Quadrilateral and a Quadrilateral
- D. A Triangle and a Pentagon

8)



- A. A Square and a Pentagon
- B. A Quadrilateral and a Triangle
- C. A Rectangle and a Quadrilateral
- D. A Square and a Heptagon

Answers

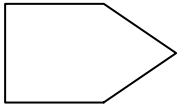
- 1. **C**
- 2. **B**
- 3. **A**
- 4. **A**
- 5. **C**
- 6. **C**
- 7. **C**
- 8. **B**



Determine which letter BEST represents the shapes that were used to create the figure shown.

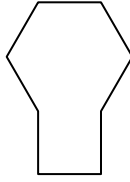
Answers

1)



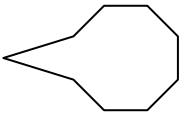
- A. A Rectangle and a Pentagon
- B. A Square and an Octagon
- C. A Pentagon and a Hexagon
- D. A Rectangle and a Triangle

2)




- A. A Square and a Hexagon
- B. A Quadrilateral and an Octagon
- C. A Square and an Octagon
- D. A Pentagon and an Octagon

3)



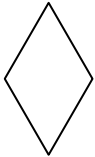
- A. A Triangle and an Octagon
- B. A Heptagon and an Octagon
- C. A Triangle and a Square
- D. A Rectangle and a Hexagon

4)



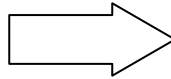
- A. A Square and a Hexagon
- B. A Triangle and a Square
- C. A Rectangle and a Triangle
- D. A Quadrilateral and a Heptagon

5)



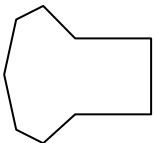
- A. A Triangle and a Triangle
- B. A Triangle and an Octagon
- C. A Rectangle and a Hexagon
- D. A Rectangle and a Pentagon

6)



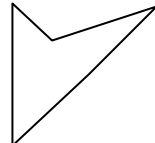
- A. A Hexagon and a Heptagon
- B. A Square and a Rectangle
- C. A Square and a Hexagon
- D. A Triangle and a Rectangle

7)



- A. A Quadrilateral and an Octagon
- B. A Quadrilateral and a Heptagon
- C. A Square and a Quadrilateral
- D. A Rectangle and a Quadrilateral

8)



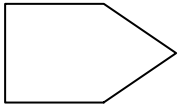
- A. A Triangle and a Hexagon
- B. A Rectangle and a Quadrilateral
- C. A Hexagon and an Octagon
- D. A Triangle and a Triangle

- 1. _____
- 2. _____
- 3. _____
- 4. _____
- 5. _____
- 6. _____
- 7. _____
- 8. _____



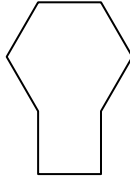
Determine which letter **BEST** represents the shapes that were used to create the figure shown.

1)



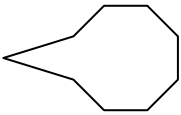
- A. A Rectangle and a Pentagon
- B. A Square and an Octagon
- C. A Pentagon and a Hexagon
- D. A Rectangle and a Triangle

2)




- A. A Square and a Hexagon
- B. A Quadrilateral and an Octagon
- C. A Square and an Octagon
- D. A Pentagon and an Octagon

3)



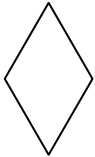
- A. A Triangle and an Octagon
- B. A Heptagon and an Octagon
- C. A Triangle and a Square
- D. A Rectangle and a Hexagon

4)



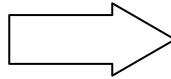
- A. A Square and a Hexagon
- B. A Triangle and a Square
- C. A Rectangle and a Triangle
- D. A Quadrilateral and a Heptagon

5)



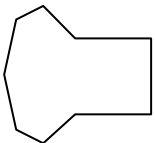
- A. A Triangle and a Triangle
- B. A Triangle and an Octagon
- C. A Rectangle and a Hexagon
- D. A Rectangle and a Pentagon

6)



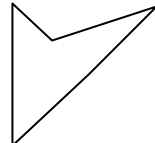
- A. A Hexagon and a Heptagon
- B. A Square and a Rectangle
- C. A Square and a Hexagon
- D. A Triangle and a Rectangle

7)



- A. A Quadrilateral and an Octagon
- B. A Quadrilateral and a Heptagon
- C. A Square and a Quadrilateral
- D. A Rectangle and a Quadrilateral

8)



- A. A Triangle and a Hexagon
- B. A Rectangle and a Quadrilateral
- C. A Hexagon and an Octagon
- D. A Triangle and a Triangle

Answers

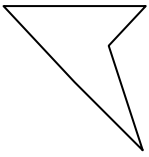
- 1. **D**
- 2. **A**
- 3. **A**
- 4. **C**
- 5. **A**
- 6. **D**
- 7. **B**
- 8. **D**



Determine which letter BEST represents the shapes that were used to create the figure shown.

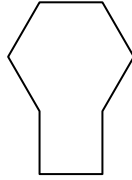
Answers

1)



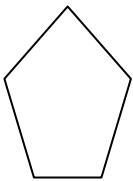
- A. A Square and a Heptagon
- B. A Rectangle and a Quadrilateral
- C. A Triangle and a Triangle
- D. A Hexagon and a Heptagon

2)



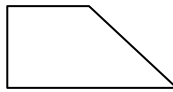
- A. A Quadrilateral and an Octagon
- B. A Triangle and a Quadrilateral
- C. A Rectangle and a Hexagon
- D. A Triangle and a Heptagon

3)



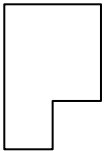
- A. A Triangle and a Hexagon
- B. A Triangle and a Quadrilateral
- C. A Triangle and a Rectangle
- D. A Pentagon and a Heptagon

4)



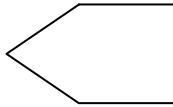
- A. A Triangle and a Square
- B. A Square and a Heptagon
- C. A Rectangle and a Pentagon
- D. A Triangle and a Heptagon

5)



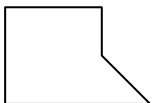
- A. A Quadrilateral and a Quadrilateral
- B. A Triangle and a Hexagon
- C. A Quadrilateral and a Hexagon
- D. A Triangle and an Octagon

6)



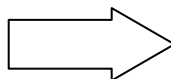
- A. A Pentagon and an Octagon
- B. A Triangle and a Quadrilateral
- C. A Rectangle and a Quadrilateral
- D. A Quadrilateral and a Hexagon

7)



- A. A Triangle and an Octagon
- B. A Hexagon and an Octagon
- C. A Square and a Rectangle
- D. A Triangle and a Square

8)

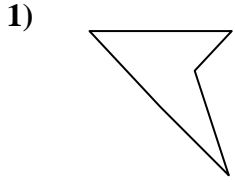


- A. A Triangle and a Hexagon
- B. A Pentagon and an Octagon
- C. A Rectangle and a Hexagon
- D. A Triangle and a Quadrilateral

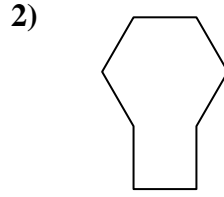
- 1. _____
- 2. _____
- 3. _____
- 4. _____
- 5. _____
- 6. _____
- 7. _____
- 8. _____



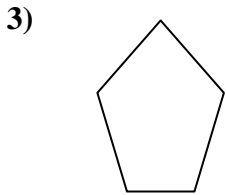
Determine which letter **BEST** represents the shapes that were used to create the figure shown.



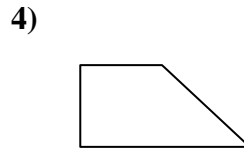
- A. A Square and a Heptagon
- B. A Rectangle and a Quadrilateral
- C. A Triangle and a Triangle
- D. A Hexagon and a Heptagon



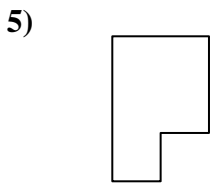
- A. A Quadrilateral and an Octagon
- B. A Triangle and a Quadrilateral
- C. A Rectangle and a Hexagon
- D. A Triangle and a Heptagon



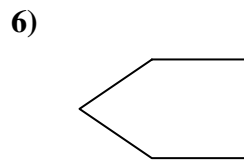
- A. A Triangle and a Hexagon
- B. A Triangle and a Quadrilateral
- C. A Triangle and a Rectangle
- D. A Pentagon and a Heptagon



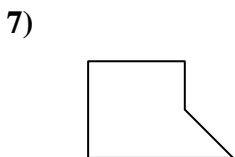
- A. A Triangle and a Square
- B. A Square and a Heptagon
- C. A Rectangle and a Pentagon
- D. A Triangle and a Heptagon



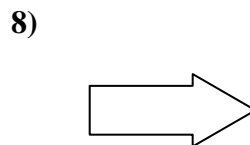
- A. A Quadrilateral and a Quadrilateral
- B. A Triangle and a Hexagon
- C. A Quadrilateral and a Hexagon
- D. A Triangle and an Octagon



- A. A Pentagon and an Octagon
- B. A Triangle and a Quadrilateral
- C. A Rectangle and a Quadrilateral
- D. A Quadrilateral and a Hexagon



- A. A Triangle and an Octagon
- B. A Hexagon and an Octagon
- C. A Square and a Rectangle
- D. A Triangle and a Square



- A. A Triangle and a Hexagon
- B. A Pentagon and an Octagon
- C. A Rectangle and a Hexagon
- D. A Triangle and a Quadrilateral

Answers

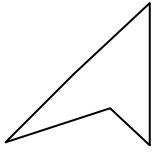
- 1. **C**
- 2. **C**
- 3. **B**
- 4. **A**
- 5. **A**
- 6. **B**
- 7. **D**
- 8. **D**



Determine which letter BEST represents the shapes that were used to create the figure shown.

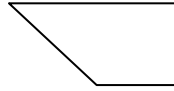
Answers

1)



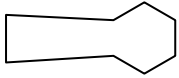
- A. A Triangle and a Triangle
- B. A Quadrilateral and a Pentagon
- C. A Rectangle and an Octagon
- D. A Square and a Hexagon

2)



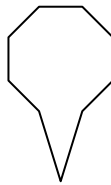
- A. A Quadrilateral and a Heptagon
- B. A Triangle and a Heptagon
- C. A Rectangle and a Quadrilateral
- D. A Rectangle and a Triangle

3)



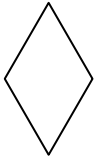
- A. A Triangle and a Pentagon
- B. A Quadrilateral and an Octagon
- C. A Pentagon and a Hexagon
- D. A Hexagon and a Quadrilateral

4)



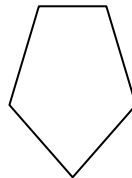
- A. A Pentagon and a Hexagon
- B. A Triangle and a Square
- C. A Quadrilateral and a Heptagon
- D. A Triangle and an Octagon

5)




- A. A Square and an Octagon
- B. A Square and a Hexagon
- C. A Square and a Rectangle
- D. A Triangle and a Triangle

6)



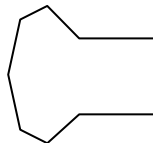
- A. A Pentagon and a Hexagon
- B. A Triangle and a Rectangle
- C. A Quadrilateral and a Triangle
- D. A Quadrilateral and a Hexagon

7)



- A. A Triangle and a Quadrilateral
- B. A Rectangle and a Quadrilateral
- C. A Pentagon and a Hexagon
- D. A Square and a Rectangle

8)



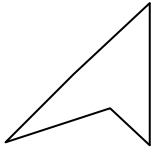
- A. A Triangle and a Hexagon
- B. A Pentagon and a Hexagon
- C. A Square and a Rectangle
- D. A Heptagon and a Rectangle

- 1. _____
- 2. _____
- 3. _____
- 4. _____
- 5. _____
- 6. _____
- 7. _____
- 8. _____



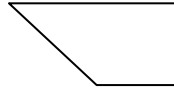
Determine which letter **BEST** represents the shapes that were used to create the figure shown.

1)



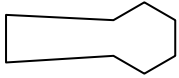
- A. A Triangle and a Triangle
- B. A Quadrilateral and a Pentagon
- C. A Rectangle and an Octagon
- D. A Square and a Hexagon

2)



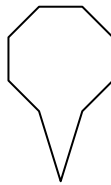
- A. A Quadrilateral and a Heptagon
- B. A Triangle and a Heptagon
- C. A Rectangle and a Quadrilateral
- D. A Rectangle and a Triangle

3)



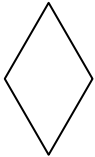
- A. A Triangle and a Pentagon
- B. A Quadrilateral and an Octagon
- C. A Pentagon and a Hexagon
- D. A Hexagon and a Quadrilateral

4)



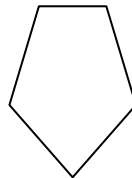
- A. A Pentagon and a Hexagon
- B. A Triangle and a Square
- C. A Quadrilateral and a Heptagon
- D. A Triangle and an Octagon

5)




- A. A Square and an Octagon
- B. A Square and a Hexagon
- C. A Square and a Rectangle
- D. A Triangle and a Triangle

6)



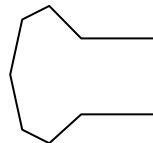
- A. A Pentagon and a Hexagon
- B. A Triangle and a Rectangle
- C. A Quadrilateral and a Triangle
- D. A Quadrilateral and a Hexagon

7)



- A. A Triangle and a Quadrilateral
- B. A Rectangle and a Quadrilateral
- C. A Pentagon and a Hexagon
- D. A Square and a Rectangle

8)



- A. A Triangle and a Hexagon
- B. A Pentagon and a Hexagon
- C. A Square and a Rectangle
- D. A Heptagon and a Rectangle

Answers

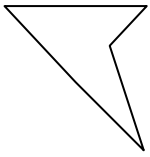
- 1. **A**
- 2. **D**
- 3. **D**
- 4. **D**
- 5. **D**
- 6. **C**
- 7. **A**
- 8. **D**



Determine which letter BEST represents the shapes that were used to create the figure shown.

Answers

1)



- A. A Square and a Quadrilateral
- B. A Triangle and a Triangle
- C. A Quadrilateral and a Hexagon
- D. A Hexagon and a Heptagon

2)



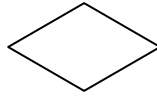
- A. A Quadrilateral and a Pentagon
- B. A Heptagon and an Octagon
- C. A Rectangle and a Heptagon
- D. A Quadrilateral and a Quadrilateral

3)



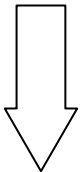
- A. A Quadrilateral and a Triangle
- B. A Square and a Rectangle
- C. A Pentagon and a Heptagon
- D. A Triangle and an Octagon

4)



- A. A Quadrilateral and a Heptagon
- B. A Quadrilateral and a Pentagon
- C. A Triangle and a Triangle
- D. A Triangle and a Square

5)




- A. A Rectangle and a Hexagon
- B. A Triangle and a Pentagon
- C. A Rectangle and a Triangle
- D. A Square and an Octagon

6)



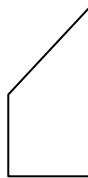
- A. A Quadrilateral and an Octagon
- B. A Triangle and a Quadrilateral
- C. A Triangle and a Pentagon
- D. A Triangle and a Heptagon

7)



- A. A Triangle and a Quadrilateral
- B. A Square and an Octagon
- C. A Square and a Heptagon
- D. A Square and a Hexagon

8)



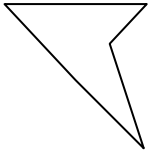
- A. A Rectangle and a Heptagon
- B. A Quadrilateral and a Heptagon
- C. A Rectangle and a Hexagon
- D. A Square and a Triangle

- 1. _____
- 2. _____
- 3. _____
- 4. _____
- 5. _____
- 6. _____
- 7. _____
- 8. _____



Determine which letter **BEST** represents the shapes that were used to create the figure shown.

1)



- A. A Square and a Quadrilateral
- B. A Triangle and a Triangle
- C. A Quadrilateral and a Hexagon
- D. A Hexagon and a Heptagon

2)



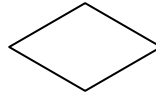
- A. A Quadrilateral and a Pentagon
- B. A Heptagon and an Octagon
- C. A Rectangle and a Heptagon
- D. A Quadrilateral and a Quadrilateral

3)



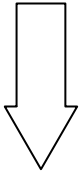
- A. A Quadrilateral and a Triangle
- B. A Square and a Rectangle
- C. A Pentagon and a Heptagon
- D. A Triangle and an Octagon

4)



- A. A Quadrilateral and a Heptagon
- B. A Quadrilateral and a Pentagon
- C. A Triangle and a Triangle
- D. A Triangle and a Square

5)




- A. A Rectangle and a Hexagon
- B. A Triangle and a Pentagon
- C. A Rectangle and a Triangle
- D. A Square and an Octagon

6)



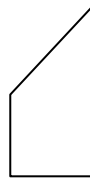
- A. A Quadrilateral and an Octagon
- B. A Triangle and a Quadrilateral
- C. A Triangle and a Pentagon
- D. A Triangle and a Heptagon

7)



- A. A Triangle and a Quadrilateral
- B. A Square and an Octagon
- C. A Square and a Heptagon
- D. A Square and a Hexagon

8)



- A. A Rectangle and a Heptagon
- B. A Quadrilateral and a Heptagon
- C. A Rectangle and a Hexagon
- D. A Square and a Triangle

Answers

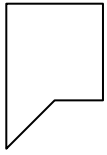
- 1. **B**
- 2. **D**
- 3. **A**
- 4. **C**
- 5. **C**
- 6. **B**
- 7. **A**
- 8. **D**



Determine which letter BEST represents the shapes that were used to create the figure shown.

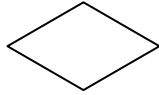
Answers

1)



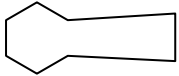
- A. A Quadrilateral and a Hexagon
- B. A Triangle and a Square
- C. A Triangle and a Heptagon
- D. A Rectangle and a Quadrilateral

2)



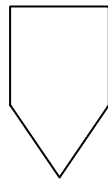
- A. A Triangle and a Triangle
- B. A Quadrilateral and a Hexagon
- C. A Square and a Pentagon
- D. A Quadrilateral and a Heptagon

3)



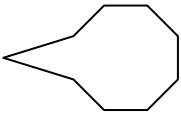
- A. A Pentagon and an Octagon
- B. A Rectangle and a Heptagon
- C. A Quadrilateral and a Hexagon
- D. A Rectangle and a Pentagon

4)



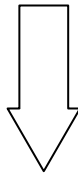
- A. A Square and a Heptagon
- B. A Triangle and a Square
- C. A Square and a Pentagon
- D. A Rectangle and a Hexagon

5)



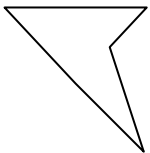
- A. A Pentagon and an Octagon
- B. A Triangle and a Heptagon
- C. A Triangle and a Rectangle
- D. A Triangle and an Octagon

6)



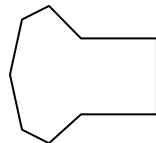
- A. A Pentagon and a Heptagon
- B. A Square and a Hexagon
- C. A Triangle and a Pentagon
- D. A Triangle and a Quadrilateral

7)



- A. A Pentagon and an Octagon
- B. A Triangle and a Triangle
- C. A Rectangle and a Hexagon
- D. A Hexagon and a Heptagon

8)



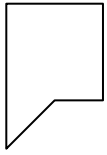
- A. A Square and a Heptagon
- B. A Triangle and a Quadrilateral
- C. A Rectangle and a Hexagon
- D. A Quadrilateral and an Octagon

- 1. _____
- 2. _____
- 3. _____
- 4. _____
- 5. _____
- 6. _____
- 7. _____
- 8. _____



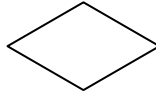
Determine which letter **BEST** represents the shapes that were used to create the figure shown.

1)



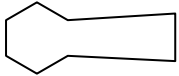
- A. A Quadrilateral and a Hexagon
- B. A Triangle and a Square
- C. A Triangle and a Heptagon
- D. A Rectangle and a Quadrilateral

2)



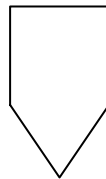
- A. A Triangle and a Triangle
- B. A Quadrilateral and a Hexagon
- C. A Square and a Pentagon
- D. A Quadrilateral and a Heptagon

3)



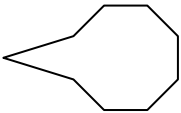
- A. A Pentagon and an Octagon
- B. A Rectangle and a Heptagon
- C. A Quadrilateral and a Hexagon
- D. A Rectangle and a Pentagon

4)



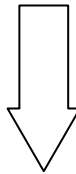
- A. A Square and a Heptagon
- B. A Triangle and a Square
- C. A Square and a Pentagon
- D. A Rectangle and a Hexagon

5)



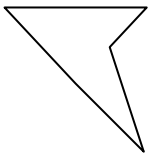
- A. A Pentagon and an Octagon
- B. A Triangle and a Heptagon
- C. A Triangle and a Rectangle
- D. A Triangle and an Octagon

6)



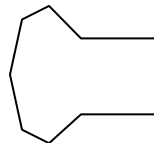
- A. A Pentagon and a Heptagon
- B. A Square and a Hexagon
- C. A Triangle and a Pentagon
- D. A Triangle and a Quadrilateral

7)



- A. A Pentagon and an Octagon
- B. A Triangle and a Triangle
- C. A Rectangle and a Hexagon
- D. A Hexagon and a Heptagon

8)



- A. A Square and a Heptagon
- B. A Triangle and a Quadrilateral
- C. A Rectangle and a Hexagon
- D. A Quadrilateral and an Octagon

Answers

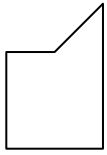
- 1. **B**
- 2. **A**
- 3. **C**
- 4. **B**
- 5. **D**
- 6. **D**
- 7. **B**
- 8. **A**



Determine which letter BEST represents the shapes that were used to create the figure shown.

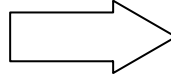
Answers

1)



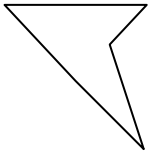
- A. A Hexagon and an Octagon
- B. A Triangle and a Square
- C. A Quadrilateral and a Hexagon
- D. A Square and an Octagon

2)



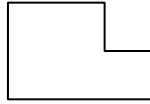
- A. A Square and a Rectangle
- B. A Square and a Quadrilateral
- C. A Square and an Octagon
- D. A Triangle and a Rectangle

3)



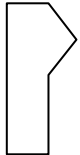
- A. A Square and a Rectangle
- B. A Rectangle and a Hexagon
- C. A Triangle and a Triangle
- D. A Hexagon and a Heptagon

4)



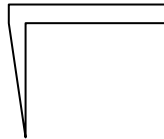
- A. A Pentagon and a Heptagon
- B. A Square and a Quadrilateral
- C. A Rectangle and a Pentagon
- D. A Quadrilateral and a Hexagon

5)



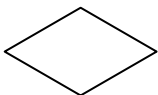
- A. A Square and a Rectangle
- B. A Rectangle and a Pentagon
- C. A Triangle and a Quadrilateral
- D. A Quadrilateral and a Pentagon

6)



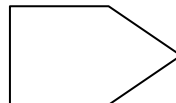
- A. A Square and a Quadrilateral
- B. A Pentagon and a Heptagon
- C. A Rectangle and an Octagon
- D. A Rectangle and a Triangle

7)



- A. A Pentagon and a Heptagon
- B. A Quadrilateral and a Heptagon
- C. A Triangle and a Triangle
- D. A Rectangle and a Quadrilateral

8)



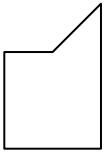
- A. A Hexagon and a Heptagon
- B. A Pentagon and a Heptagon
- C. A Triangle and a Square
- D. A Quadrilateral and an Octagon

- 1. _____
- 2. _____
- 3. _____
- 4. _____
- 5. _____
- 6. _____
- 7. _____
- 8. _____



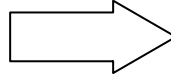
Determine which letter **BEST** represents the shapes that were used to create the figure shown.

1)



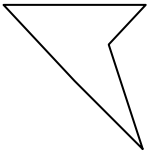
- A. A Hexagon and an Octagon
- B. A Triangle and a Square
- C. A Quadrilateral and a Hexagon
- D. A Square and an Octagon

2)



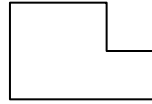
- A. A Square and a Rectangle
- B. A Square and a Quadrilateral
- C. A Square and an Octagon
- D. A Triangle and a Rectangle

3)



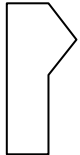
- A. A Square and a Rectangle
- B. A Rectangle and a Hexagon
- C. A Triangle and a Triangle
- D. A Hexagon and a Heptagon

4)



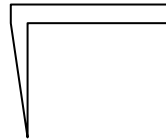
- A. A Pentagon and a Heptagon
- B. A Square and a Quadrilateral
- C. A Rectangle and a Pentagon
- D. A Quadrilateral and a Hexagon

5)



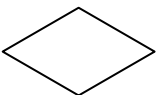
- A. A Square and a Rectangle
- B. A Rectangle and a Pentagon
- C. A Triangle and a Quadrilateral
- D. A Quadrilateral and a Pentagon

6)



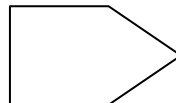
- A. A Square and a Quadrilateral
- B. A Pentagon and a Heptagon
- C. A Rectangle and an Octagon
- D. A Rectangle and a Triangle

7)



- A. A Pentagon and a Heptagon
- B. A Quadrilateral and a Heptagon
- C. A Triangle and a Triangle
- D. A Rectangle and a Quadrilateral

8)



- A. A Hexagon and a Heptagon
- B. A Pentagon and a Heptagon
- C. A Triangle and a Square
- D. A Quadrilateral and an Octagon

Answers

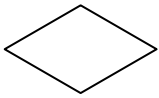
- 1. **B**
- 2. **D**
- 3. **C**
- 4. **B**
- 5. **C**
- 6. **D**
- 7. **C**
- 8. **C**



Determine which letter BEST represents the shapes that were used to create the figure shown.

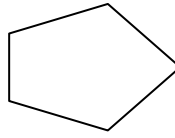
Answers

1)



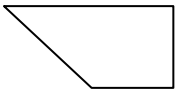
- A. A Triangle and a Heptagon
- B. A Triangle and a Triangle
- C. A Square and a Rectangle
- D. A Rectangle and a Pentagon

2)



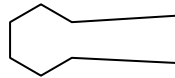
- A. A Square and an Octagon
- B. A Quadrilateral and a Triangle
- C. A Square and a Hexagon
- D. A Triangle and an Octagon

3)



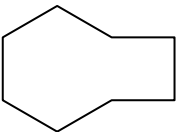
- A. A Square and a Triangle
- B. A Triangle and an Octagon
- C. A Quadrilateral and an Octagon
- D. A Hexagon and a Heptagon

4)



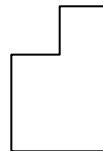
- A. A Heptagon and an Octagon
- B. A Triangle and an Octagon
- C. A Rectangle and a Hexagon
- D. A Hexagon and a Quadrilateral

5)



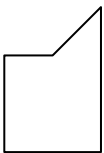
- A. A Triangle and a Pentagon
- B. A Hexagon and a Quadrilateral
- C. A Hexagon and an Octagon
- D. A Pentagon and an Octagon

6)



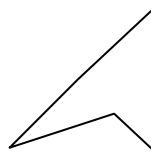
- A. A Triangle and a Quadrilateral
- B. A Triangle and an Octagon
- C. A Quadrilateral and a Square
- D. A Triangle and a Rectangle

7)



- A. A Triangle and an Octagon
- B. A Rectangle and a Pentagon
- C. A Triangle and a Square
- D. A Square and a Quadrilateral

8)



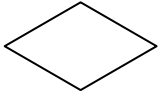
- A. A Rectangle and a Pentagon
- B. A Quadrilateral and a Heptagon
- C. A Quadrilateral and a Pentagon
- D. A Triangle and a Triangle

- 1. _____
- 2. _____
- 3. _____
- 4. _____
- 5. _____
- 6. _____
- 7. _____
- 8. _____



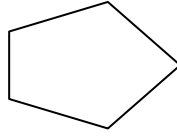
Determine which letter **BEST** represents the shapes that were used to create the figure shown.

1)



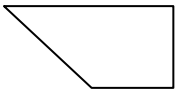
- A. A Triangle and a Heptagon
- B. A Triangle and a Triangle
- C. A Square and a Rectangle
- D. A Rectangle and a Pentagon

2)



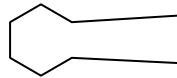
- A. A Square and an Octagon
- B. A Quadrilateral and a Triangle
- C. A Square and a Hexagon
- D. A Triangle and an Octagon

3)



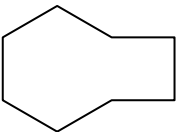
- A. A Square and a Triangle
- B. A Triangle and an Octagon
- C. A Quadrilateral and an Octagon
- D. A Hexagon and a Heptagon

4)



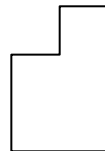
- A. A Heptagon and an Octagon
- B. A Triangle and an Octagon
- C. A Rectangle and a Hexagon
- D. A Hexagon and a Quadrilateral

5)



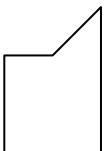
- A. A Triangle and a Pentagon
- B. A Hexagon and a Quadrilateral
- C. A Hexagon and an Octagon
- D. A Pentagon and an Octagon

6)



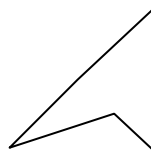
- A. A Triangle and a Quadrilateral
- B. A Triangle and an Octagon
- C. A Quadrilateral and a Square
- D. A Triangle and a Rectangle

7)



- A. A Triangle and an Octagon
- B. A Rectangle and a Pentagon
- C. A Triangle and a Square
- D. A Square and a Quadrilateral

8)



- A. A Rectangle and a Pentagon
- B. A Quadrilateral and a Heptagon
- C. A Quadrilateral and a Pentagon
- D. A Triangle and a Triangle

Answers

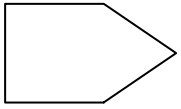
- 1. **B**
- 2. **B**
- 3. **A**
- 4. **D**
- 5. **B**
- 6. **C**
- 7. **C**
- 8. **D**



Determine which letter BEST represents the shapes that were used to create the figure shown.

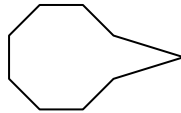
Answers

1)



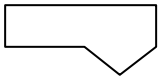
- A. A Square and a Hexagon
- B. A Square and a Pentagon
- C. A Triangle and a Square
- D. A Quadrilateral and an Octagon

2)



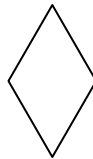
- A. A Pentagon and an Octagon
- B. An Octagon and a Triangle
- C. A Square and a Rectangle
- D. A Square and a Pentagon

3)



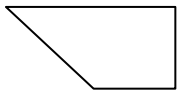
- A. A Square and a Pentagon
- B. A Quadrilateral and a Triangle
- C. A Square and a Rectangle
- D. A Triangle and a Heptagon

4)



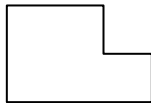
- A. A Square and a Quadrilateral
- B. A Hexagon and an Octagon
- C. A Square and a Heptagon
- D. A Triangle and a Triangle

5)



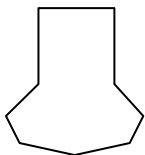
- A. A Rectangle and a Triangle
- B. A Pentagon and an Octagon
- C. A Pentagon and a Heptagon
- D. A Hexagon and an Octagon

6)




- A. A Quadrilateral and a Pentagon
- B. A Square and a Quadrilateral
- C. A Quadrilateral and a Hexagon
- D. A Rectangle and an Octagon

7)



- A. A Triangle and an Octagon
- B. A Hexagon and a Heptagon
- C. A Heptagon and a Square
- D. A Quadrilateral and a Pentagon

8)



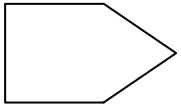
- A. A Square and a Rectangle
- B. A Hexagon and a Quadrilateral
- C. A Square and a Quadrilateral
- D. A Triangle and a Hexagon

- 1. _____
- 2. _____
- 3. _____
- 4. _____
- 5. _____
- 6. _____
- 7. _____
- 8. _____



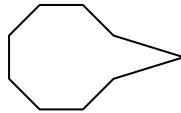
Determine which letter **BEST** represents the shapes that were used to create the figure shown.

1)



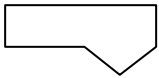
- A. A Square and a Hexagon
- B. A Square and a Pentagon
- C. A Triangle and a Square
- D. A Quadrilateral and an Octagon

2)



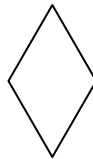
- A. A Pentagon and an Octagon
- B. An Octagon and a Triangle
- C. A Square and a Rectangle
- D. A Square and a Pentagon

3)



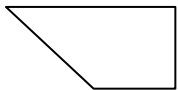
- A. A Square and a Pentagon
- B. A Quadrilateral and a Triangle
- C. A Square and a Rectangle
- D. A Triangle and a Heptagon

4)



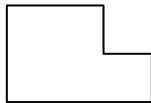
- A. A Square and a Quadrilateral
- B. A Hexagon and an Octagon
- C. A Square and a Heptagon
- D. A Triangle and a Triangle

5)



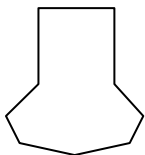
- A. A Rectangle and a Triangle
- B. A Pentagon and an Octagon
- C. A Pentagon and a Heptagon
- D. A Hexagon and an Octagon

6)



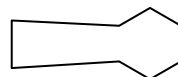
- A. A Quadrilateral and a Pentagon
- B. A Square and a Quadrilateral
- C. A Quadrilateral and a Hexagon
- D. A Rectangle and an Octagon

7)



- A. A Triangle and an Octagon
- B. A Hexagon and a Heptagon
- C. A Heptagon and a Square
- D. A Quadrilateral and a Pentagon

8)



- A. A Square and a Rectangle
- B. A Hexagon and a Quadrilateral
- C. A Square and a Quadrilateral
- D. A Triangle and a Hexagon

Answers

- 1. **C**
- 2. **B**
- 3. **B**
- 4. **D**
- 5. **A**
- 6. **B**
- 7. **C**
- 8. **B**