

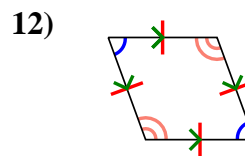
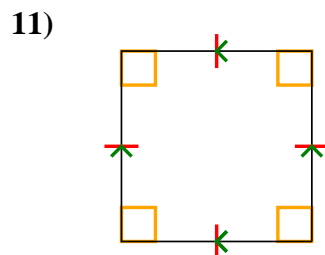
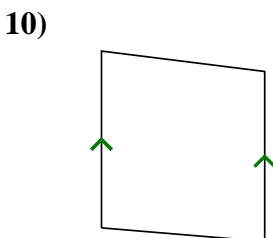
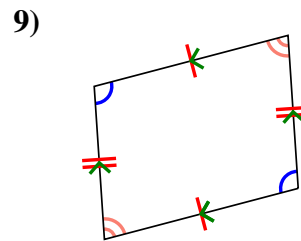
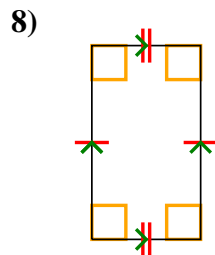
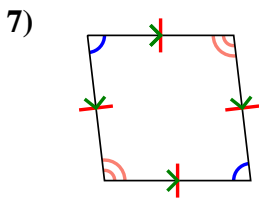
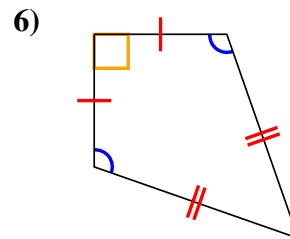
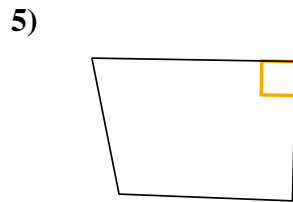
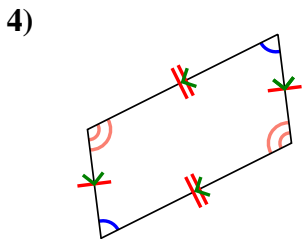
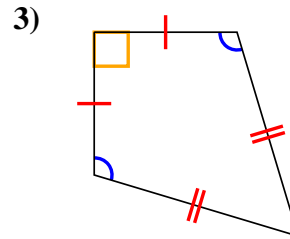
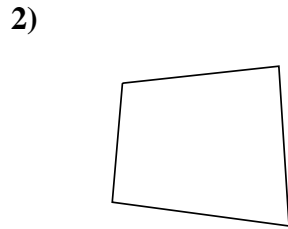
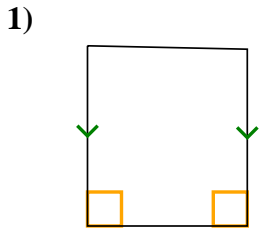


Determine if the shape shown is a Quadrilateral, Kite, Trapezoid, Parallelogram, Rhombus, Rectangle or Square (can be more than one).

Answers

	Sides / Angles	Sides	Angles
Q. Quadrilateral	4 / 4	Sides can be any length.	Angles can be any degree.
K. Kite	4 / 4	Has two pairs of adjacent sides. Each pairs sides are equal length.	One pair of opposite angles that are equal in degree.
T. Trapezoid	4 / 4	Sides can be any length. Has only 1 pair of parallel sides.	Angles can be any degree.
P. Parallelogram	4 / 4	Opposite sides are equal length. Opposite sides are parallel.	Opposite angles are the same.
H. Rhombus	4 / 4	All sides are equal length. Opposite sides are parallel.	Opposite angles are the same.
R. Rectangle	4 / 4	Opposite sides are equal length. Opposite sides are parallel.	All angles are 90°.
S. Square	4 / 4	All sides are equal length. Opposite sides are parallel.	All angles are 90°.

1. \_\_\_\_\_
2. \_\_\_\_\_
3. \_\_\_\_\_
4. \_\_\_\_\_
5. \_\_\_\_\_
6. \_\_\_\_\_
7. \_\_\_\_\_
8. \_\_\_\_\_
9. \_\_\_\_\_
10. \_\_\_\_\_
11. \_\_\_\_\_
12. \_\_\_\_\_





Determine if the shape shown is a Quadrilateral, Kite, Trapezoid, Parallelogram, Rhombus, Rectangle or Square (can be more than one).

Answers

	Sides / Angles	Sides	Angles
Q. Quadrilateral	4 / 4	Sides can be any length.	Angles can be any degree.
K. Kite	4 / 4	Has two pairs of adjacent sides. Each pairs sides are equal length.	One pair of opposite angles that are equal in degree.
T. Trapezoid	4 / 4	Sides can be any length. Has only 1 pair of parallel sides.	Angles can be any degree.
P. Parallelogram	4 / 4	Opposite sides are equal length. Opposite sides are parallel.	Opposite angles are the same.
H. Rhombus	4 / 4	All sides are equal length. Opposite sides are parallel.	Opposite angles are the same.
R. Rectangle	4 / 4	Opposite sides are equal length. Opposite sides are parallel.	All angles are 90°.
S. Square	4 / 4	All sides are equal length. Opposite sides are parallel.	All angles are 90°.

1. Q,T
2. Q
3. Q,K
4. Q,P
5. Q
6. Q,K
7. Q,P,H
8. Q,P,R
9. Q,P
10. Q,T
11. Q,P,H,R,S
12. Q,P,H

