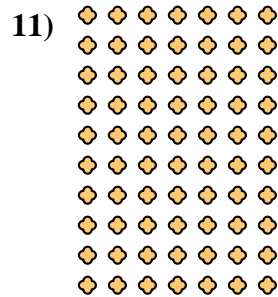










Write each array as a multiplication problem and solve.



Answers

Ex. $8 \cdot 3 = 24$

1. _____

2. _____

3. _____

4. _____

5. _____

6. _____

7. _____

8. _____



9. _____

10. _____

11. _____



Write each array as a multiplication problem and solve.



Answers

Ex. 8 • 3 = 24

1. 2 • 9 = 18

2. 8 • 2 = 16

3. 7 • 10 = 70

4. 9 • 9 = 81

5. 5 • 7 = 35

6. 4 • 3 = 12

7. 5 • 9 = 45

8. 10 • 5 = 50

9. 2 • 8 = 16

10. 9 • 6 = 54

11. 10 • 7 = 70

