



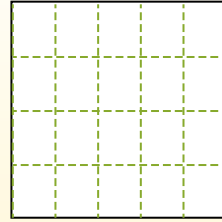
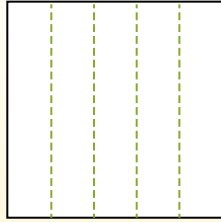

Partition the shape as described and then count to find the number of boxes.

Rows go left to right.

Columns go up and down.

This has 4 rows and 5 columns.


There are 20 boxes total.




Answers

- 1. _____
- 2. _____
- 3. _____
- 4. _____
- 5. _____
- 6. _____
- 7. _____
- 8. _____
- 9. _____


1) 2 rows
4 columns




2) 5 rows
5 columns




3) 3 rows
2 columns



4) 4 rows
4 columns




5) 4 rows
3 columns




6) 5 rows
3 columns



7) 2 rows
5 columns



8) 5 rows
2 columns



9) 2 rows
2 columns





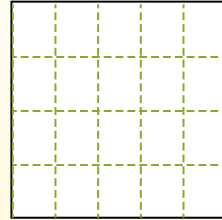
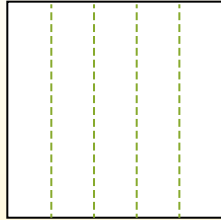
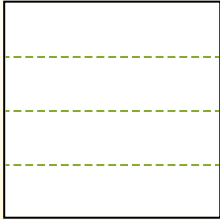
Partition the shape as described and then count to find the number of boxes.

Rows go left to right.

Columns go up and down.

This has 4 rows and 5 columns.

There are 20 boxes total.



Answers

1. 8

2. 25

3. 6

4. 16

5. 12

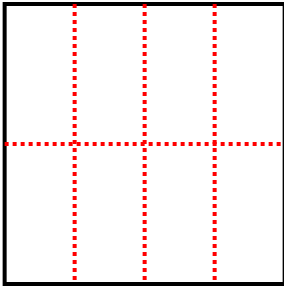
6. 15

7. 10

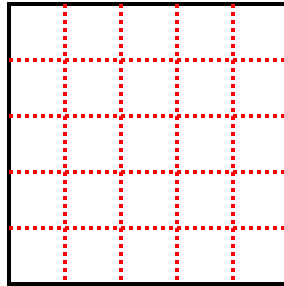
8. 10

9. 4

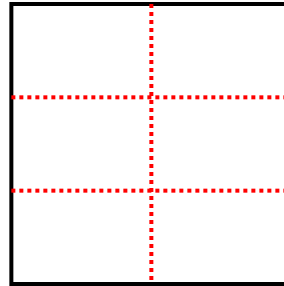
1) 2 rows
4 columns



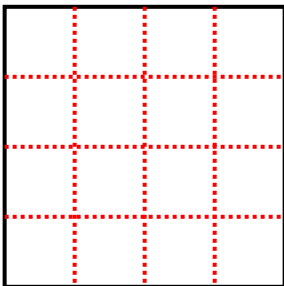
2) 5 rows
5 columns



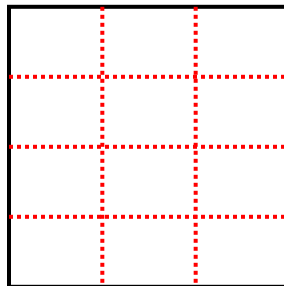
3) 3 rows
2 columns



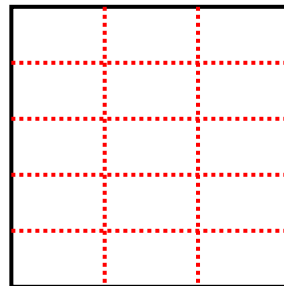
4) 4 rows
4 columns



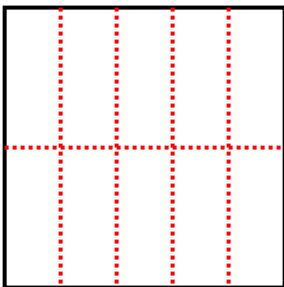
5) 4 rows
3 columns



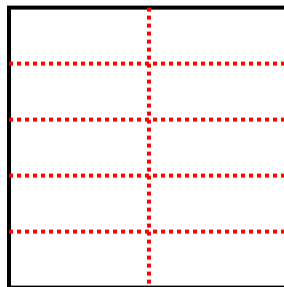
6) 5 rows
3 columns



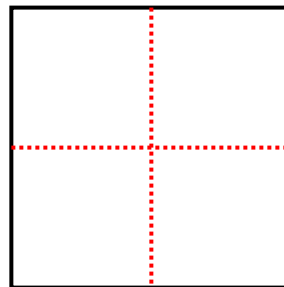
7) 2 rows
5 columns



8) 5 rows
2 columns



9) 2 rows
2 columns





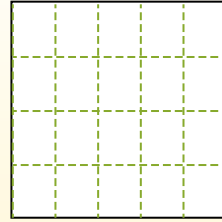
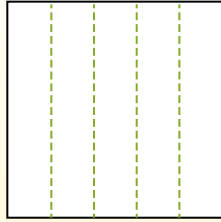

Partition the shape as described and then count to find the number of boxes.

Rows go left to right.

Columns go up and down.

This has 4 rows and 5 columns.


There are 20 boxes total.




Answers

- 1. _____
- 2. _____
- 3. _____
- 4. _____
- 5. _____
- 6. _____
- 7. _____
- 8. _____
- 9. _____


1) 5 rows
2 columns




2) 5 rows
5 columns




3) 2 rows
4 columns




4) 3 rows
4 columns




5) 4 rows
2 columns




6) 2 rows
2 columns



7) 3 rows
3 columns



8) 2 rows
3 columns



9) 4 rows
3 columns





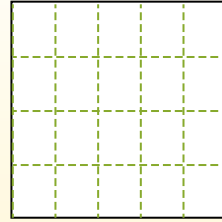
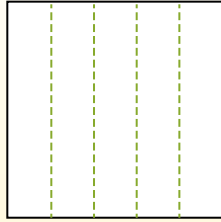

Partition the shape as described and then count to find the number of boxes.

Rows go left to right.

Columns go up and down.

This has 4 rows and 5 columns.

There are 20 boxes total.



Answers

1. 10

2. 25

3. 8

4. 12

5. 8

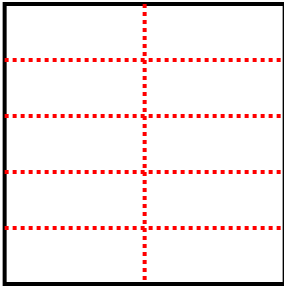
6. 4

7. 9

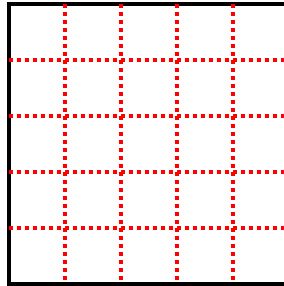
8. 6

9. 12

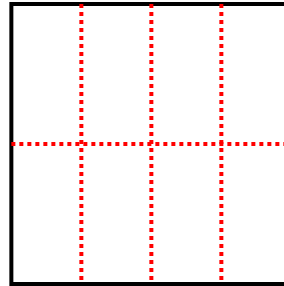
1) 5 rows
2 columns



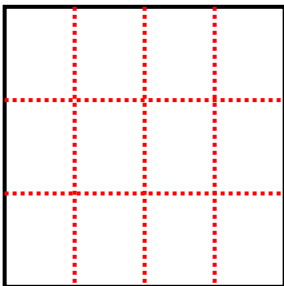
2) 5 rows
5 columns



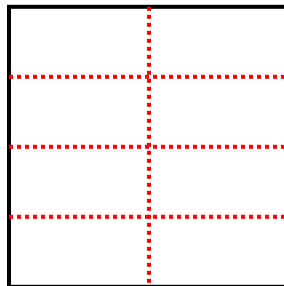
3) 2 rows
4 columns



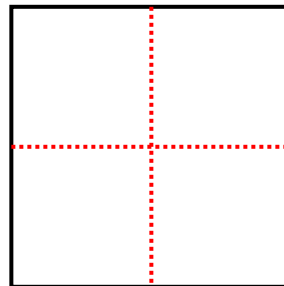
4) 3 rows
4 columns



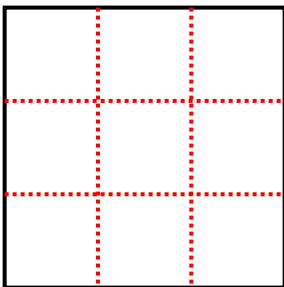
5) 4 rows
2 columns



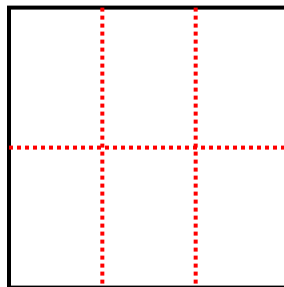
6) 2 rows
2 columns



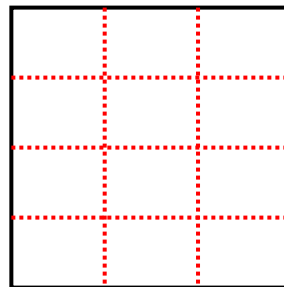
7) 3 rows
3 columns



8) 2 rows
3 columns



9) 4 rows
3 columns





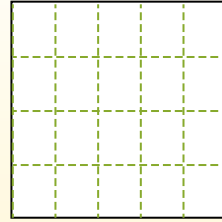
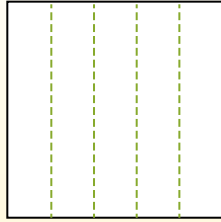

Partition the shape as described and then count to find the number of boxes.

Rows go left to right.


Columns go up and down.

This has 4 rows and 5 columns.


There are 20 boxes total.




1) 2 rows
2 columns




2) 5 rows
4 columns



3) 3 rows
4 columns



4) 4 rows
4 columns




5) 5 rows
2 columns




6) 4 rows
2 columns




7) 2 rows
4 columns



8) 5 rows
3 columns



9) 4 rows
3 columns



Answers

1. _____
2. _____
3. _____
4. _____
5. _____
6. _____
7. _____
8. _____
9. _____



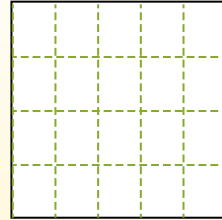
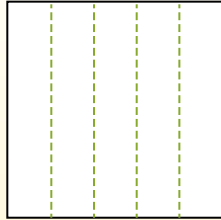
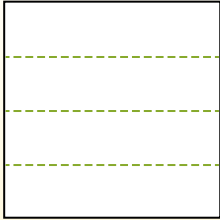
Partition the shape as described and then count to find the number of boxes.

Rows go left to right.

Columns go up and down.

This has 4 rows and 5 columns.

There are 20 boxes total.



Answers

1. 4

2. 20

3. 12

4. 16

5. 10

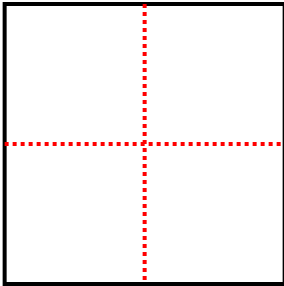
6. 8

7. 8

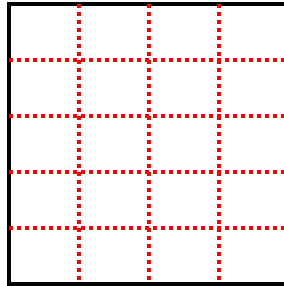
8. 15

9. 12

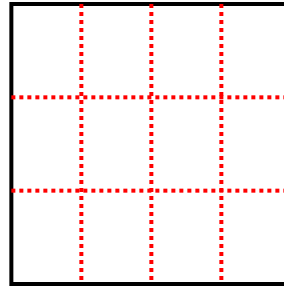
1) 2 rows
2 columns



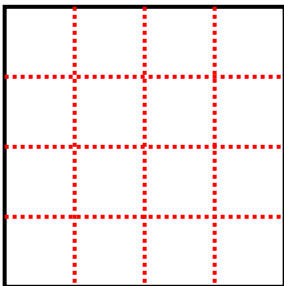
2) 5 rows
4 columns



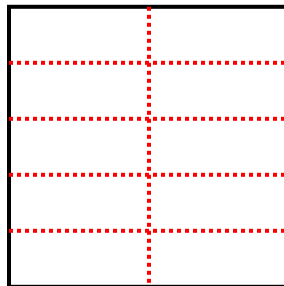
3) 3 rows
4 columns



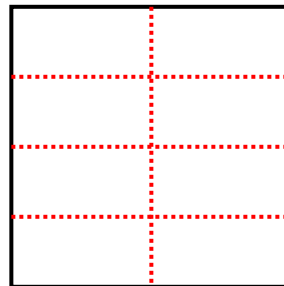
4) 4 rows
4 columns



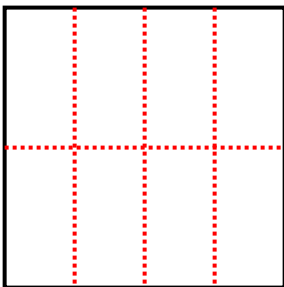
5) 5 rows
2 columns



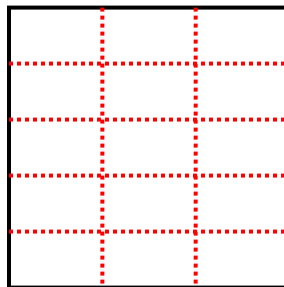
6) 4 rows
2 columns



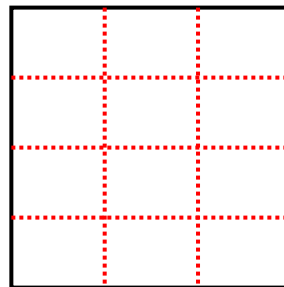
7) 2 rows
4 columns



8) 5 rows
3 columns



9) 4 rows
3 columns





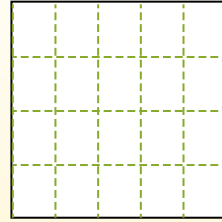
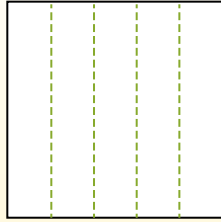

Partition the shape as described and then count to find the number of boxes.

Rows go left to right.

Columns go up and down.

This has 4 rows and 5 columns.


There are 20 boxes total.




Answers

- 1. _____
- 2. _____
- 3. _____
- 4. _____
- 5. _____
- 6. _____
- 7. _____
- 8. _____
- 9. _____


1) 4 rows
3 columns




2) 5 rows
5 columns




3) 5 rows
2 columns



4) 5 rows
4 columns




5) 3 rows
3 columns




6) 3 rows
5 columns



7) 3 rows
2 columns



8) 3 rows
4 columns



9) 5 rows
3 columns





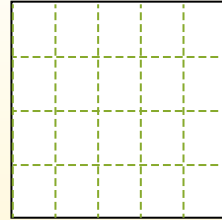
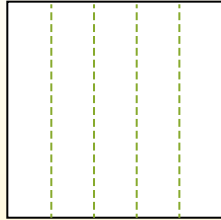
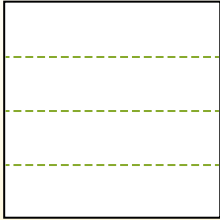
Partition the shape as described and then count to find the number of boxes.

Rows go left to right.

Columns go up and down.

This has 4 rows and 5 columns.

There are 20 boxes total.



Answers

1. 12

2. 25

3. 10

4. 20

5. 9

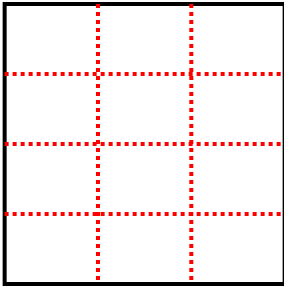
6. 15

7. 6

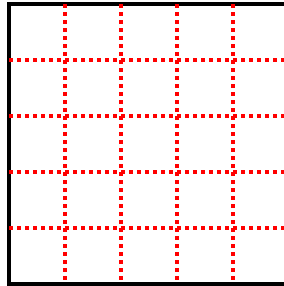
8. 12

9. 15

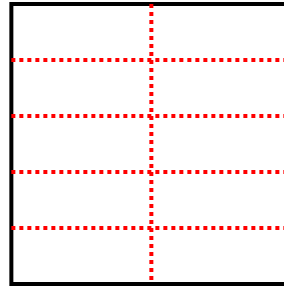
1) 4 rows
3 columns



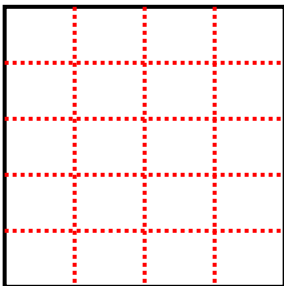
2) 5 rows
5 columns



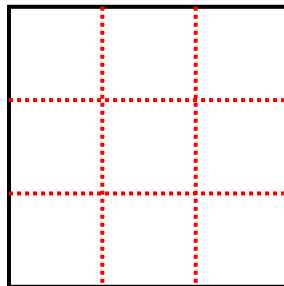
3) 5 rows
2 columns



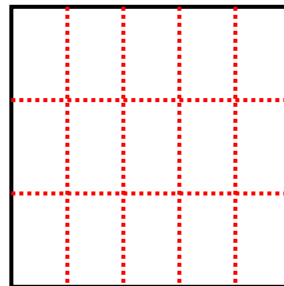
4) 5 rows
4 columns



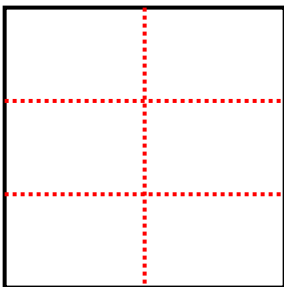
5) 3 rows
3 columns



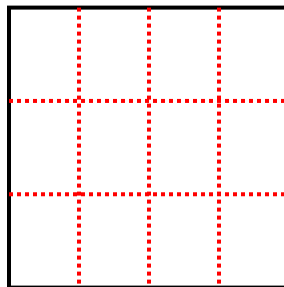
6) 3 rows
5 columns



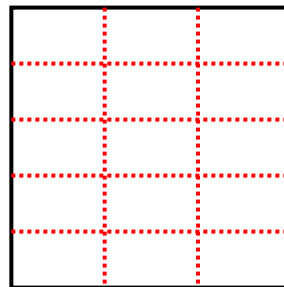
7) 3 rows
2 columns



8) 3 rows
4 columns



9) 5 rows
3 columns





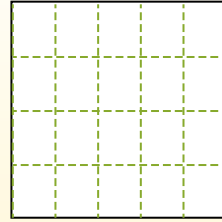
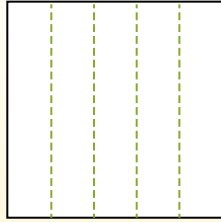

Partition the shape as described and then count to find the number of boxes.

Rows go left to right.

Columns go up and down.

This has 4 rows and 5 columns.


There are 20 boxes total.




Answers

- 1. _____
- 2. _____
- 3. _____
- 4. _____
- 5. _____
- 6. _____
- 7. _____
- 8. _____
- 9. _____


1) 3 rows
4 columns




2) 3 rows
2 columns




3) 4 rows
4 columns



4) 5 rows
3 columns




5) 5 rows
5 columns




6) 4 rows
2 columns



7) 5 rows
4 columns



8) 3 rows
3 columns



9) 2 rows
3 columns





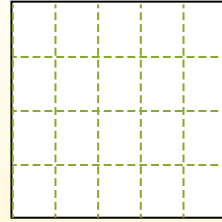
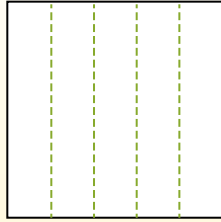

Partition the shape as described and then count to find the number of boxes.

Rows go left to right.

Columns go up and down.

This has 4 rows and 5 columns.

There are 20 boxes total.



Answers

1. 12

2. 6

3. 16

4. 15

5. 25

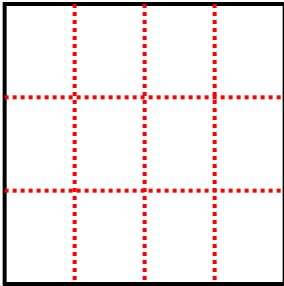
6. 8

7. 20

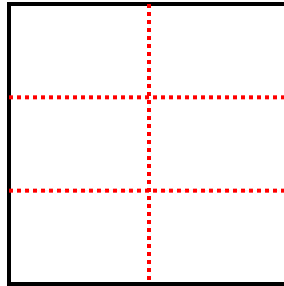
8. 9

9. 6

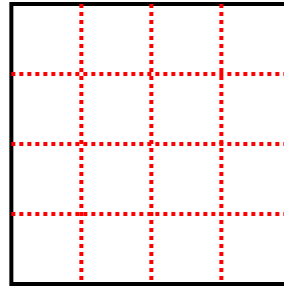
1) 3 rows
4 columns



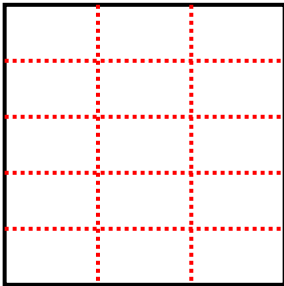
2) 3 rows
2 columns



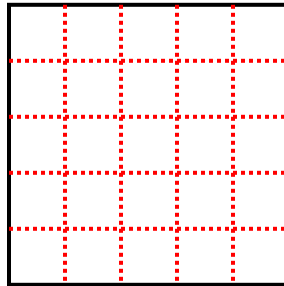
3) 4 rows
4 columns



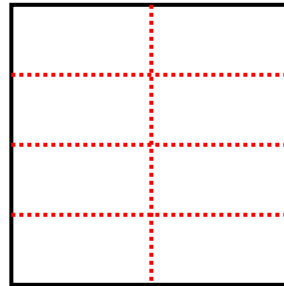
4) 5 rows
3 columns




5) 5 rows
5 columns



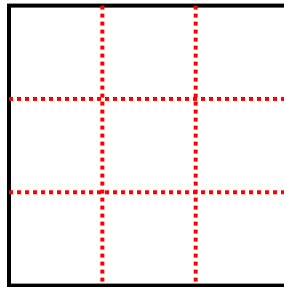
6) 4 rows
2 columns



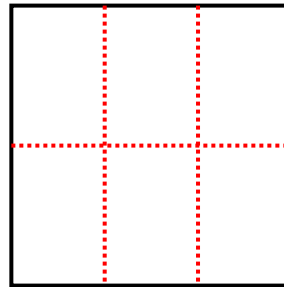
7) 5 rows
4 columns



8) 3 rows
3 columns



9) 2 rows
3 columns





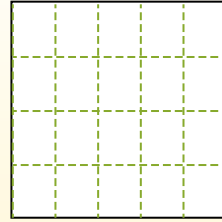
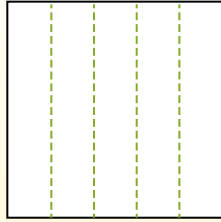

Partition the shape as described and then count to find the number of boxes.

Rows go left to right.


Columns go up and down.

This has 4 rows and 5 columns.


There are 20 boxes total.




1) 2 rows
2 columns




2) 4 rows
4 columns




3) 5 rows
3 columns



4) 3 rows
3 columns




5) 3 rows
5 columns




6) 2 rows
5 columns



7) 5 rows
4 columns



8) 5 rows
5 columns



9) 5 rows
2 columns



Answers

1. _____
2. _____
3. _____
4. _____
5. _____
6. _____
7. _____
8. _____
9. _____



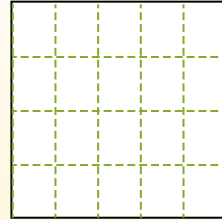
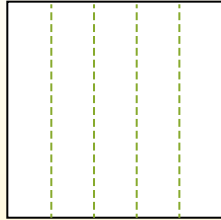
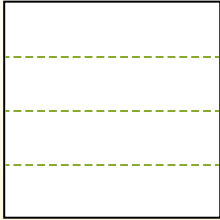
Partition the shape as described and then count to find the number of boxes.

Rows go left to right.

Columns go up and down.

This has 4 rows and 5 columns.

There are 20 boxes total.



Answers

1. 4

2. 16

3. 15

4. 9

5. 15

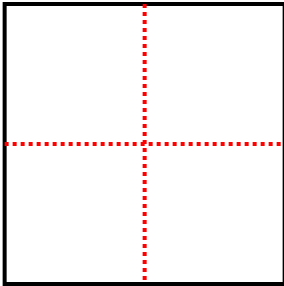
6. 10

7. 20

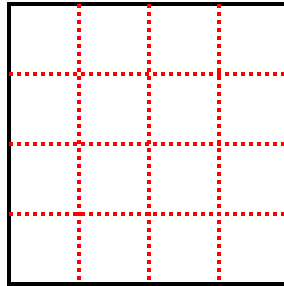
8. 25

9. 10

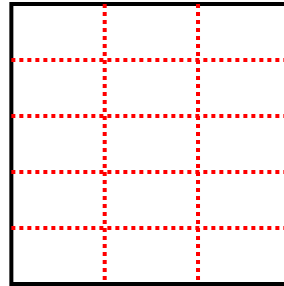
1) 2 rows
2 columns



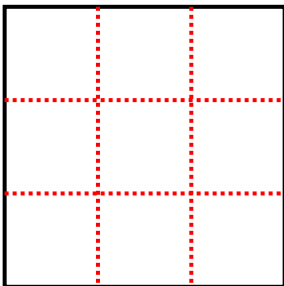
2) 4 rows
4 columns



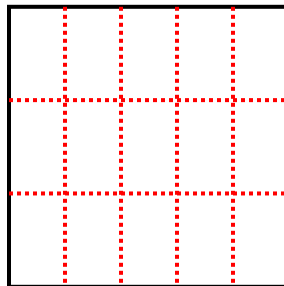
3) 5 rows
3 columns



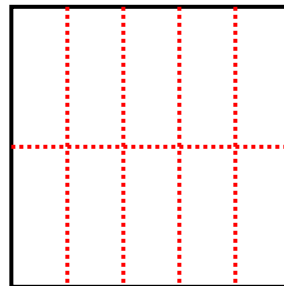
4) 3 rows
3 columns



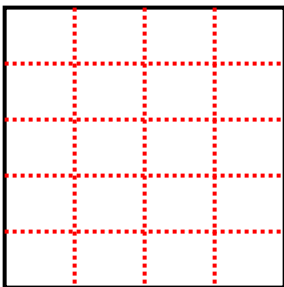
5) 3 rows
5 columns



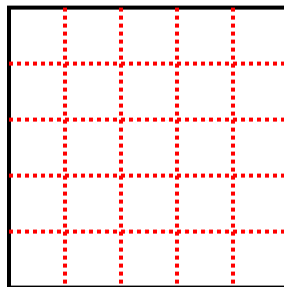
6) 2 rows
5 columns



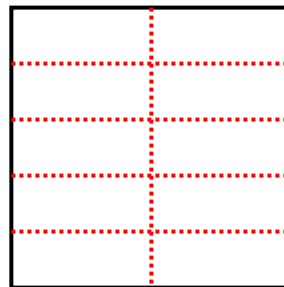
7) 5 rows
4 columns



8) 5 rows
5 columns



9) 5 rows
2 columns





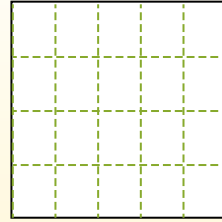
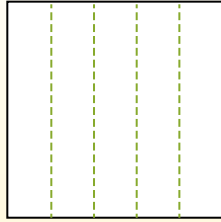

Partition the shape as described and then count to find the number of boxes.

Rows go left to right.

Columns go up and down.

This has 4 rows and 5 columns.


There are 20 boxes total.




Answers

- 1. _____
- 2. _____
- 3. _____
- 4. _____
- 5. _____
- 6. _____
- 7. _____
- 8. _____
- 9. _____


1) 3 rows
5 columns




2) 2 rows
3 columns




3) 3 rows
2 columns




4) 2 rows
4 columns




5) 2 rows
5 columns



6) 4 rows
2 columns




7) 3 rows
4 columns



8) 2 rows
2 columns



9) 5 rows
4 columns





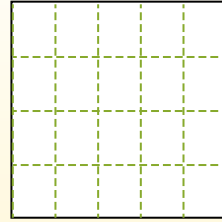
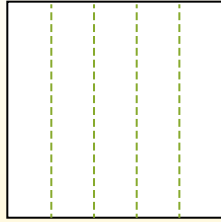

Partition the shape as described and then count to find the number of boxes.

Rows go left to right.

Columns go up and down.

This has 4 rows and 5 columns.

There are 20 boxes total.



Answers

1. 15

2. 6

3. 6

4. 8

5. 10

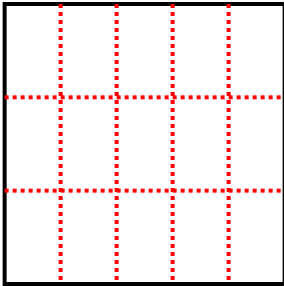
6. 8

7. 12

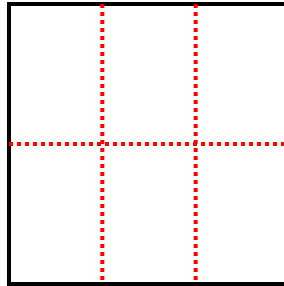
8. 4

9. 20

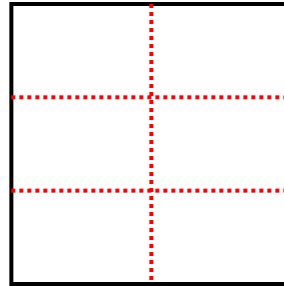
1) 3 rows
5 columns



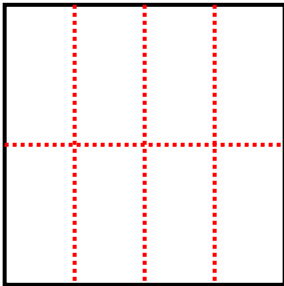
2) 2 rows
3 columns



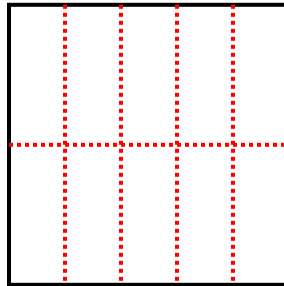
3) 3 rows
2 columns



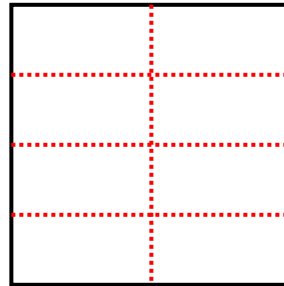
4) 2 rows
4 columns



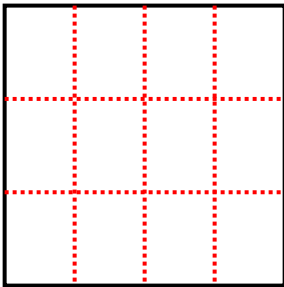
5) 2 rows
5 columns



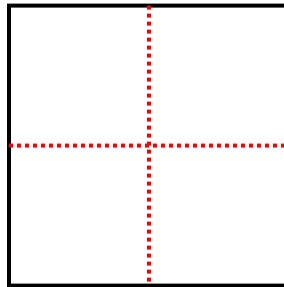
6) 4 rows
2 columns



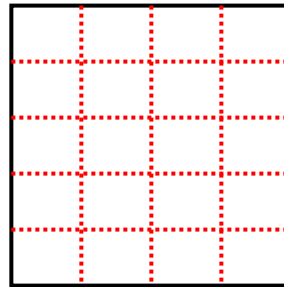
7) 3 rows
4 columns



8) 2 rows
2 columns



9) 5 rows
4 columns





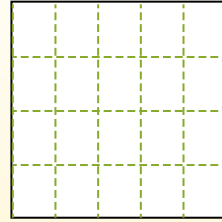
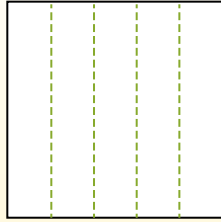

Partition the shape as described and then count to find the number of boxes.

Rows go left to right.

Columns go up and down.

This has 4 rows and 5 columns.


There are 20 boxes total.




Answers

- 1. _____
- 2. _____
- 3. _____
- 4. _____
- 5. _____
- 6. _____
- 7. _____
- 8. _____
- 9. _____


1) 4 rows
4 columns




2) 2 rows
5 columns




3) 5 rows
2 columns



4) 3 rows
3 columns




5) 2 rows
3 columns




6) 3 rows
4 columns



7) 2 rows
2 columns



8) 5 rows
5 columns



9) 4 rows
3 columns





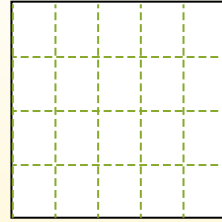
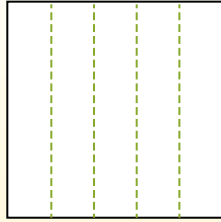

Partition the shape as described and then count to find the number of boxes.

Rows go left to right.

Columns go up and down.

This has 4 rows and 5 columns.

There are 20 boxes total.



Answers

1. 16

2. 10

3. 10

4. 9

5. 6

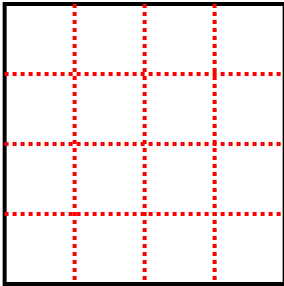
6. 12

7. 4

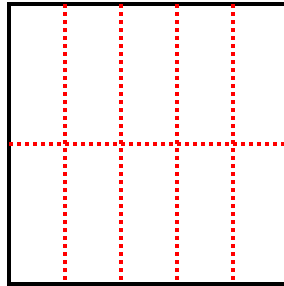
8. 25

9. 12

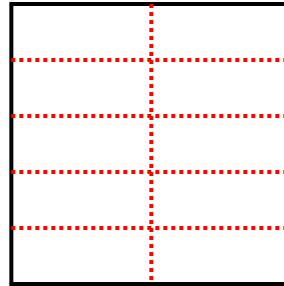
1) 4 rows
4 columns



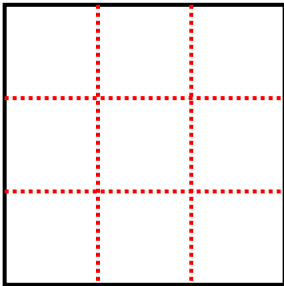
2) 2 rows
5 columns



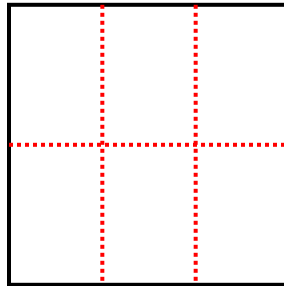
3) 5 rows
2 columns



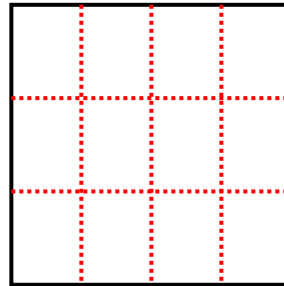
4) 3 rows
3 columns



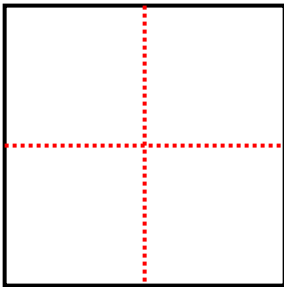
5) 2 rows
3 columns



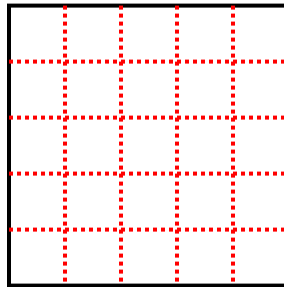
6) 3 rows
4 columns



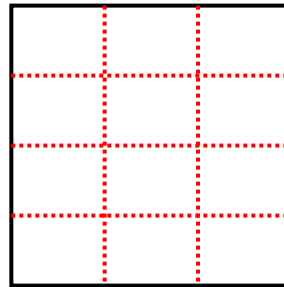
7) 2 rows
2 columns



8) 5 rows
5 columns



9) 4 rows
3 columns





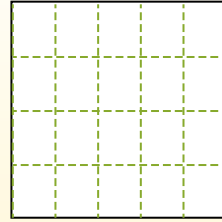
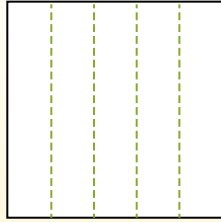

Partition the shape as described and then count to find the number of boxes.

Rows go left to right.


Columns go up and down.

This has 4 rows and 5 columns.


There are 20 boxes total.




1) 2 rows
3 columns




2) 2 rows
5 columns




3) 5 rows
2 columns




4) 3 rows
5 columns




5) 5 rows
4 columns




6) 5 rows
5 columns



7) 3 rows
3 columns



8) 4 rows
4 columns



9) 5 rows
3 columns



Answers

- 1. _____
- 2. _____
- 3. _____
- 4. _____
- 5. _____
- 6. _____
- 7. _____
- 8. _____
- 9. _____



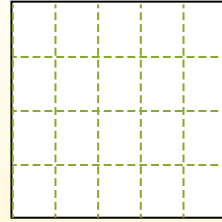
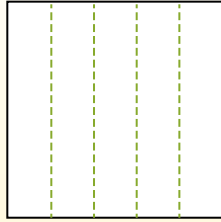

Partition the shape as described and then count to find the number of boxes.

Rows go left to right.

Columns go up and down.

This has 4 rows and 5 columns.

There are 20 boxes total.



Answers

1. 6

2. 10

3. 10

4. 15

5. 20

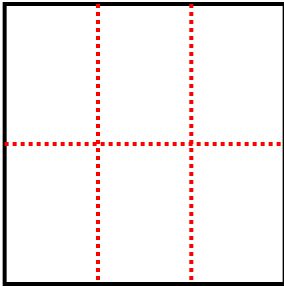
6. 25

7. 9

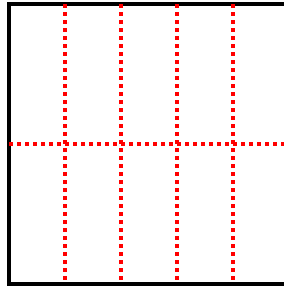
8. 16

9. 15

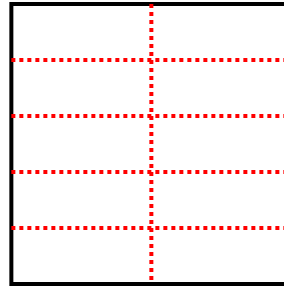
1) 2 rows
3 columns



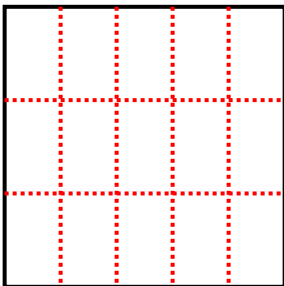
2) 2 rows
5 columns



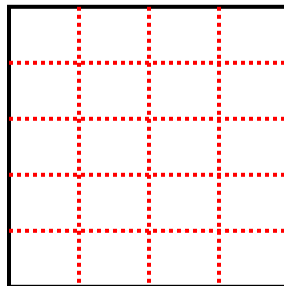
3) 5 rows
2 columns



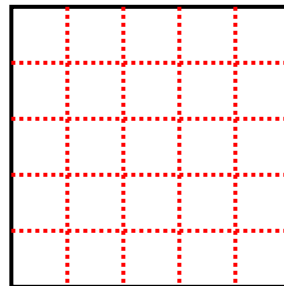
4) 3 rows
5 columns



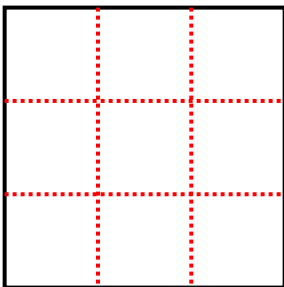
5) 5 rows
4 columns



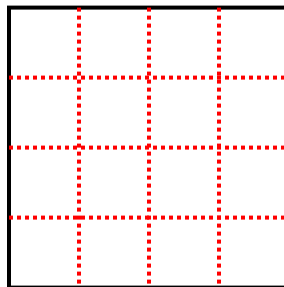
6) 5 rows
5 columns



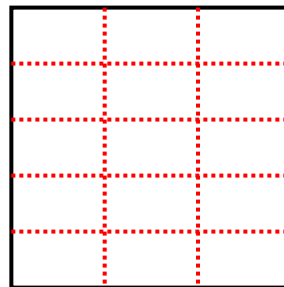
7) 3 rows
3 columns



8) 4 rows
4 columns



9) 5 rows
3 columns





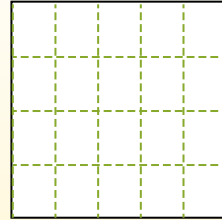
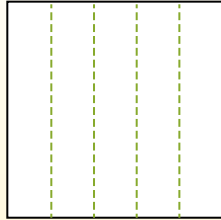
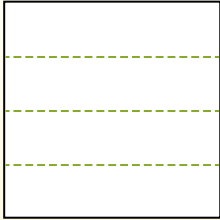
Partition the shape as described and then count to find the number of boxes.

Rows go left to right.

Columns go up and down.

This has 4 rows and 5 columns.


There are 20 boxes total.




Answers

- 1. _____
- 2. _____
- 3. _____
- 4. _____
- 5. _____
- 6. _____
- 7. _____
- 8. _____
- 9. _____


1) 5 rows
5 columns




2) 2 rows
4 columns




3) 3 rows
3 columns




4) 5 rows
3 columns




5) 2 rows
5 columns




6) 2 rows
2 columns



7) 4 rows
3 columns



8) 3 rows
4 columns



9) 5 rows
4 columns



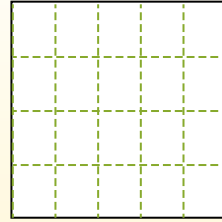
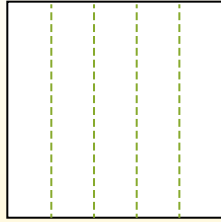



Partition the shape as described and then count to find the number of boxes.

Rows go left to right.

Columns go up and down.

This has 4 rows and 5 columns.
There are 20 boxes total.



Answers

1. 25

2. 8

3. 9

4. 15

5. 10

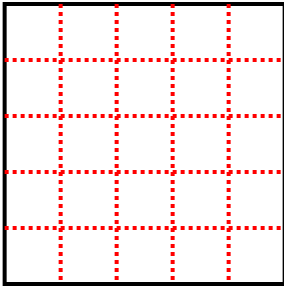
6. 4

7. 12

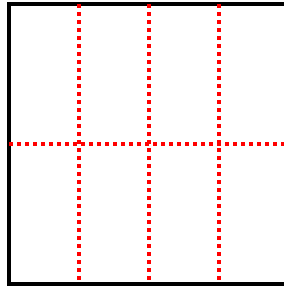
8. 12

9. 20

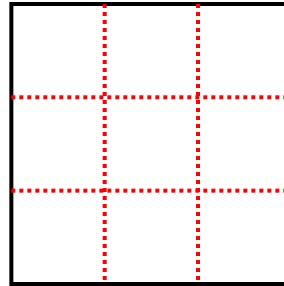
1) 5 rows
5 columns



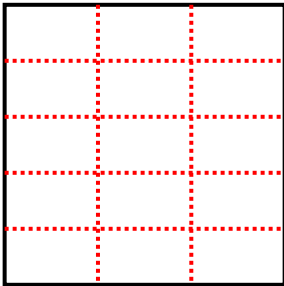
2) 2 rows
4 columns



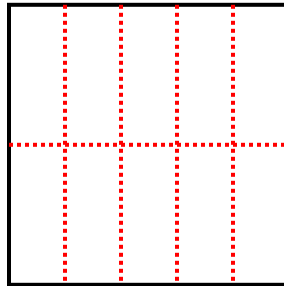
3) 3 rows
3 columns



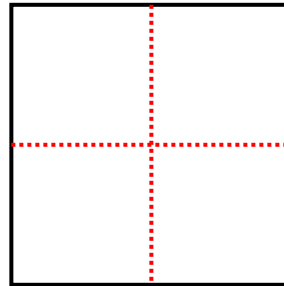
4) 5 rows
3 columns



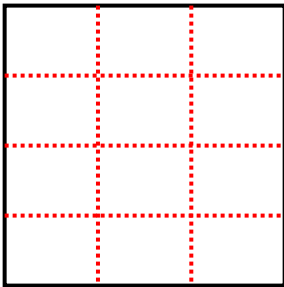
5) 2 rows
5 columns



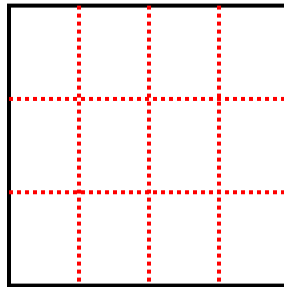
6) 2 rows
2 columns



7) 4 rows
3 columns



8) 3 rows
4 columns



9) 5 rows
4 columns

