





Use the array provided to solve each problem.

1) $40 \times 21 =$




2) $30 \times 24 =$




3) $20 \times 21 =$




4) $22 \times 20 =$



5) $20 \times 28 =$



6) $20 \times 22 =$



Answers

1. _____

2. _____

3. _____

4. _____

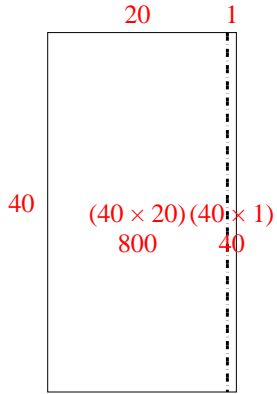
5. _____

6. _____

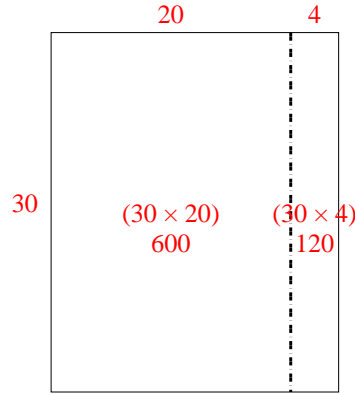


Use the array provided to solve each problem.

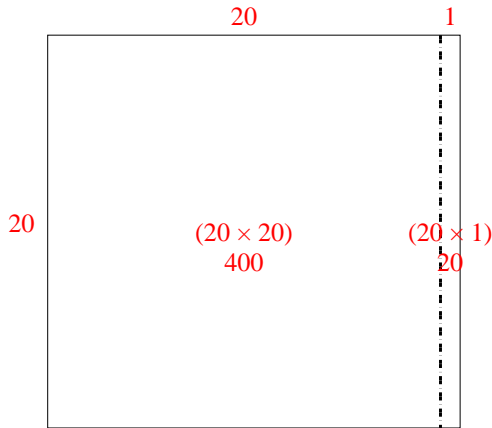
1) $40 \times 21 =$



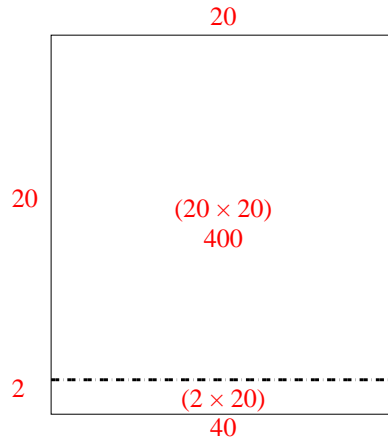
2) $30 \times 24 =$



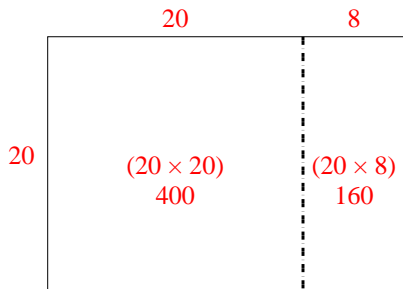
3) $20 \times 21 =$



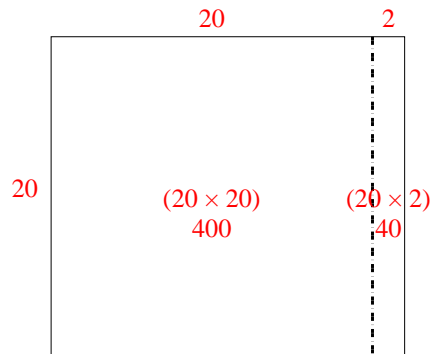
4) $22 \times 20 =$



5) $20 \times 28 =$



6) $20 \times 22 =$



Answers

1. 840
2. 720
3. 420
4. 440
5. 560
6. 440