




Use the array provided to solve each problem.


1) $32 \times 30 =$




2) $20 \times 38 =$




3) $35 \times 20 =$




4) $27 \times 30 =$



5) $20 \times 26 =$



6) $20 \times 28 =$



Answers

1. _____

2. _____

3. _____

4. _____

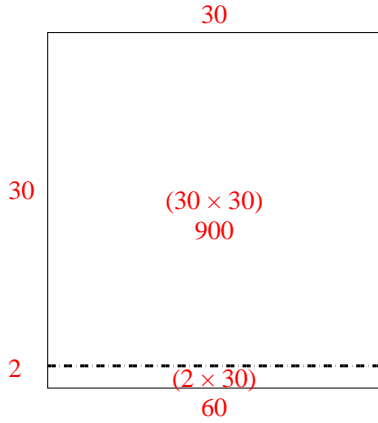
5. _____

6. _____

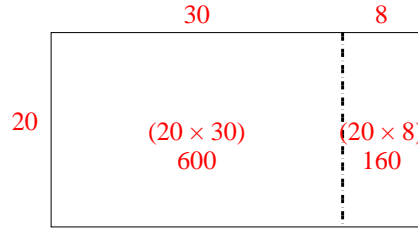


Use the array provided to solve each problem.

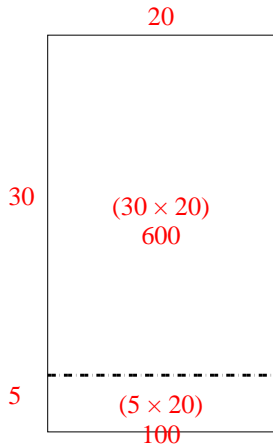
1) $32 \times 30 =$



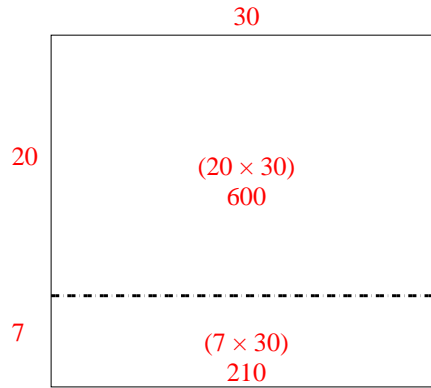
2) $20 \times 38 =$



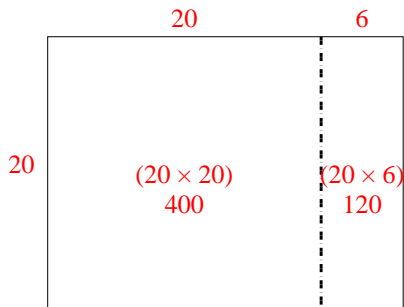
3) $35 \times 20 =$



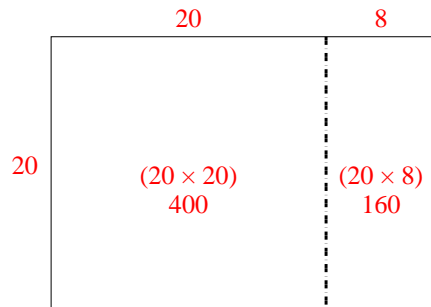
4) $27 \times 30 =$



5) $20 \times 26 =$



6) $20 \times 28 =$



Answers

1. 960
2. 760
3. 700
4. 810
5. 520
6. 560