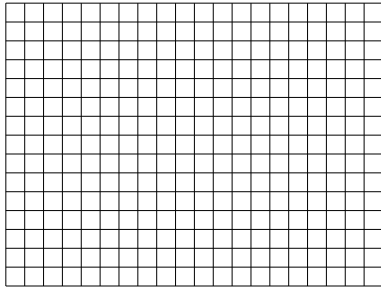


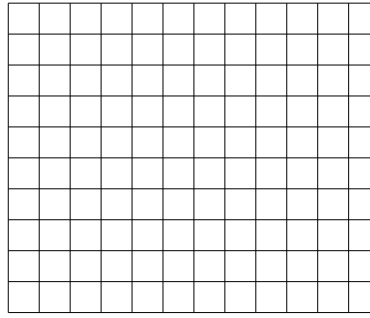


Use the array provided to solve each problem.

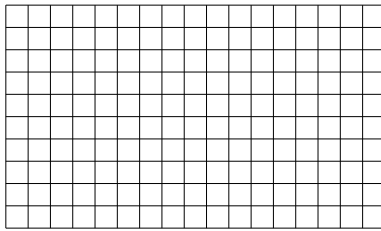
1) $15 \times 20 =$



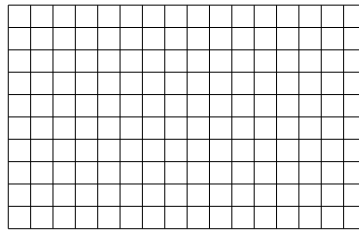
2) $10 \times 12 =$




3) $10 \times 17 =$




4) $10 \times 16 =$



5) $12 \times 10 =$



6) $10 \times 18 =$



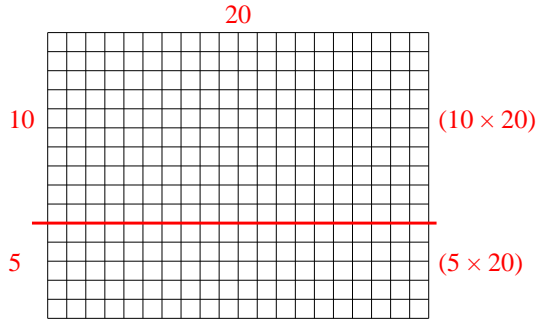
Answers

- 1. _____
- 2. _____
- 3. _____
- 4. _____
- 5. _____
- 6. _____

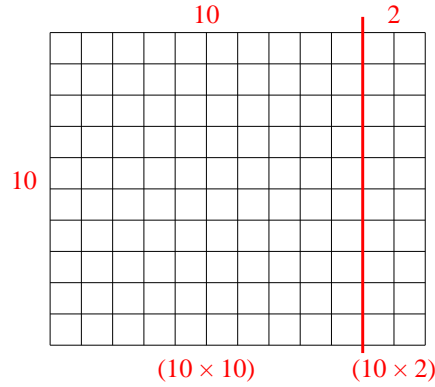


Use the array provided to solve each problem.

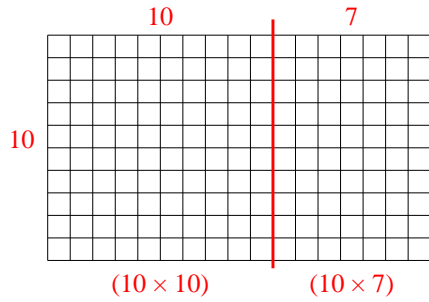
1) $15 \times 20 =$



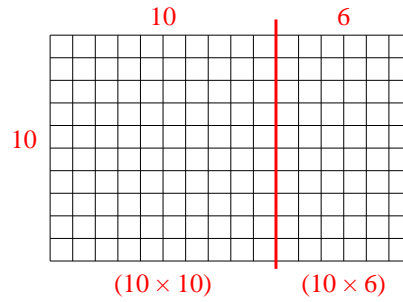
2) $10 \times 12 =$



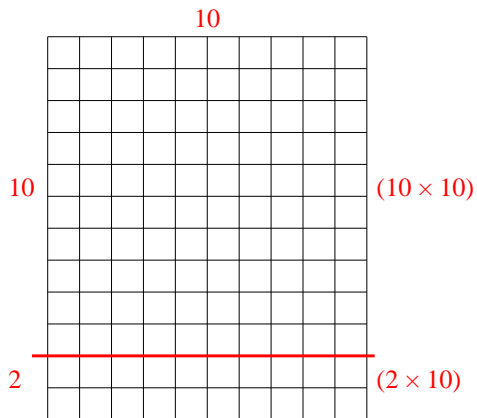
3) $10 \times 17 =$



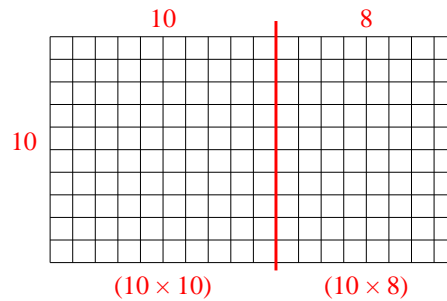
4) $10 \times 16 =$



5) $12 \times 10 =$



6) $10 \times 18 =$



Answers

1. 300
2. 120
3. 170
4. 160
5. 120
6. 180