


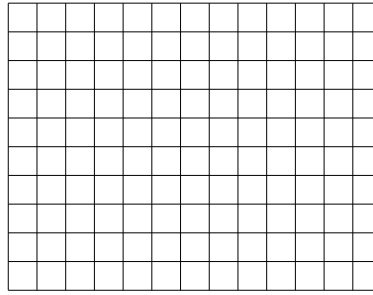


Use the array provided to solve each problem.


1) $10 \times 12 =$




2) $10 \times 13 =$




3) $10 \times 17 =$




4) $10 \times 19 =$



5) $12 \times 10 =$



6) $10 \times 15 =$



Answers

1. _____

2. _____

3. _____

4. _____

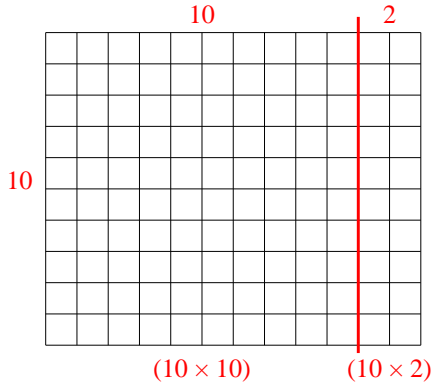
5. _____

6. _____

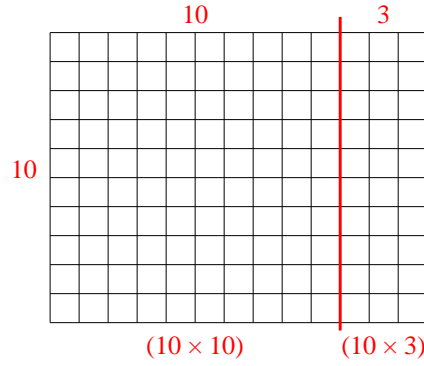


Use the array provided to solve each problem.

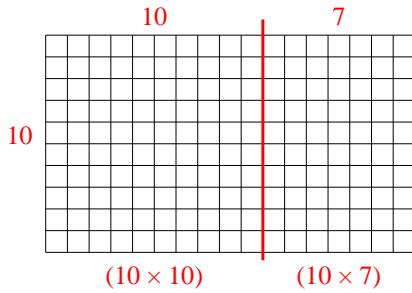
1) $10 \times 12 =$



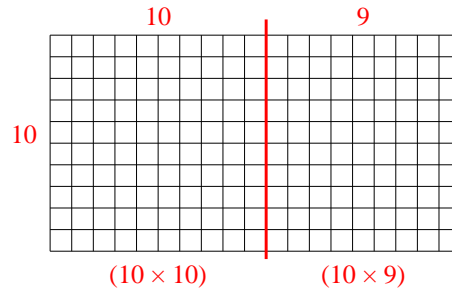
2) $10 \times 13 =$



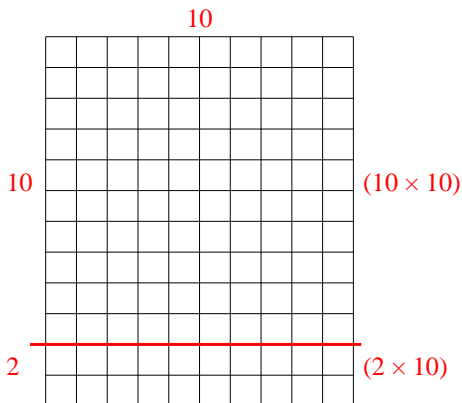
3) $10 \times 17 =$



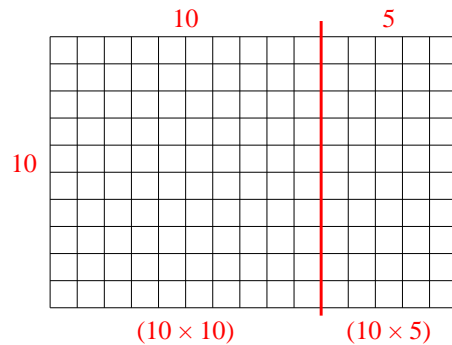
4) $10 \times 19 =$



5) $12 \times 10 =$



6) $10 \times 15 =$



Answers

1. 120
2. 130
3. 170
4. 190
5. 120
6. 150