





Use the array provided to solve each problem.

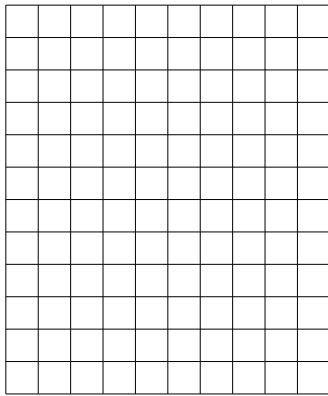
1) $20 \times 28 =$




2) $23 \times 10 =$




3) $12 \times 10 =$




4) $16 \times 10 =$



5) $11 \times 10 =$



6) $17 \times 10 =$



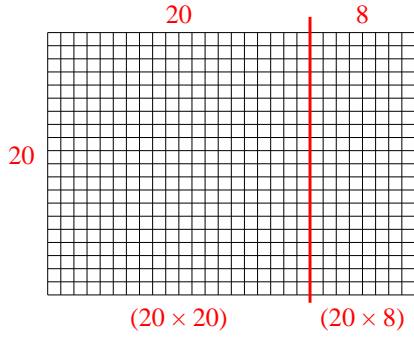
Answers

- 1. _____
- 2. _____
- 3. _____
- 4. _____
- 5. _____
- 6. _____

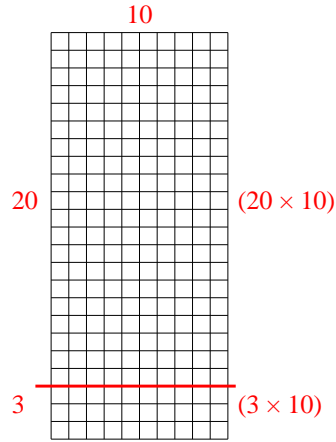


Use the array provided to solve each problem.

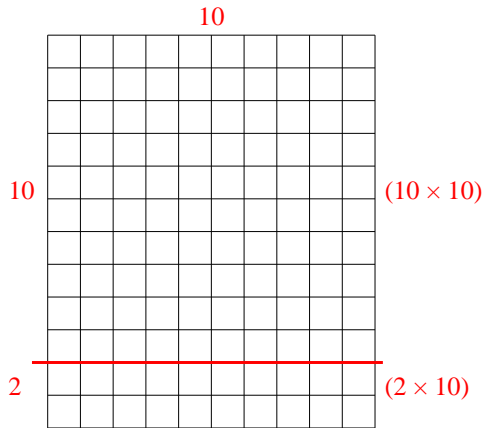
1) $20 \times 28 =$



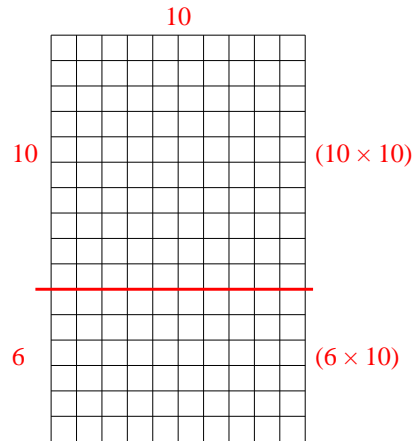
2) $23 \times 10 =$



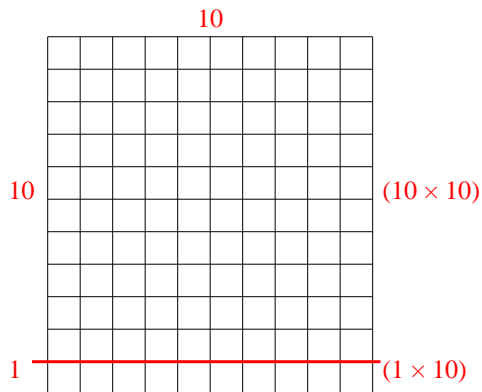
3) $12 \times 10 =$



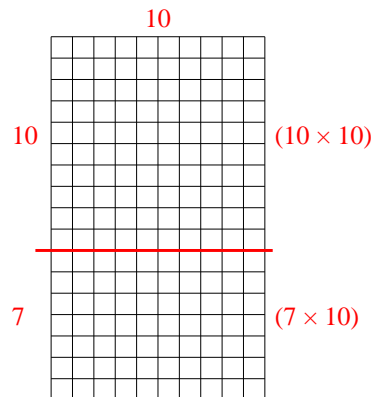
4) $16 \times 10 =$



5) $11 \times 10 =$



6) $17 \times 10 =$



Answers

1. 560
2. 230
3. 120
4. 160
5. 110
6. 170