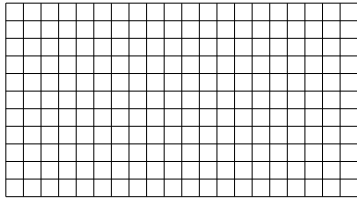





Use the array provided to solve each problem.


1)  $11 \times 20 =$




2)  $17 \times 10 =$




3)  $10 \times 19 =$




4)  $10 \times 12 =$



5)  $14 \times 10 =$



6)  $10 \times 16 =$



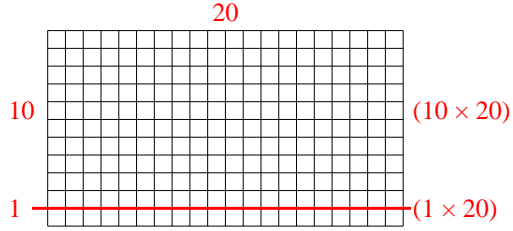
Answers

- 1. \_\_\_\_\_
- 2. \_\_\_\_\_
- 3. \_\_\_\_\_
- 4. \_\_\_\_\_
- 5. \_\_\_\_\_
- 6. \_\_\_\_\_

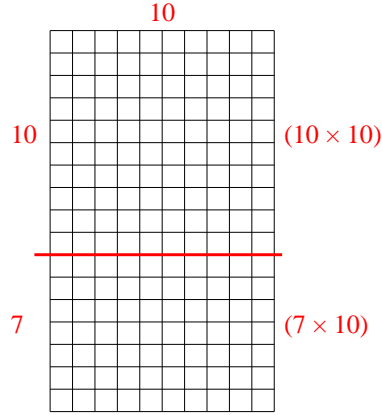


Use the array provided to solve each problem.

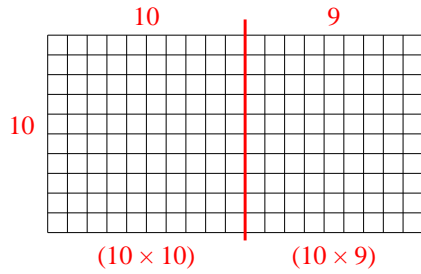
1)  $11 \times 20 =$



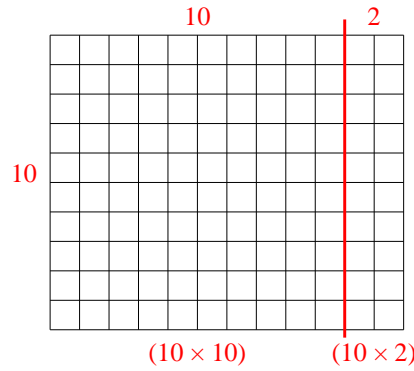
2)  $17 \times 10 =$



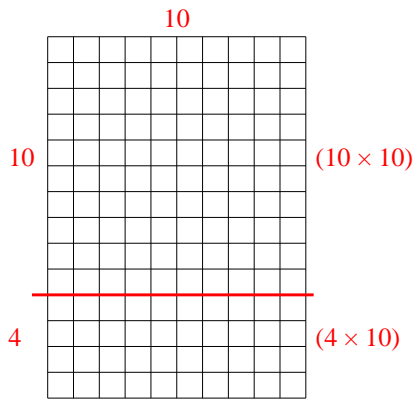
3)  $10 \times 19 =$



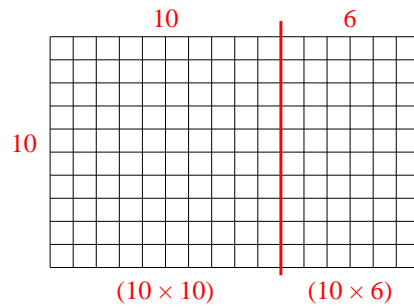
4)  $10 \times 12 =$



5)  $14 \times 10 =$



6)  $10 \times 16 =$



Answers

1. 220
2. 170
3. 190
4. 120
5. 140
6. 160