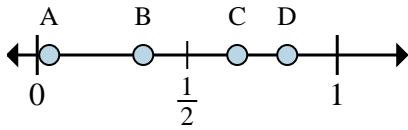
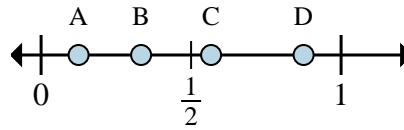
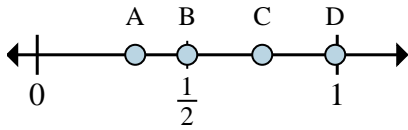


**Determine which letter best shows the location of the fraction.**

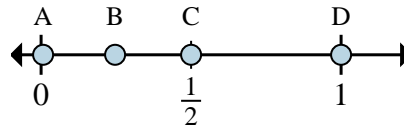
- 1) Which letter best shows  $\frac{4}{6}$ ?  
2) Which letter best shows  $\frac{5}{6}$ ?



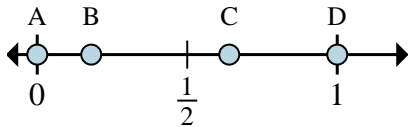
- 3) Which letter best shows  $\frac{7}{8}$ ?  
4) Which letter best shows  $\frac{1}{8}$ ?



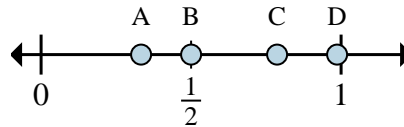
- 5) Which letter best shows  $\frac{3}{4}$ ?  
6) Which letter best shows  $\frac{2}{4}$ ?



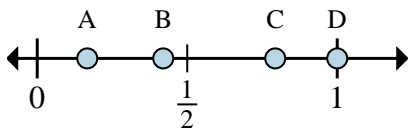
- 7) Which letter best shows  $\frac{2}{2}$ ?  
8) Which letter best shows  $\frac{1}{2}$ ?



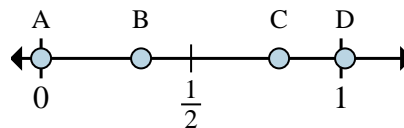
- 9) Which letter best shows  $\frac{0}{4}$ ?  
10) Which letter best shows  $\frac{4}{4}$ ?



- 11) Which letter best shows  $\frac{2}{6}$ ?  
12) Which letter best shows  $\frac{3}{6}$ ?



- 13) Which letter best shows  $\frac{6}{6}$ ?  
14) Which letter best shows  $\frac{1}{6}$ ?



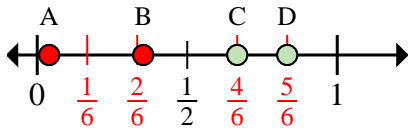
- 15) Which letter best shows  $\frac{0}{3}$ ?  
16) Which letter best shows  $\frac{1}{3}$ ?

**Answers**

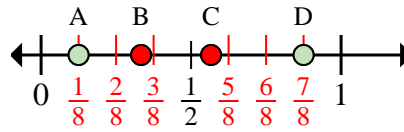
1. \_\_\_\_\_  
2. \_\_\_\_\_  
3. \_\_\_\_\_  
4. \_\_\_\_\_  
5. \_\_\_\_\_  
6. \_\_\_\_\_  
7. \_\_\_\_\_  
8. \_\_\_\_\_  
9. \_\_\_\_\_  
10. \_\_\_\_\_  
11. \_\_\_\_\_  
12. \_\_\_\_\_  
13. \_\_\_\_\_  
14. \_\_\_\_\_  
15. \_\_\_\_\_  
16. \_\_\_\_\_



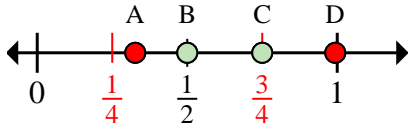
Determine which letter best shows the location of the fraction.



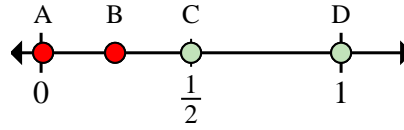
- 1) Which letter best shows  $\frac{4}{6}$ ?  
2) Which letter best shows  $\frac{5}{6}$ ?



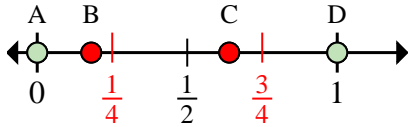
- 3) Which letter best shows  $\frac{7}{8}$ ?  
4) Which letter best shows  $\frac{1}{8}$ ?



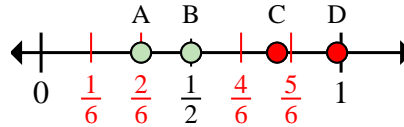
- 5) Which letter best shows  $\frac{3}{4}$ ?  
6) Which letter best shows  $\frac{2}{4}$ ?



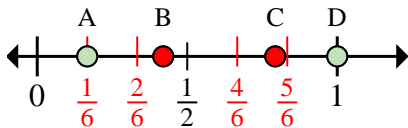
- 7) Which letter best shows  $\frac{2}{2}$ ?  
8) Which letter best shows  $\frac{1}{2}$ ?



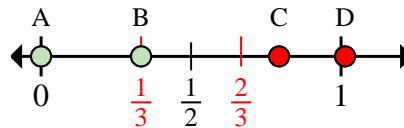
- 9) Which letter best shows  $\frac{0}{4}$ ?  
10) Which letter best shows  $\frac{4}{4}$ ?



- 11) Which letter best shows  $\frac{2}{6}$ ?  
12) Which letter best shows  $\frac{3}{6}$ ?



- 13) Which letter best shows  $\frac{6}{6}$ ?  
14) Which letter best shows  $\frac{1}{6}$ ?



- 15) Which letter best shows  $\frac{0}{3}$ ?  
16) Which letter best shows  $\frac{1}{3}$ ?

**Answers**

1. **C**  
2. **D**  
3. **D**  
4. **A**  
5. **C**  
6. **B**  
7. **D**  
8. **C**  
9. **A**  
10. **D**  
11. **A**  
12. **B**  
13. **D**  
14. **A**  
15. **A**  
16. **B**