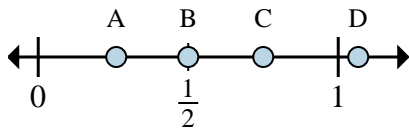
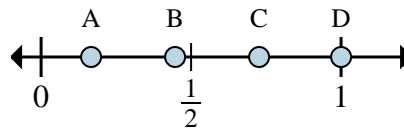
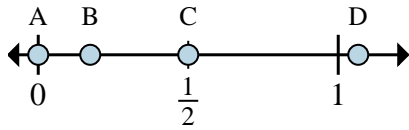


**Determine which letter best shows the location of the fraction.**

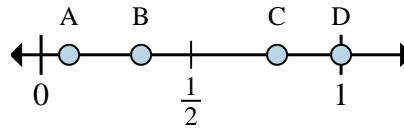
- 1) Which letter best shows $\frac{3}{4}$?
2) Which letter best shows $\frac{2}{4}$?



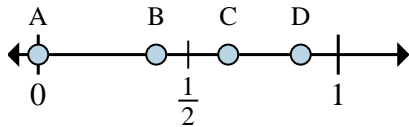
- 3) Which letter best shows $\frac{1}{6}$?
4) Which letter best shows $\frac{6}{6}$?



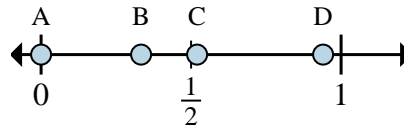
- 5) Which letter best shows $\frac{0}{2}$?
6) Which letter best shows $\frac{1}{2}$?



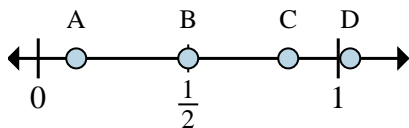
- 7) Which letter best shows $\frac{3}{3}$?
8) Which letter best shows $\frac{1}{3}$?



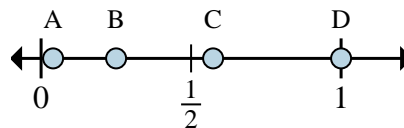
- 9) Which letter best shows $\frac{0}{8}$?
10) Which letter best shows $\frac{7}{8}$?



- 11) Which letter best shows $\frac{0}{6}$?
12) Which letter best shows $\frac{2}{6}$?



- 13) Which letter best shows $\frac{3}{6}$?
14) Which letter best shows $\frac{5}{6}$?



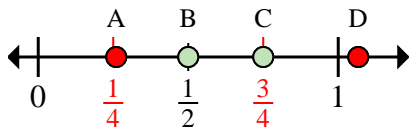
- 15) Which letter best shows $\frac{1}{4}$?
16) Which letter best shows $\frac{4}{4}$?

Answers

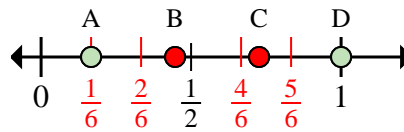
1. _____
2. _____
3. _____
4. _____
5. _____
6. _____
7. _____
8. _____
9. _____
10. _____
11. _____
12. _____
13. _____
14. _____
15. _____
16. _____



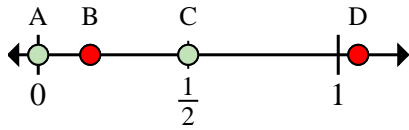
Determine which letter best shows the location of the fraction.



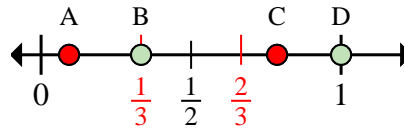
- 1) Which letter best shows $\frac{3}{4}$?
2) Which letter best shows $\frac{2}{4}$?



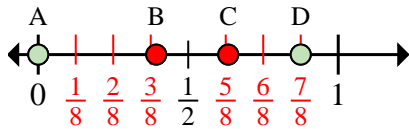
- 3) Which letter best shows $\frac{1}{6}$?
4) Which letter best shows $\frac{6}{6}$?



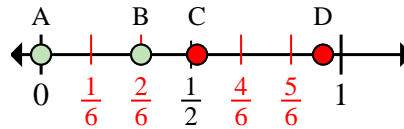
- 5) Which letter best shows $\frac{0}{2}$?
6) Which letter best shows $\frac{1}{2}$?



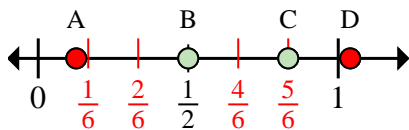
- 7) Which letter best shows $\frac{3}{3}$?
8) Which letter best shows $\frac{1}{3}$?



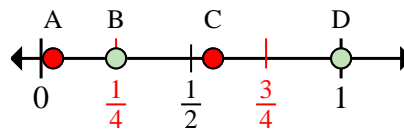
- 9) Which letter best shows $\frac{0}{8}$?
10) Which letter best shows $\frac{7}{8}$?



- 11) Which letter best shows $\frac{0}{6}$?
12) Which letter best shows $\frac{2}{6}$?



- 13) Which letter best shows $\frac{3}{6}$?
14) Which letter best shows $\frac{5}{6}$?



- 15) Which letter best shows $\frac{1}{4}$?
16) Which letter best shows $\frac{4}{4}$?

Answers

1. **C**
2. **B**
3. **A**
4. **D**
5. **A**
6. **C**
7. **D**
8. **B**
9. **A**
10. **D**
11. **A**
12. **B**
13. **B**
14. **C**
15. **B**
16. **D**